

# Electronic Circuits 1


ENEE 2303

Mr. Mohammad AL-Jubeh

# Electronic Circuits



- ▶ We encounter electronics in our daily life in form of telephones, radios, television, audio equipment, home appliances, computer and equipment for industrial control and automation .



- ▶ The field of electronics deals with the design and applications of electronic devices .

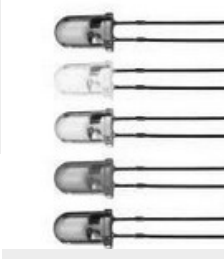
# Electronics Devices

## ▶ Diodes

- a) Rectifier diode
- b) Zener diode





## c) Light Emitting Diode (LED)



## ▶ Transistors

- a) Bipolar Junction Transistor (BJT)
- b) Field Effect Transistor (FET)



## ▶ Integrated Circuit (IC)

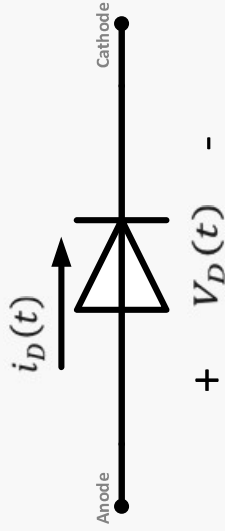


# Diode


- ▶ It is an electronic device with a single p-n junction and it has the ability to conduct current in one direction while blocking current in the other direction.

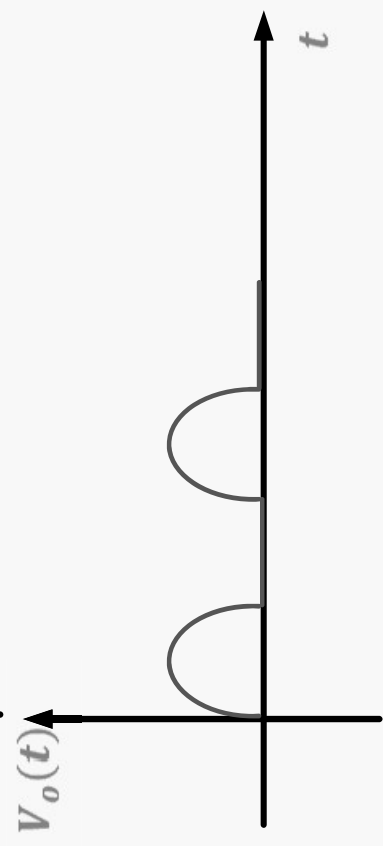
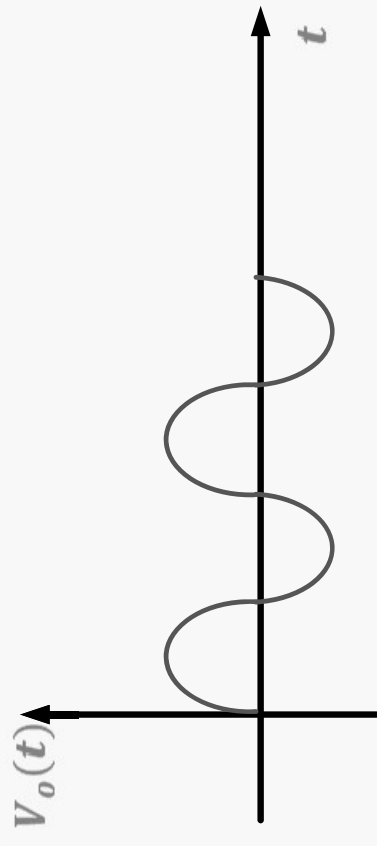
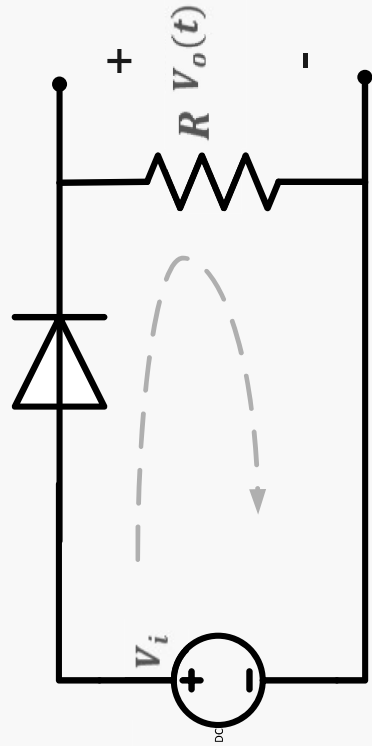
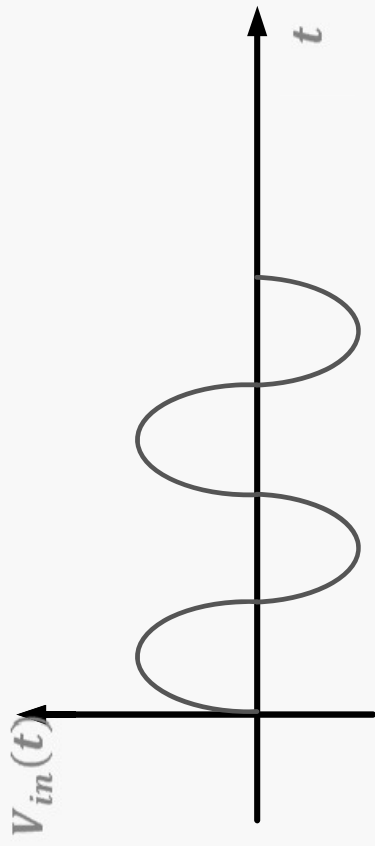
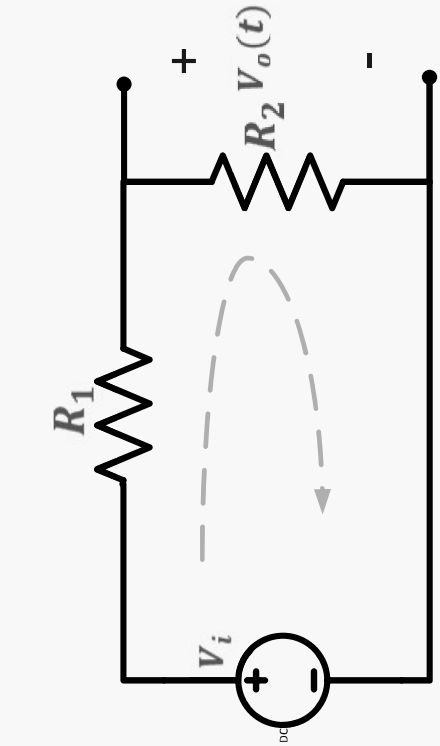


- ▶ Circuit Symbol :



- ▶ Physical construction

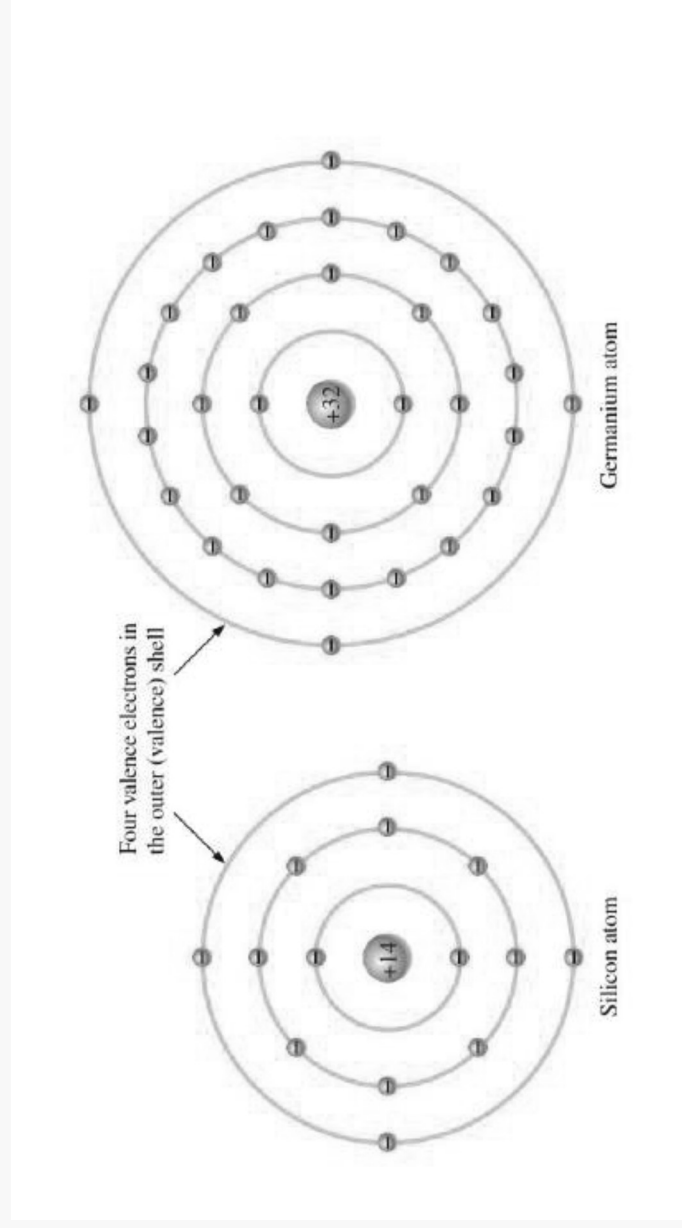




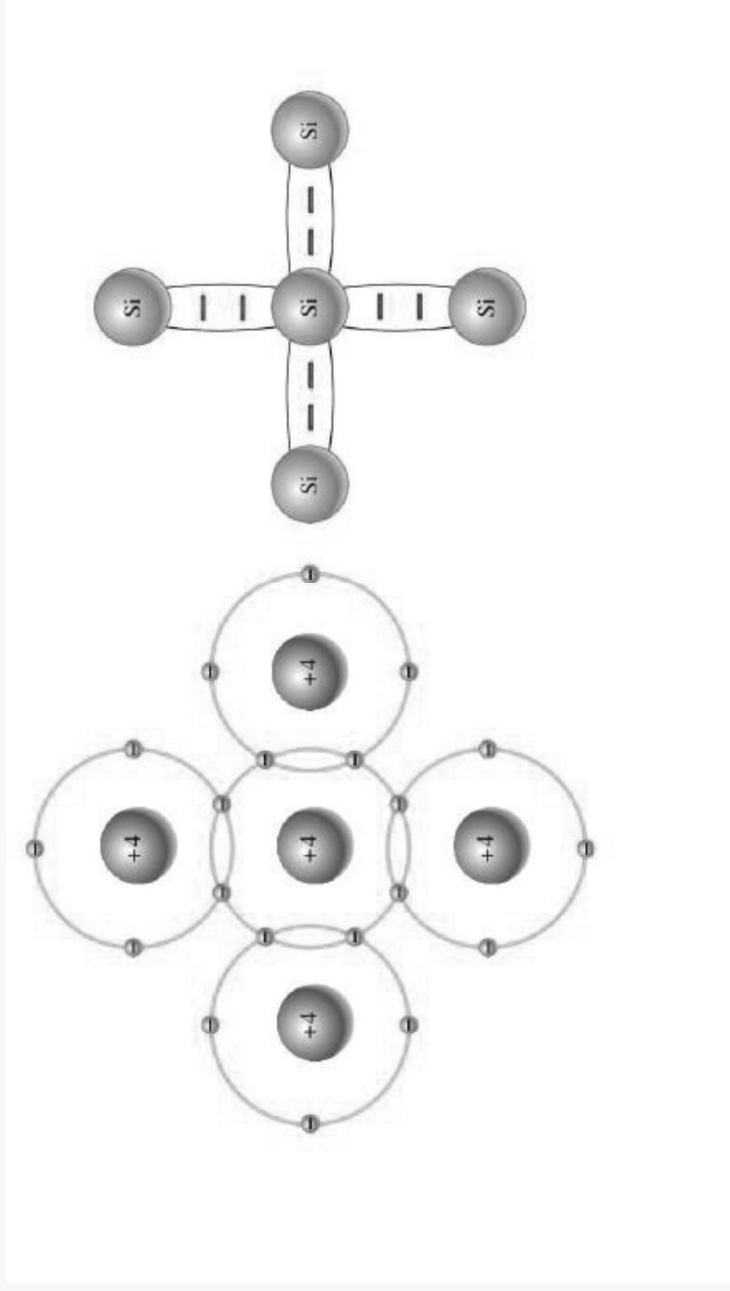
# Semiconductor

- ▶ Electronic devices such as diodes, transistors and integrated circuits are made of a semiconductor material .
- ▶ Semiconductors : materials whose resistance lies between low resistance of conductor and the high resistance of insulator .

# Atomic structure



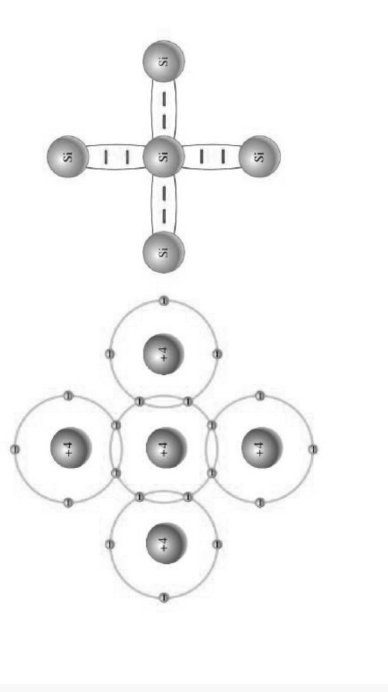
# Covalent bond





# Covalent bond


- ▶ A silicon (Si) atom with its four valence electrons shares an electron with each of its four neighbors
- ▶ This effectively creates eight shared valence electrons for each atom and produces a state of chemical stability .



- ▶ Also, this sharing of valence electrons produce the covalent bonds that hold the atom together; each valence electron is attracted equally by the two adjacent atoms which share it .

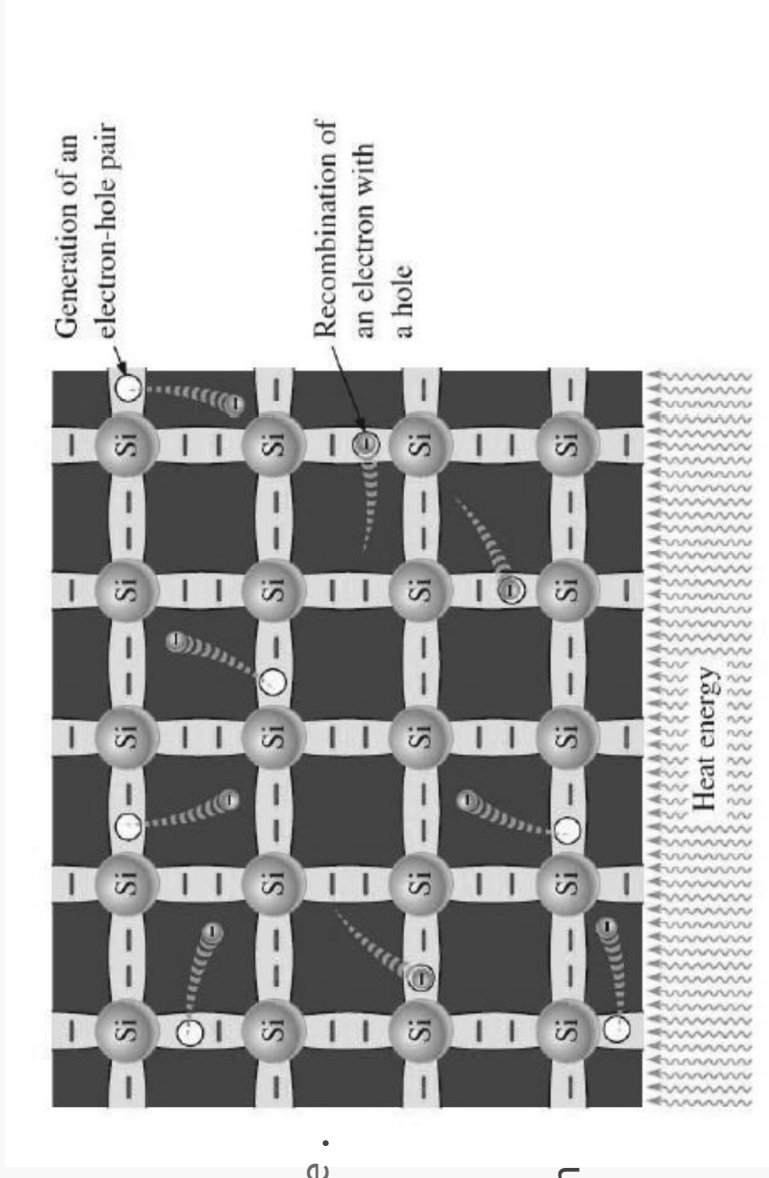
# Covalent bond in silicon crystals

- ▶ At absolute zero degree ( $-273\text{ C}^\circ$ ) all valence electrons are tightly bonded to their atoms and there is no free electrons, so the silicon behave as an insulator .



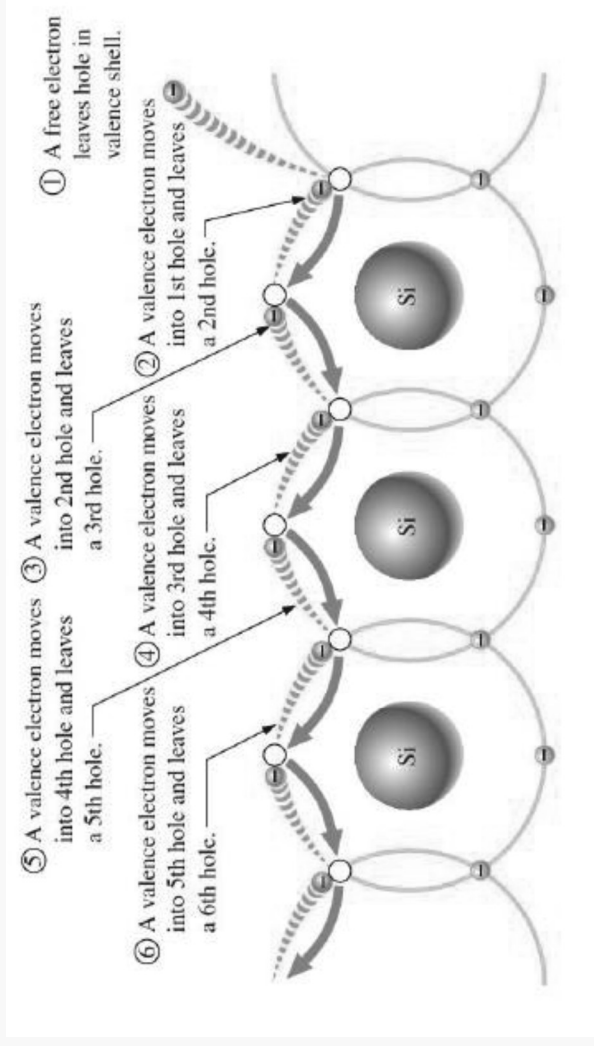
# Rupture of the a covalent bond

- ▶ When an electron becomes free that is unattached to any atom, a vacancy is left in the valence band within the crystal . This vacancy is called hole .
- ▶ For every free electron, there is one hole .
- ▶ One broken covalent bond  $\rightarrow$  one free electron + one hole
- ▶ At room temperature there is one broken covalent bond for every  $3 \times 10^{12}$  pure Si atoms .
- ▶ At room temperature there are few available charge carriers (free electrons + holes)

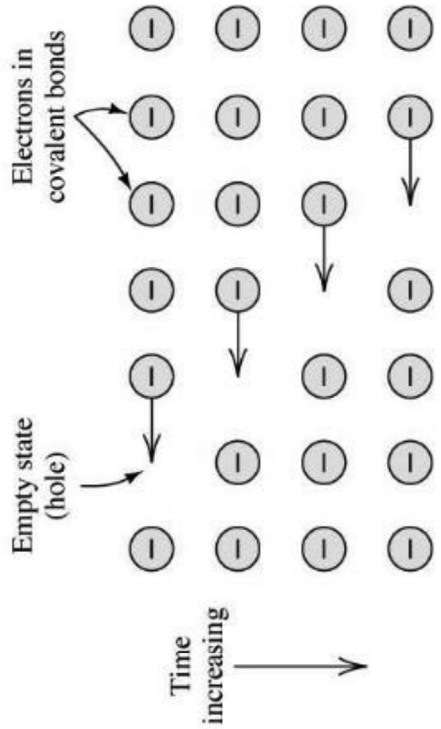


# Hole motion

- ▶ When a valence electron moves left to right to fill a hole while leaving another hole behind, the hole has effectively moved from right to left.



# Holes movement



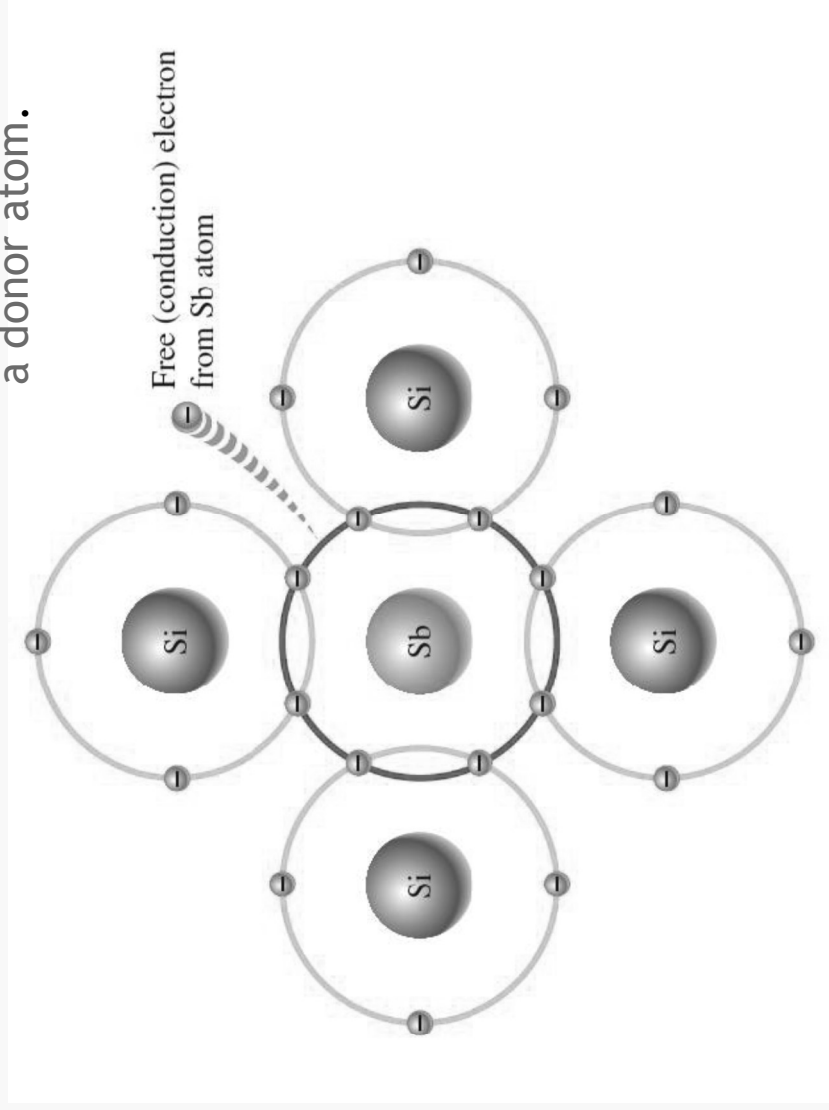
# Doping

- ▶ A manufacturing process that adds free charge carriers (free electronic or hole) into a pure semiconductor material to increase its conductivity .

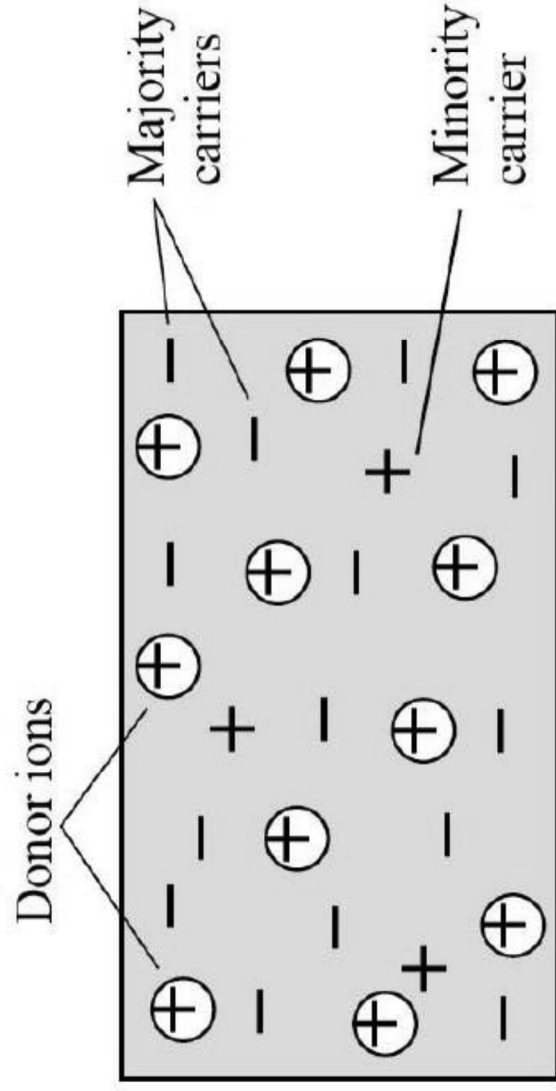
- ▶ **Doping** → **n-type or p-type material**

## N - type semiconductor

Sb (antimony) has five valence electrons and it is called a donor atom.

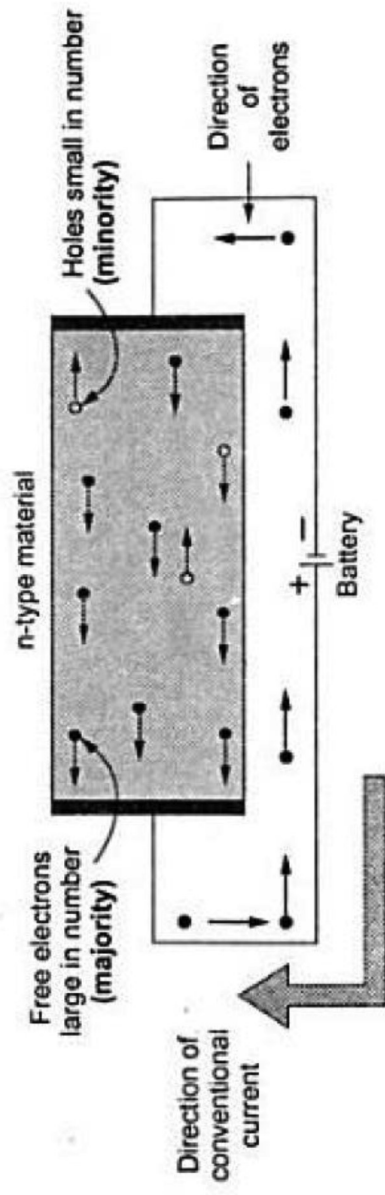


- ▶ Sb (antimony) has five valence electrons and it is called a donor atom.
- ▶ In the n-type material the free electrons are the majority and the holes are the minority.





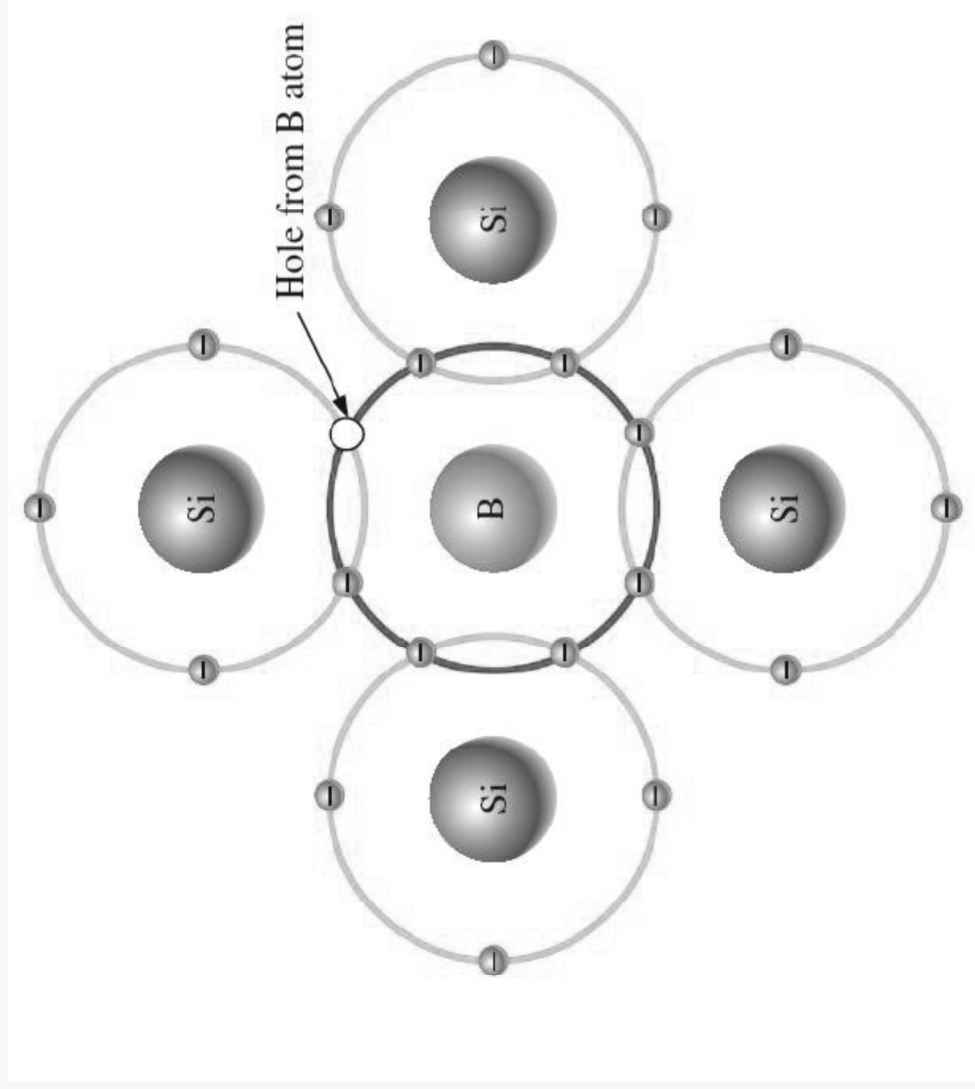
# Conduction in n-type material



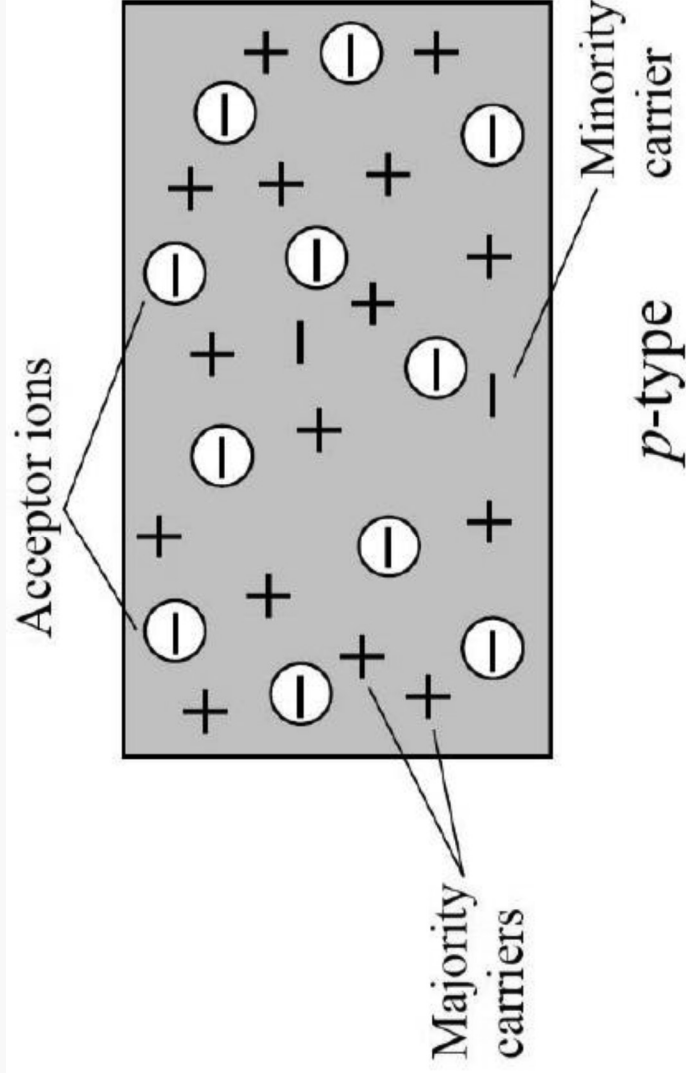
Conduction in n-type material

## P - type semiconductor

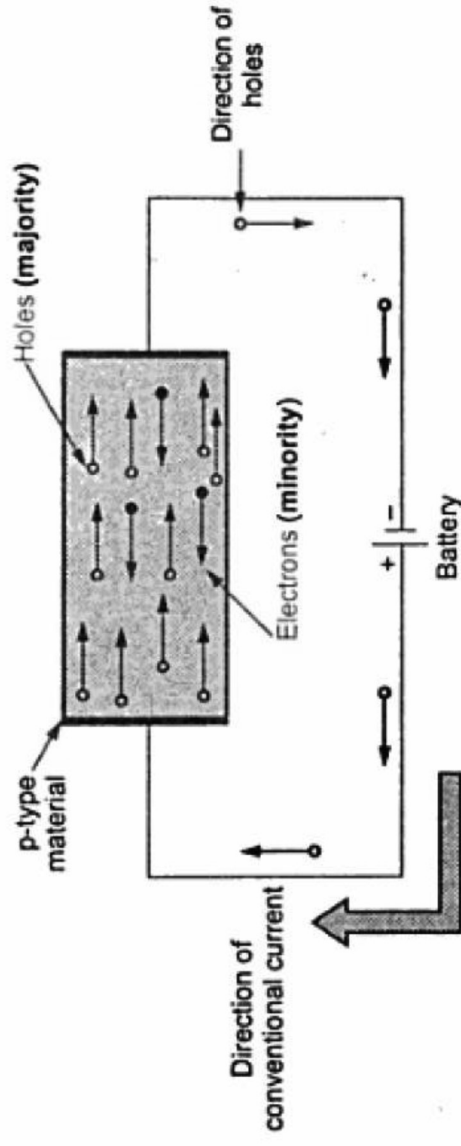
B (Boron ) has three valence electrons (acceptor atom)



- ▶ B (Boron ) has three valence electrons (acceptor atom)  
In the p-type material the holes are the majority and the free electrons are the minority .



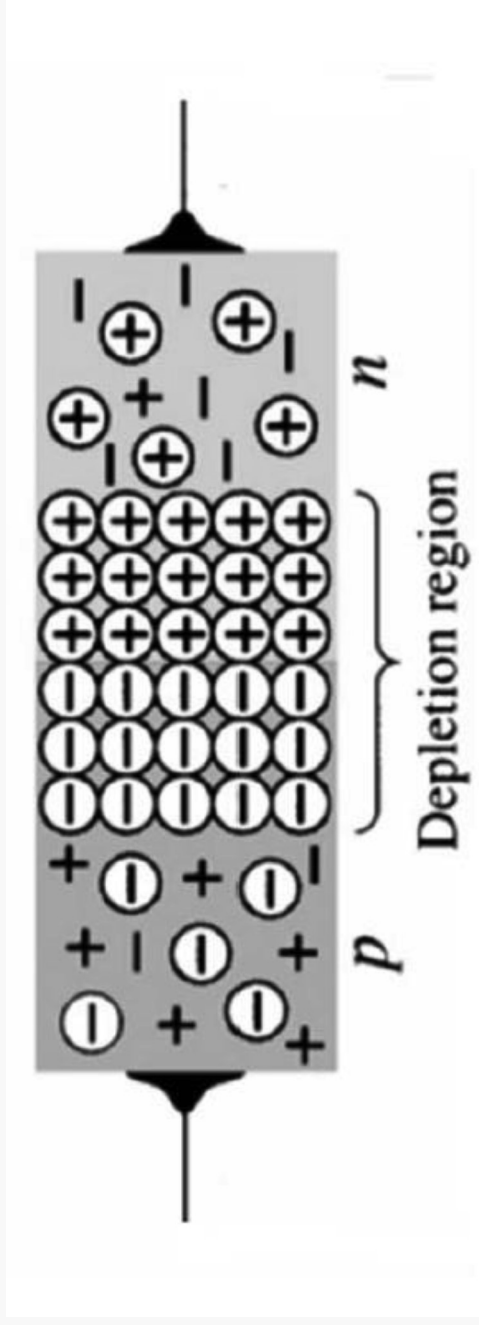
# Conduction in p-type material



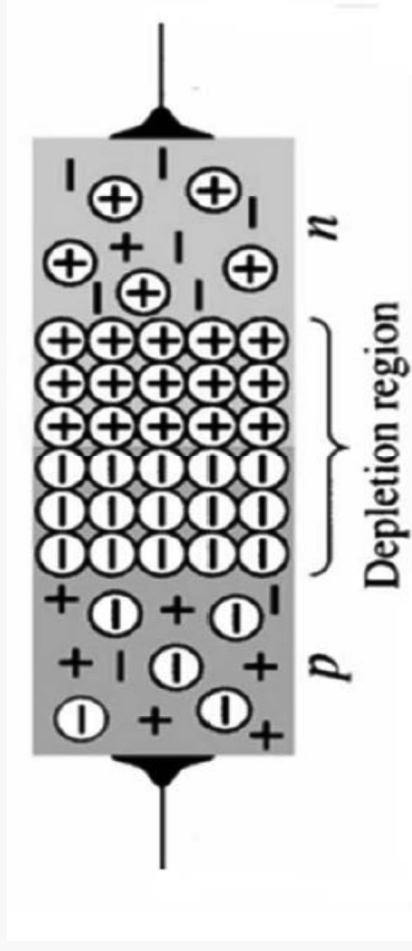
**Conduction in p-type material**

# Pn junction

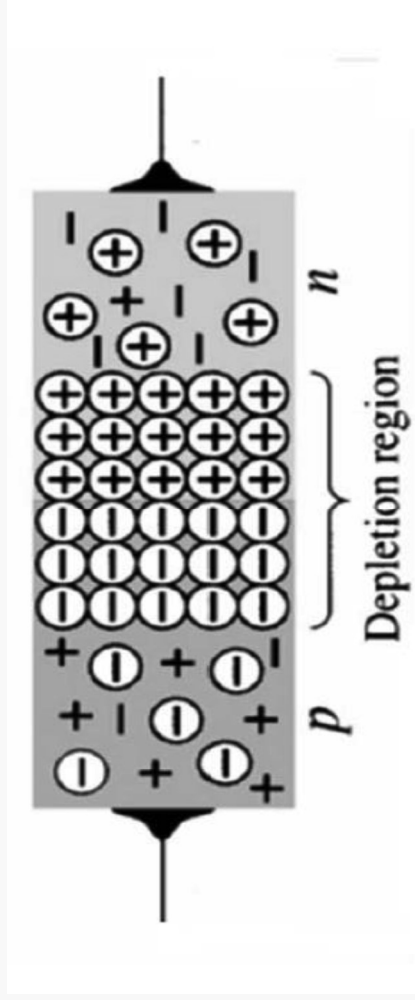
- ▶ The p-n junction is the basis for diodes, certain transistors, and other devices.



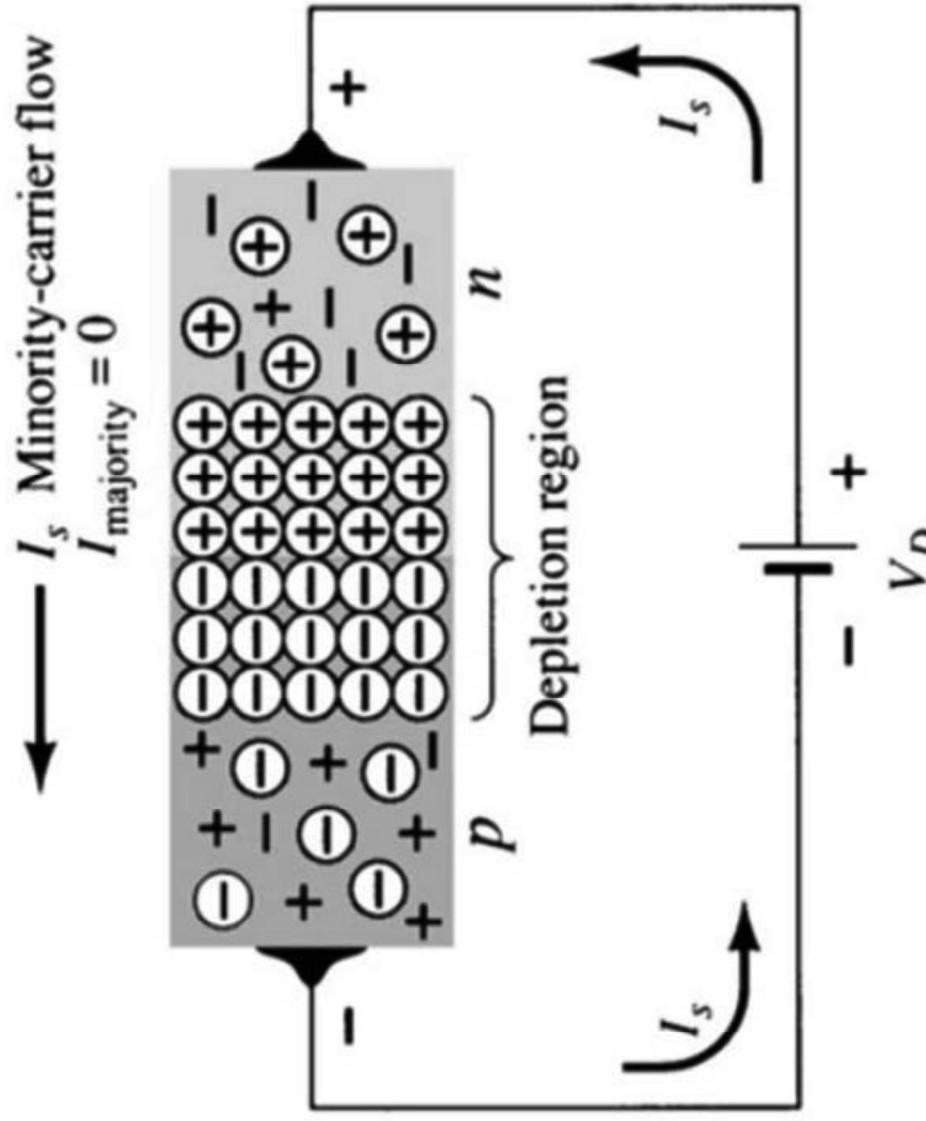
- 1 ) Electrons from the n-type material near the junction diffuse across the junction.
- 2) These electrons fill the holes in the p-type material adjacent to the junction.
- 3) As a result of electrons leaving the n-type material , donor ions are created on the n side of the junction .
- 4) When these electrons fill holes in the p side of the junction , acceptor ions are produced.
- 5) A wall of stationary positive ions is aligned with a wall of negative ions along the n and p sides of the junction .



- 6 ) The space occupied between the ion walls is called depletion region.
- 7 ) Whenever there exists a positive charge with respect to a negative charge , a voltage difference is set between charges ;(Junction potential, Junction barrier).
- 8 ) The junction potential acts as potential barrier that tend to prevent majority carriers from crossing the junction.
- 9 ) Minority carriers are aided by the junction potential .



# Reverse bias of a pn junction

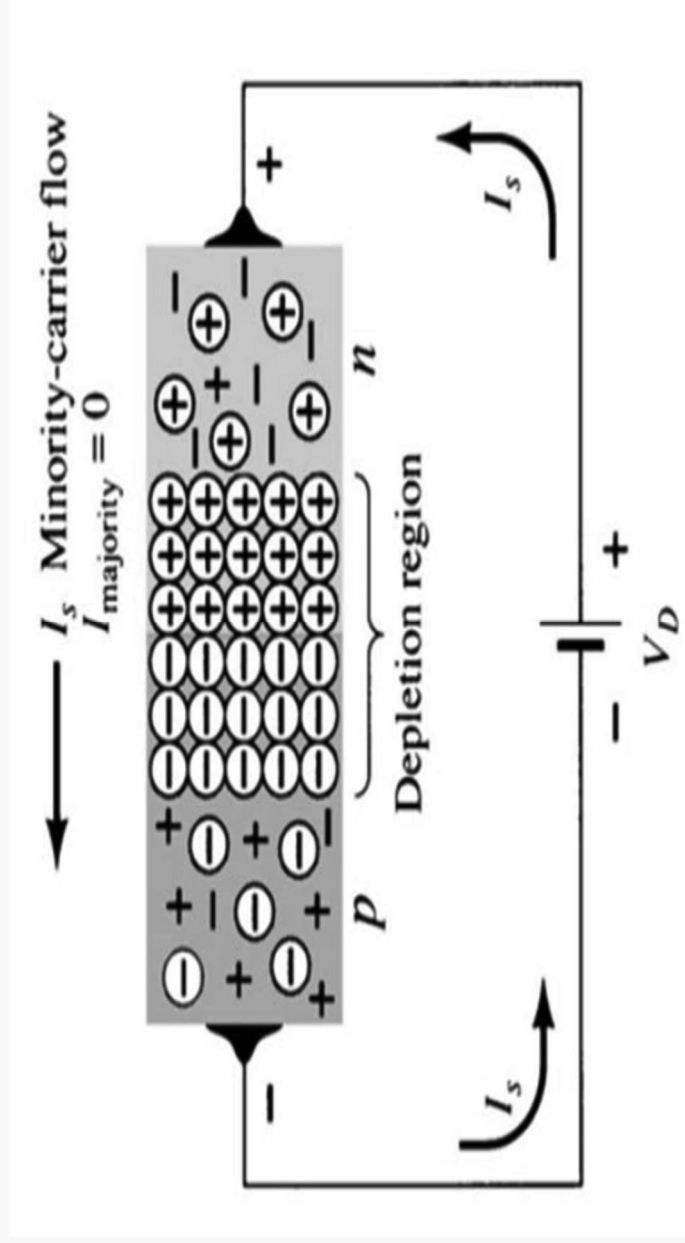




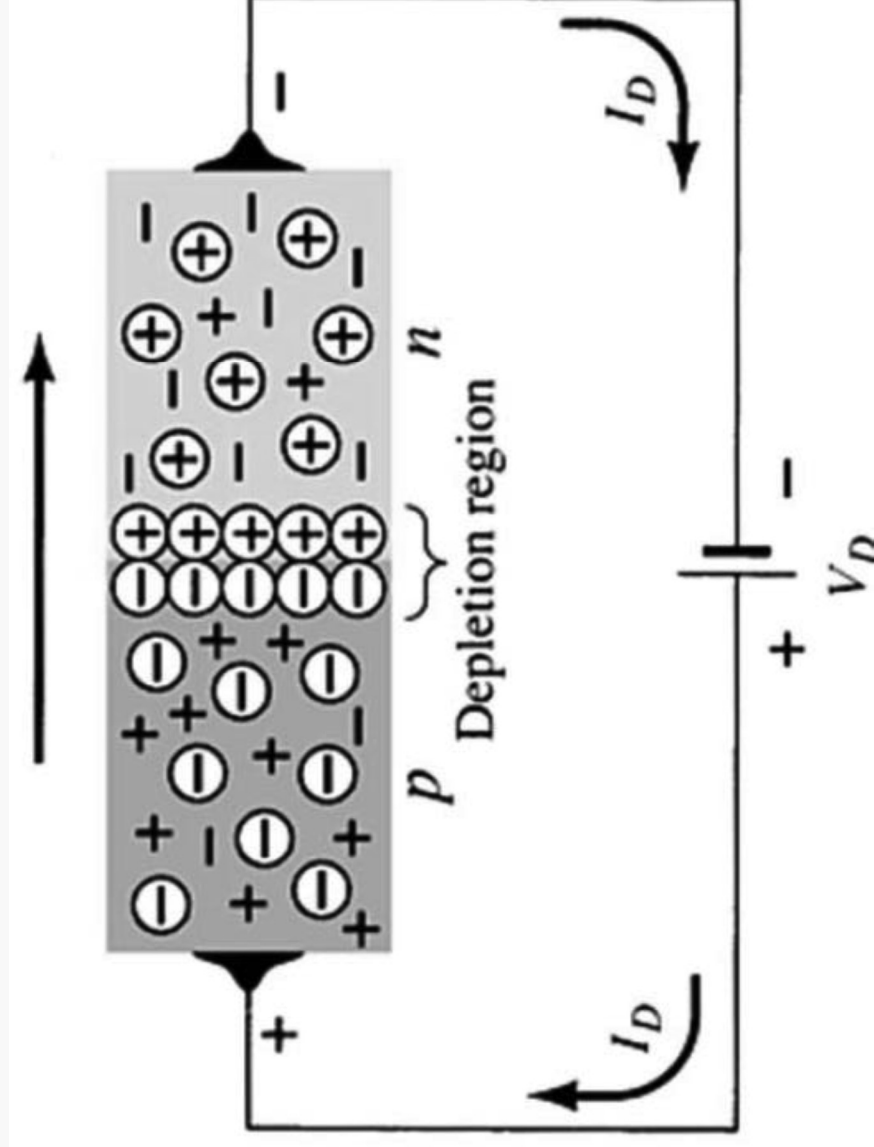
► The reverse voltage causes the depletion region to widen .

► The electrons in the n-type material are attracted toward the positive terminal of the voltage source .

► The holes in the p-type material are attracted toward the negative terminal of the voltage source .



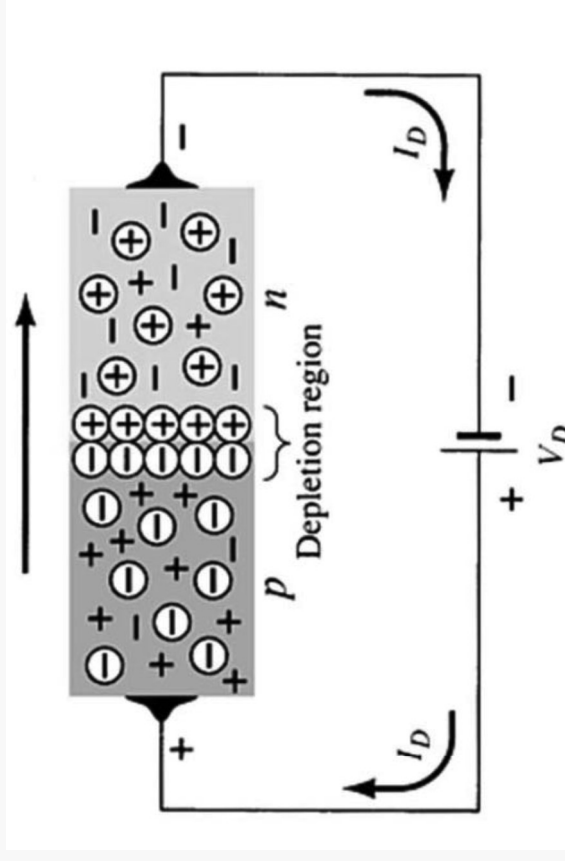
# Forward bias of a pn junction



▶ The forward voltage causes the depletion region to narrow

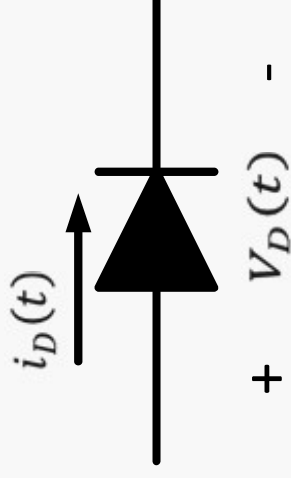
▶ The electrons and holes are pushed toward the p-n junction

▶ The electrons and holes have sufficient energy to cross the p-n junction



# Diode Equation

$$i_D(t) = I_S \left( e^{\frac{V_D(t)}{\eta V_T}} - 1 \right)$$



$I_S$ : Revers saturation current

$$I_S = 10^{-12}, 10^{-14} \text{ A}$$

$\eta$  : eta

$$\eta = \begin{cases} 1 & \text{for Ge} \\ 2 & \text{for Si (small current)} \\ 1 & \text{for Si (large current)} \end{cases}$$

$V_T$  = Thermal Voltage

$$V_T = \frac{T}{11600} ; T \text{ in kelvin}$$

At Room Temp.  $T=300\text{k}$

$\therefore V_T = 25.69 \text{ mV}$  at Room Temp.

- ▶ The equation is a non linear equation
- $\therefore$  The Diode is non linear Device

▶ For positive  $V_D(t)$

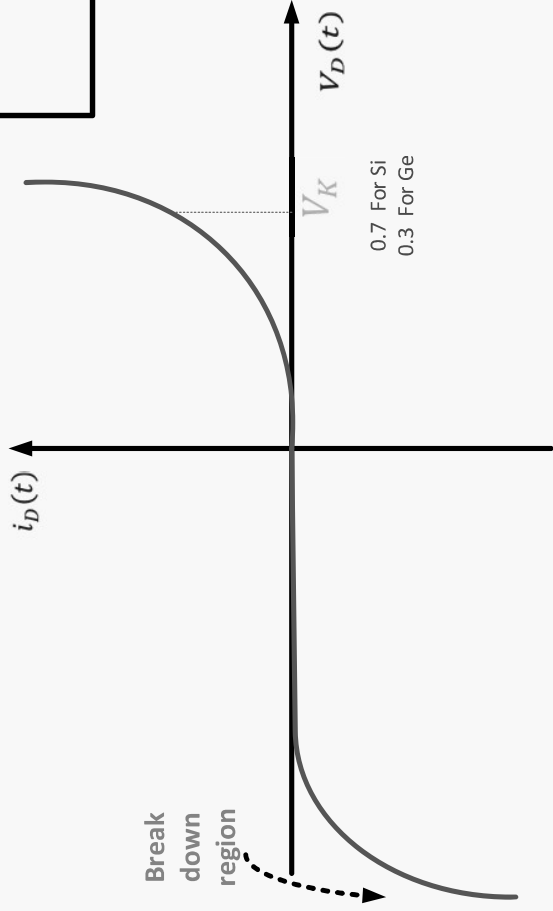
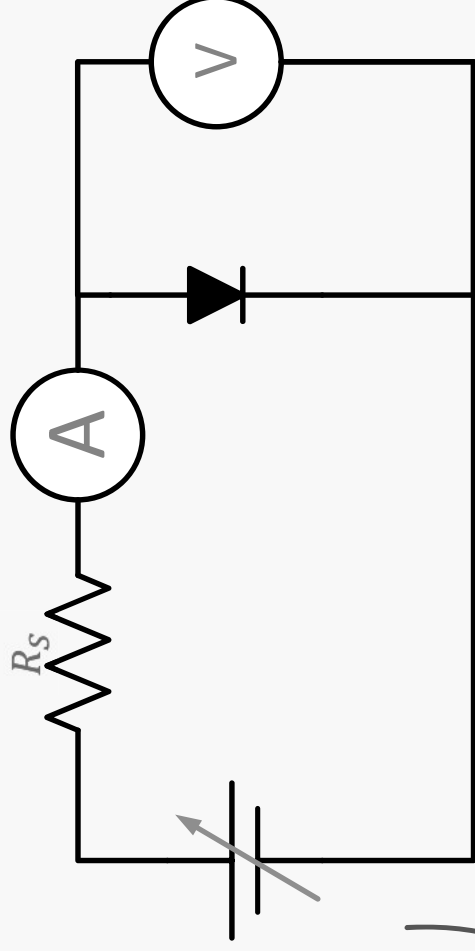
$$i_D(t) = I_S \left( e^{\frac{V_D(t)}{\eta V_T}} \right)$$

▶ For negative  $V_D(t)$

$$i_D(t) = -I_S$$

$$i_D(t) = I_S \left( e^{\frac{V_D(t)}{\eta V_T}} - 1 \right)$$

# Diode V-I Characteristic curve



## Approaches to Diode Circuit Analysis

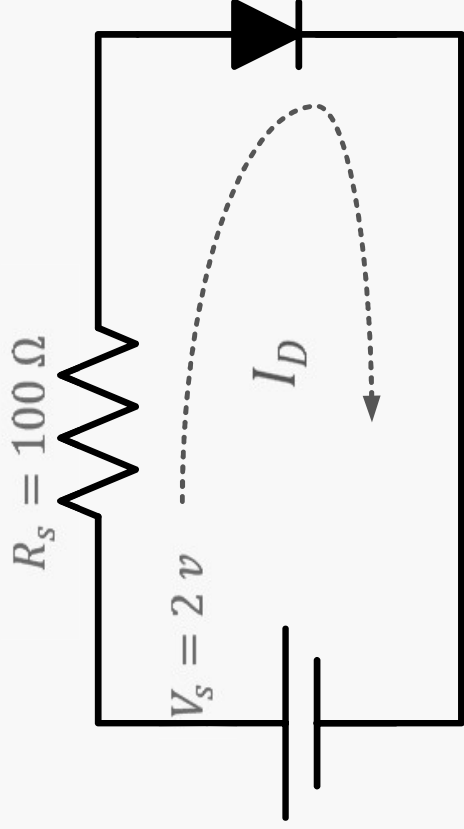
The rectifier diode is a non linear device .

There are essentially three basic approaches to the solution of such problem :

- 1- The use of non linear mathematics
- 2- The use of graphical techniques
- 3- The use of equivalent circuit (models)
  - Piece wise linear models

# 1) The use of non linear mathematic

- ▶ For the circuit shown, find  $I_D$  and  $V_D$



Silicon:

$$\eta = 1.1$$

$$I_S = 10^{-14}\text{ A}$$

- ▶ KVL :  $V_S = R_S I_D + V_D$

$$I_D = I_S (e^{\frac{V_D}{\eta V_T}} - 1)$$

- ▶ Since the diode is forward biased , we could approximate

$$I_D = I_S (e^{\frac{V_D}{\eta V_T}})$$

- ▶ Solving for  $V_D = \eta V_T \ln \frac{I_D}{I_S}$



∴ We have two equations and two unknowns

$$V_S = R_S I_D + V_D \dots\dots\dots 1$$

$$V_D = \eta V_T \ln \frac{I_D}{I_S} \dots\dots\dots 2$$

$$\therefore V_S = R_S I_D + \eta V_T \ln \frac{I_D}{I_S}$$

- non linear equation

# Iterative Analysis

1) Let  $V_D = 0.7\text{v}$

$$I_D = \frac{2-0.7}{0.1k} = 13 \text{ mA}$$

$V_D = 0.7882392\text{v}$     The error is large

2) Let  $V_D = 0.7882392\text{v}$

$$I_D = 12.117608 \text{ mA}$$

$V_D = 0.7862529\text{v}$     The error is small

$$I_D = \frac{V_S - V_D}{R_S}$$
$$V_D = \eta V_T \ln \frac{I_D}{I_S}$$

3) Let  $V_D = 0.7862529\text{v}$

$I_D = 12.137471\text{ mA}$

$V_D = 0.7862991\text{v}$     The error getting smaller

4) Let  $V_D = 0.7862991\text{v}$

$I_D = 12.137009\text{mA}$

$V_D = 0.786298066\text{v}$

$I_D = 12.137\text{ mA}$

$V_D = 0.7863\text{v}$

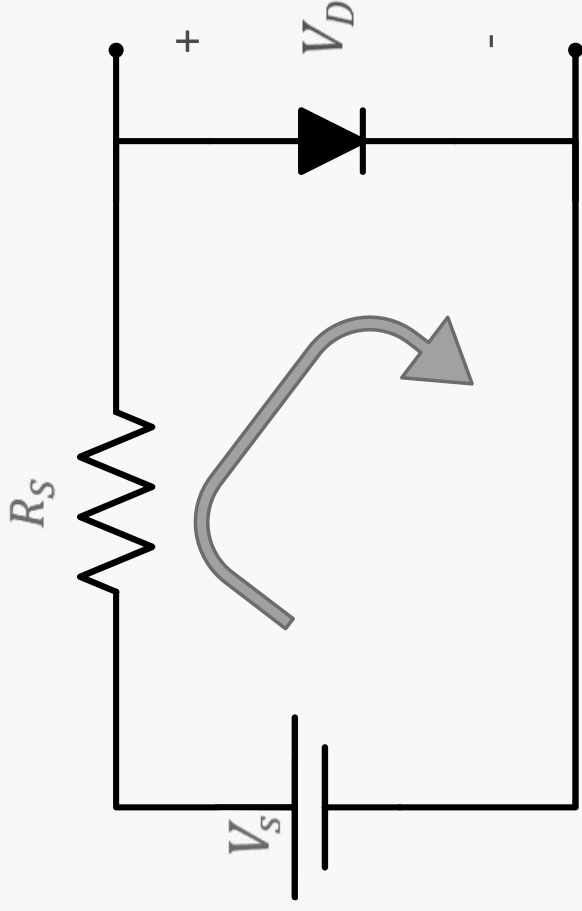
## 2) The use of graphical techniques

$$V_S = R_S I_D + V_D \quad \dots\dots\dots 1$$

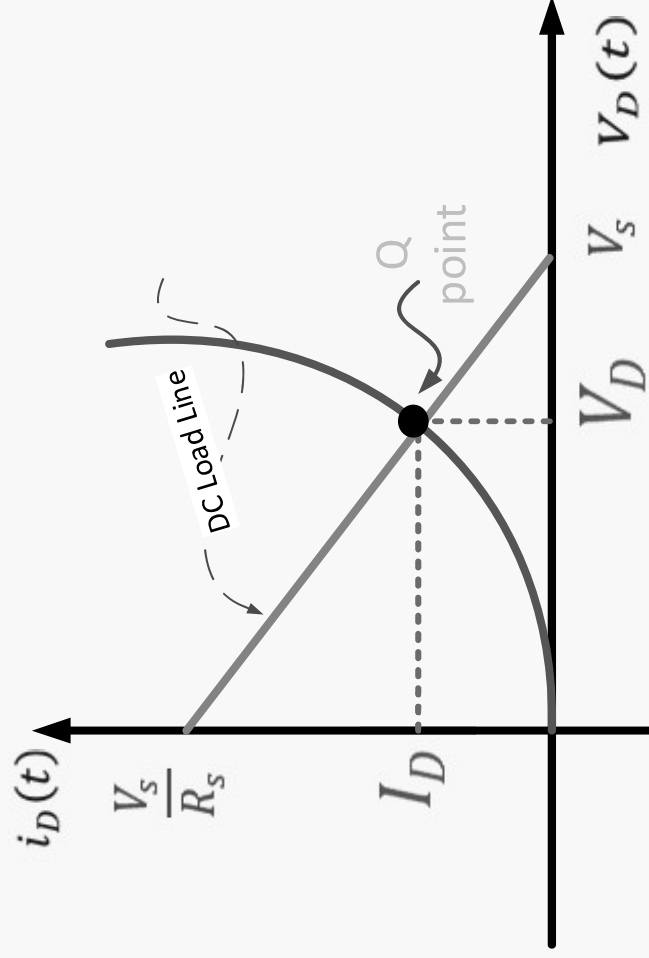
$$I_D = I_S \left( e^{\frac{V_D}{nV_T}} - 1 \right) \quad \dots\dots\dots 2$$

► Using equation 1

$$I_D = -\frac{1}{R_S} V_D + \frac{V_S}{R_S}$$



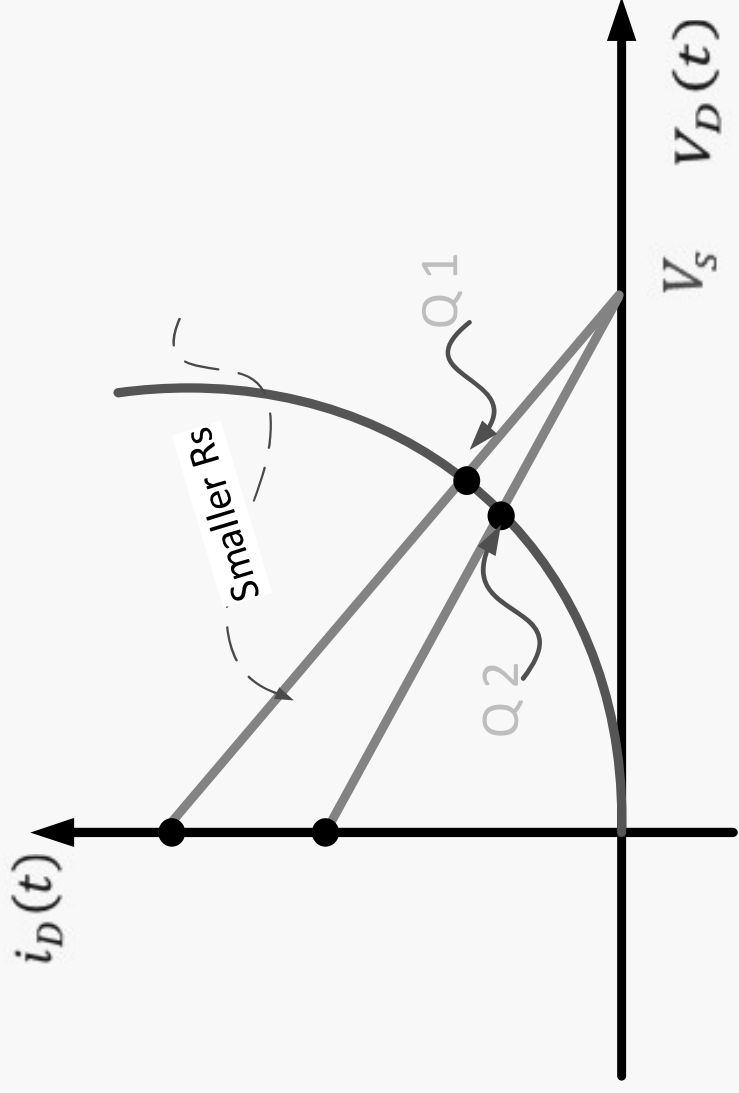
Drawing the two equations



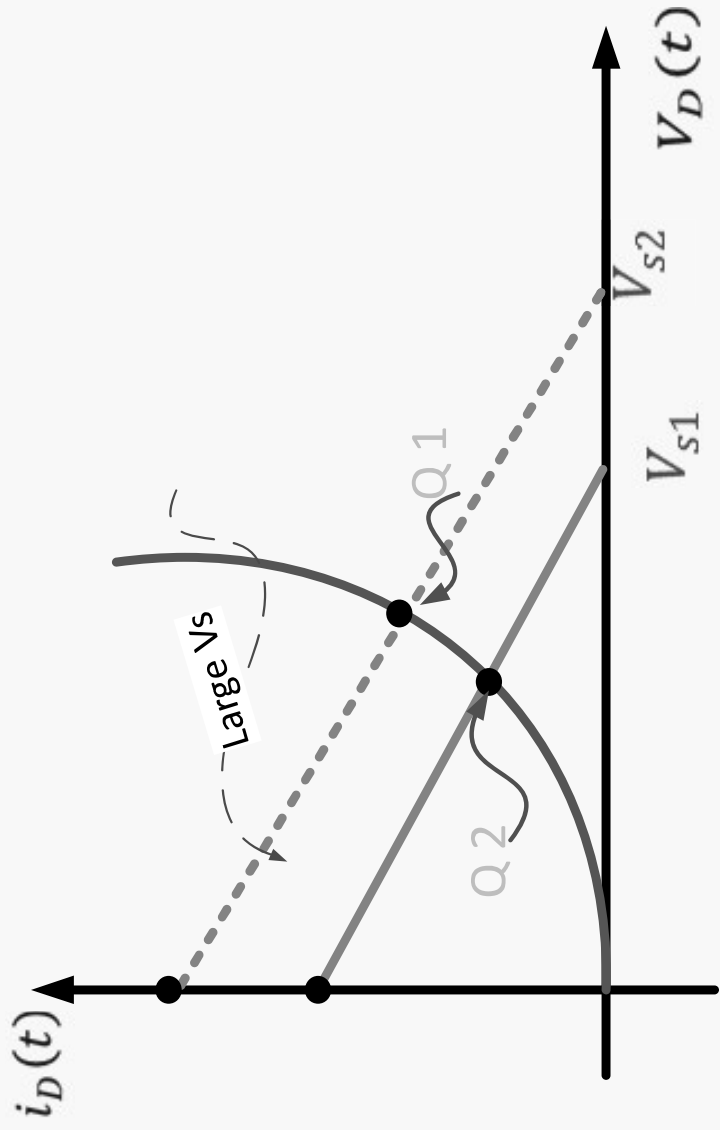
$$I_D = -\frac{1}{R_S} V_D + \frac{V_S}{R_S}$$

- ▶ Q point =  $(I_{DQ}, V_{DQ})$  = Quiescent point

# The effect of $R_s$ on the Qpoint



# The effect of $V_s$ on Qpoint



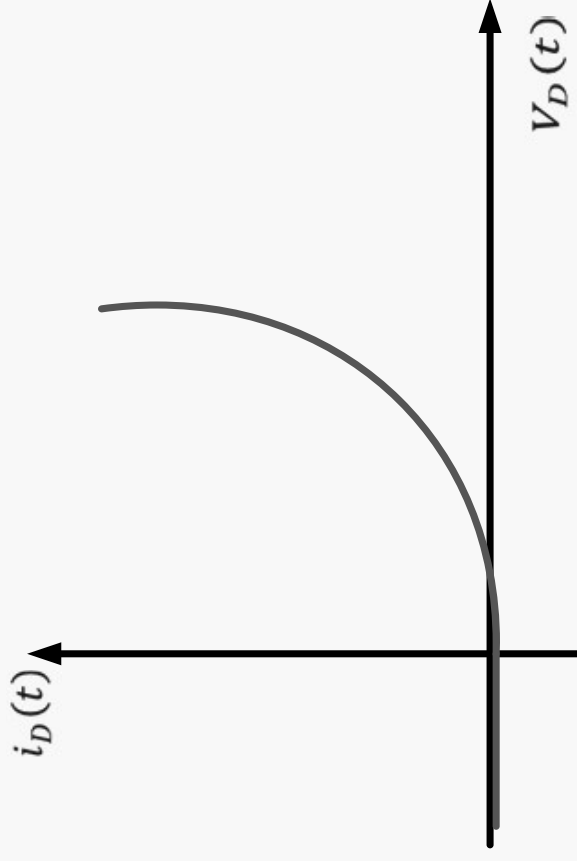
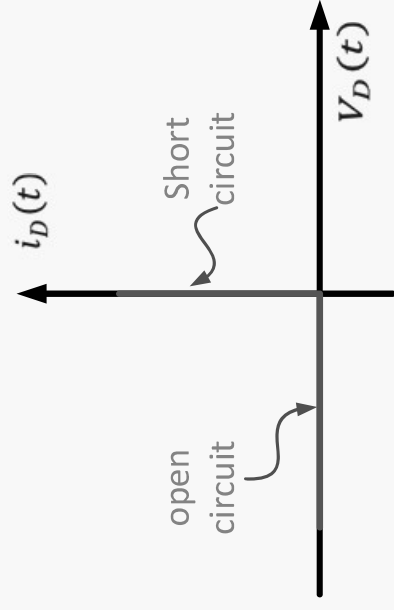
# The Use of Diode Model



### 3) The use of models

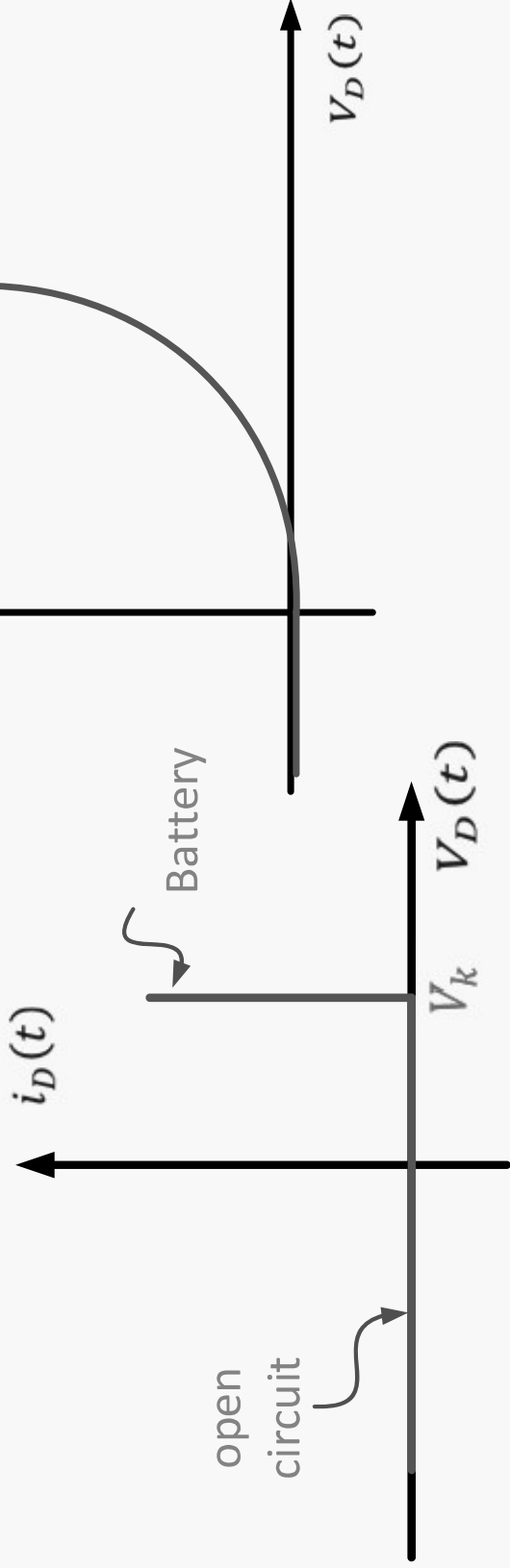
- ▶ A piece wise linear models is an electrical equivalent circuit of a nonlinear electronic device
- ▶ It is composed of linear circuit elements arranged to approximate the characteristics of the electronic device .

## a) ideal diode model



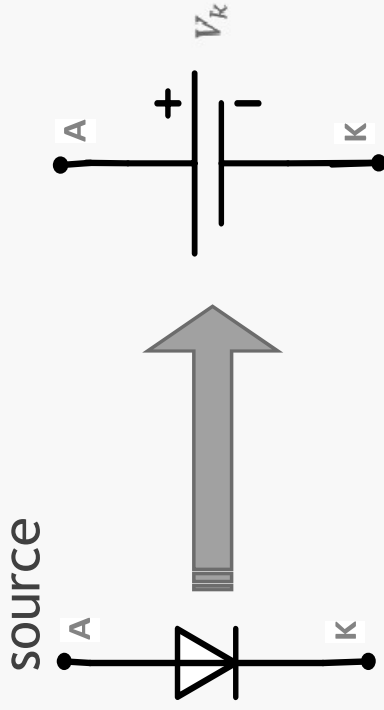
- ▶ When  $V_s \geq 0$  ; the Diode is on, and replaced with short circuit
- ▶ When  $V_s < 0$  ; the Diode is off, and replaced with open circuit

## b) Knee Voltage model

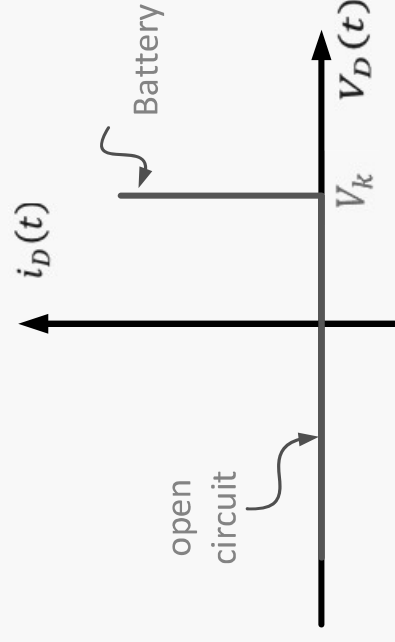
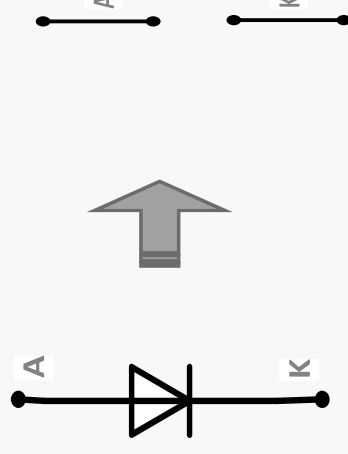


## b) Knee Voltage model

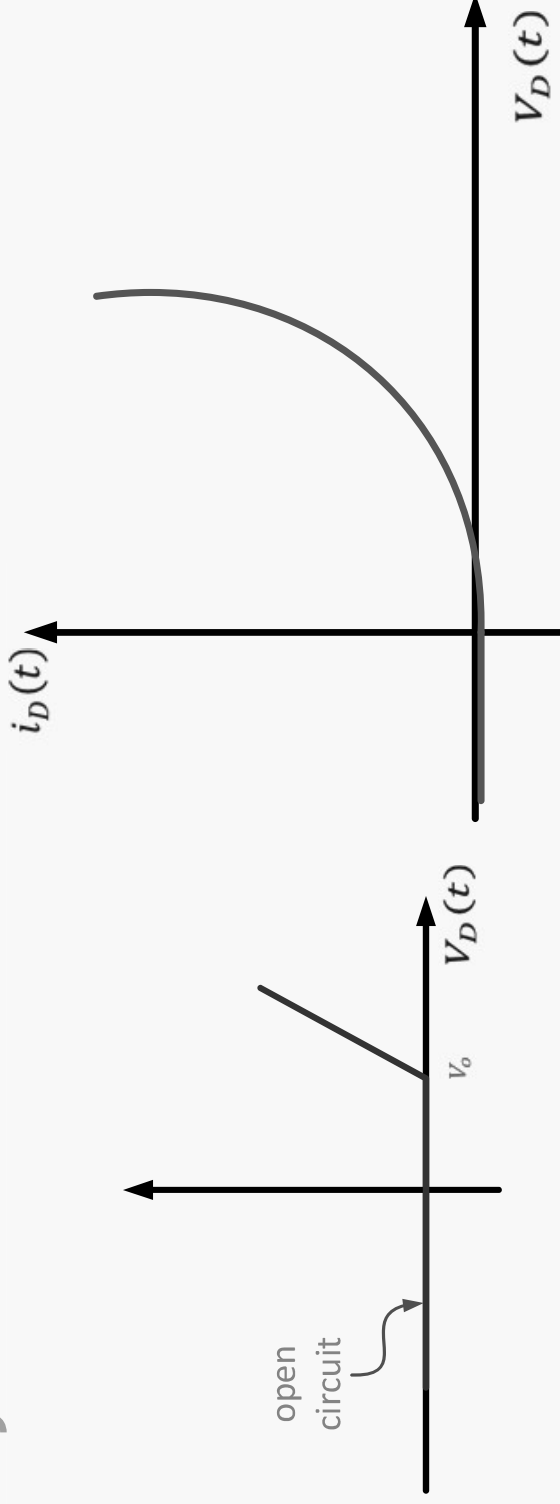
- ▶ When  $V_s \geq V_k$ ; the Diode is on, and replaced with a constant voltage source



- ▶ When  $V_s < V_k$ ; the Diode is off, and replaced with open circuit



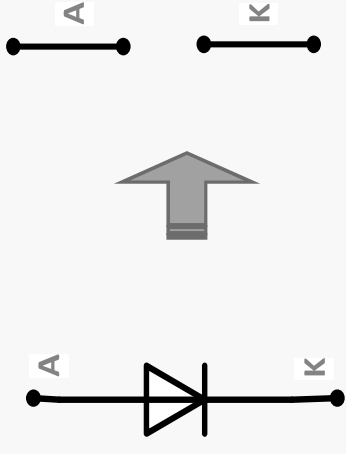
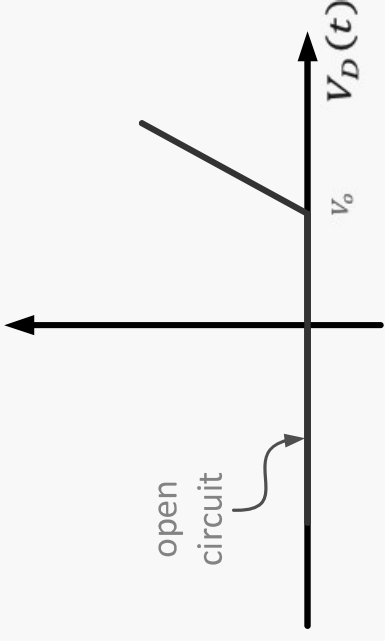
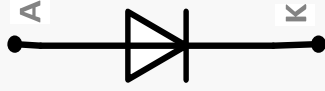
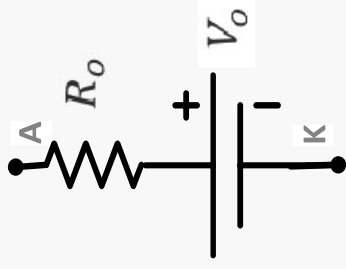
### c) Dynamic resistance model



- ▶ When  $V_s \geq V_0$ ; the Diode is on, and replaced with a constant voltage source  $V_0$  and resistance  $R_o$
- ▶ When  $V_s < V_0$ ; the Diode is off, and replaced with open circuit

## c) Dynamic resistance model

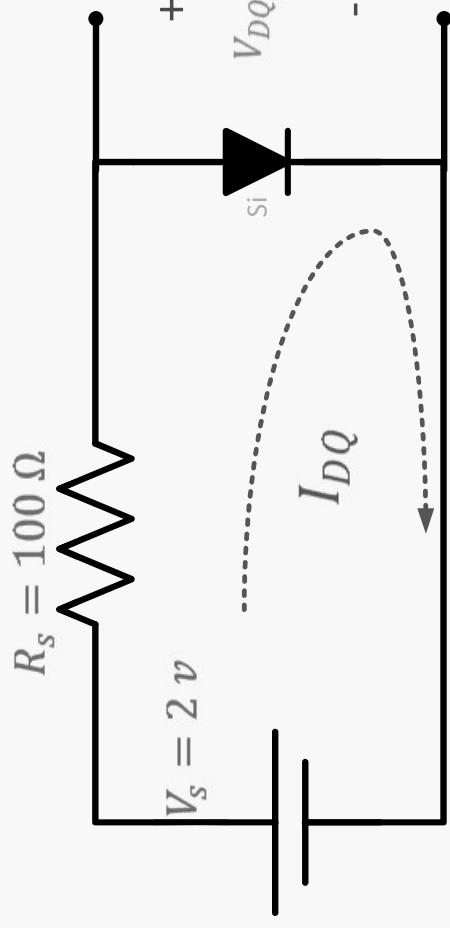
- ▶ When  $V_s \geq V_o$ ; the Diode is on, and replaced with a constant voltage source  $V_o$  and resistance  $R_o$



- ▶ When  $V_s < V_o$ ; the Diode is off, and replaced with open circuit

# Example

- ▶ Find the Q point ( $I_{DQ}$ ,  $V_{DQ}$ ) using
  - a) ideal diode model
  - b) knee voltage model

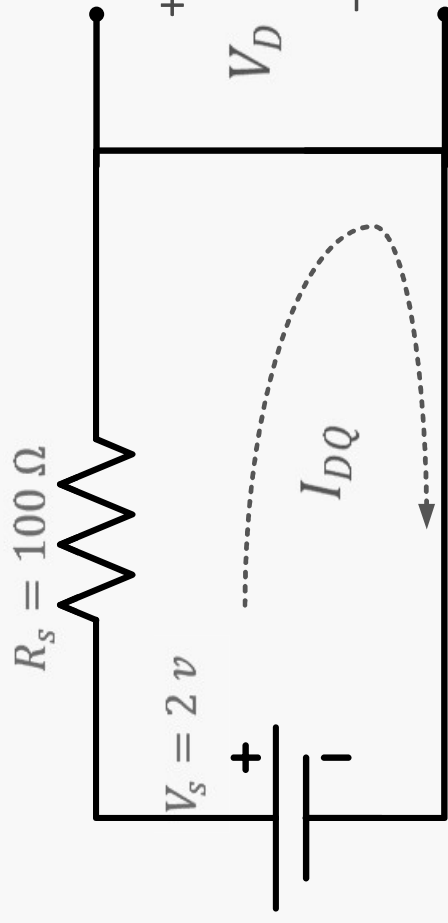


## a) using ideal diode model

since  $V_s \geq 0$ , the diode is on and replaced with short circuit .

$$\therefore I_{DQ} = \frac{2}{100} = 20 \text{ mA}$$

$$\therefore V_{DQ} = 0 \text{ V}$$



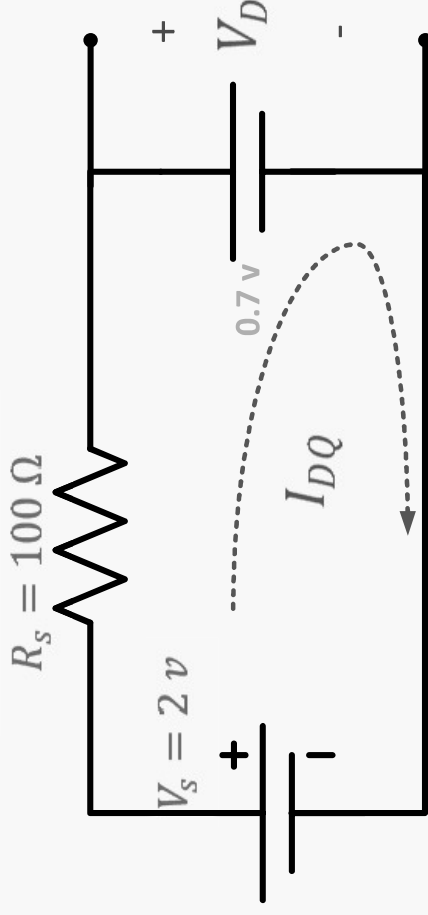
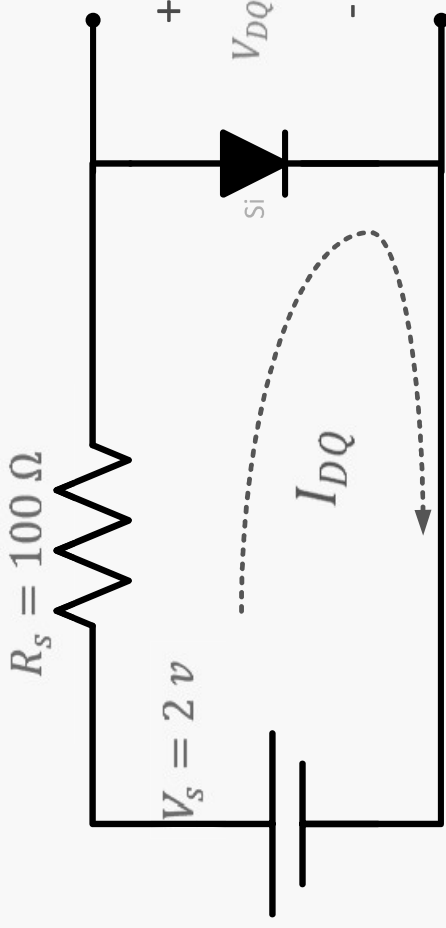


## b) Using knee voltage model

since  $V_S \geq 0.7$ , the diode is on and replaced with  $V_k = 0.7$ .

$$\therefore I_{DQ} = \frac{2 - 0.7}{100} = 13 \text{ mA}$$

$$\therefore V_{DQ} = 0.7 \text{ V}$$



c) using nonlinear mathematic

$$I_{DQ} = 12.137 \text{ mA}$$

$$V_{DQ} = 0.7863 \text{ V}$$

## Taking the knee voltage into a count

- ▶ If  $V_S > 10 V_k$ , we could use ideal diode model .
- ▶ If  $V_S < 10 V_k$ , we must use knee voltage model .

# Diode large signal application

## Example

- Find the Q point

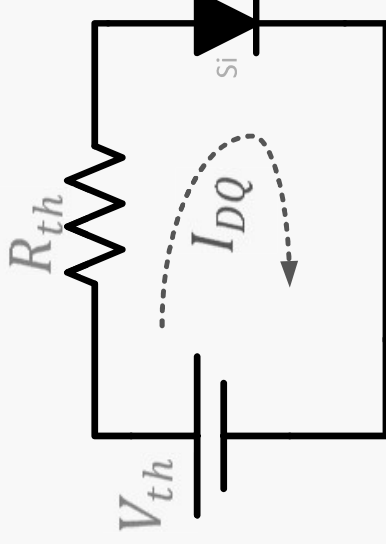
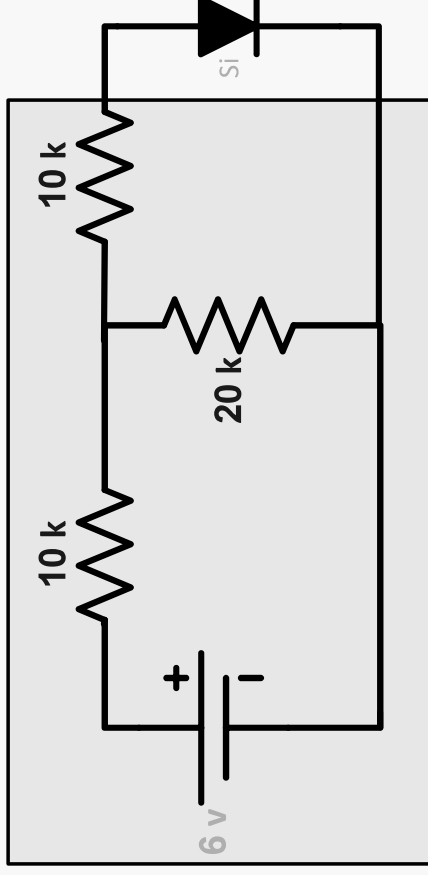
Using thevenin's theorem, the circuit is simplified to

$$R_{th} = 10k + 10k \parallel 20k = 16.7k$$

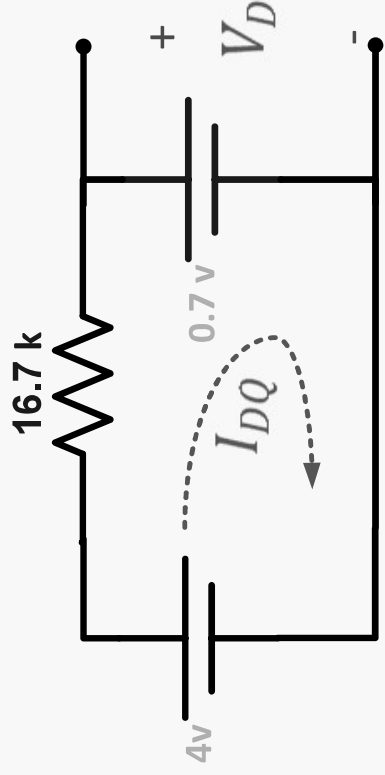
$$V_{th} = \frac{20k}{20k+10k} * 6 = 4V$$

since  $V_{th} \geq V_k$ , the diode is on

since  $V_{th} < 10V_k$ , we must use the knee voltage model



# Knee voltage model

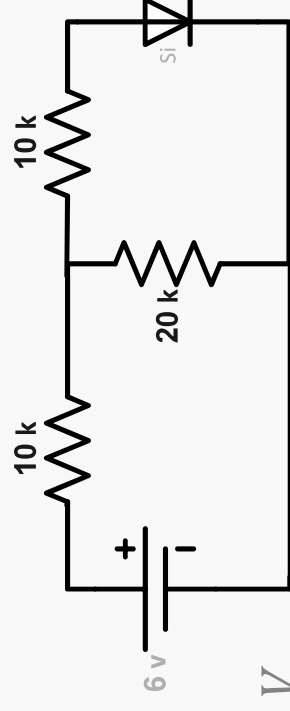


$$I_{DQ} = \frac{4 - 0.7}{16.7K} = 0.198 \text{ mA}$$

$$V_{DQ} = V_K = 0.7 \text{ V}$$

# Second method

assume the diode is on , replace it with  $V_K = 0.7 V$



KVL:

$$6 = 30 I_1 - 20 I_2$$

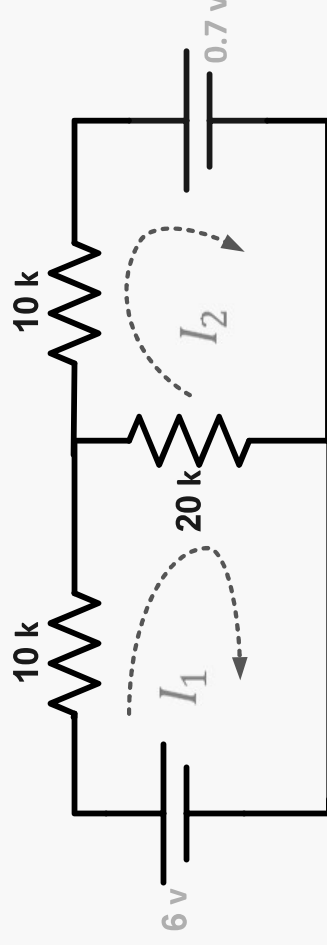
$$-0.7 = -20 I_1 + 30 I_2$$

Solve for:

$$I_2 = 0.198 \text{ mA}$$

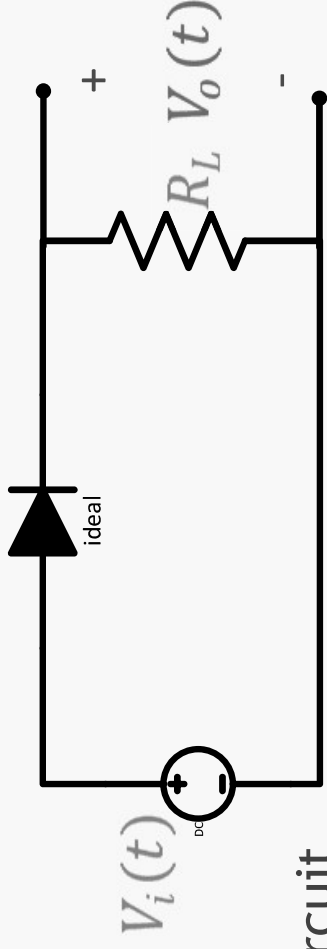
$$\therefore I_D = I_2 = 0.198 \text{ mA}$$

Since  $I_D > 0$  ,  $\therefore$  our assumption is ok



# Diode large - signal application

1) Diode clipper circuit

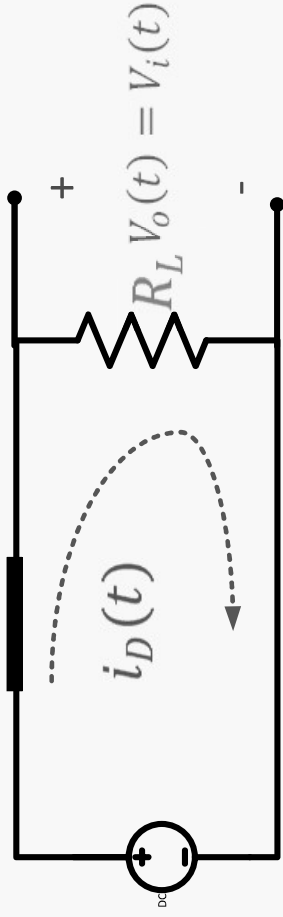


a) assume the diode is on  
replace it with short circuit

$$i_D(t) > 0$$

$$i_D(t) = \frac{V_i(t)}{R_L} > 0$$

$$\therefore V_i(t) > 0$$

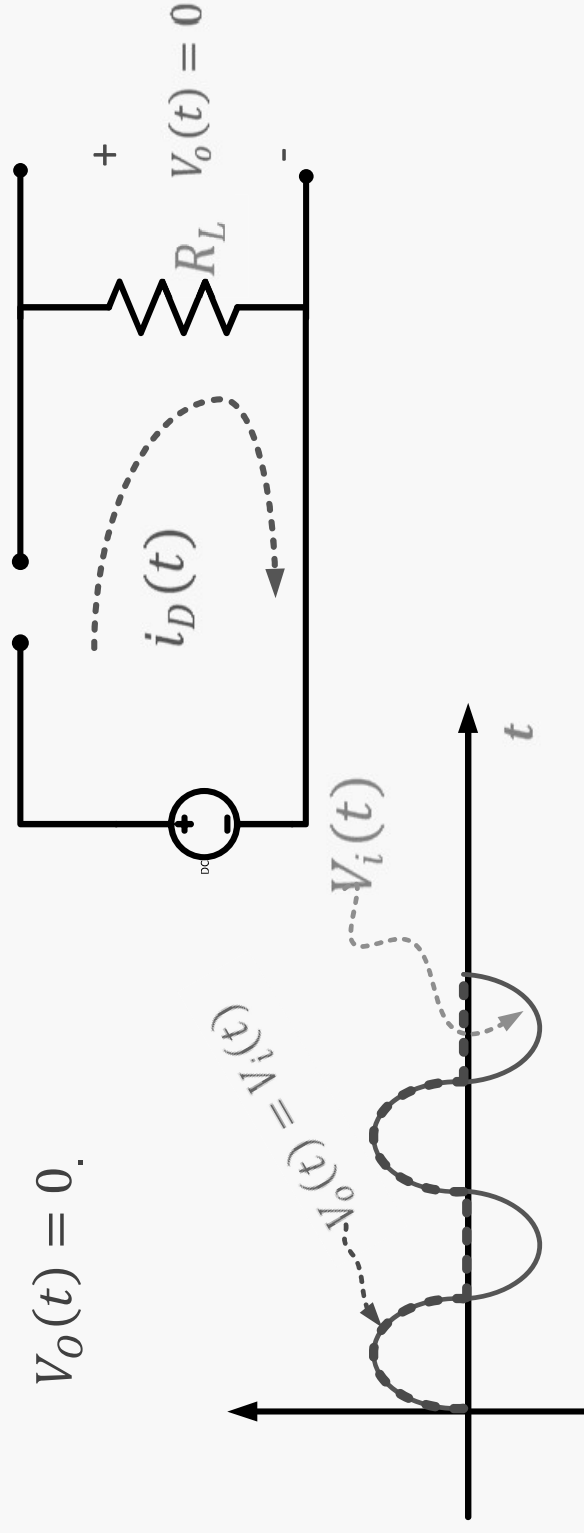


$\therefore$  when  $V_i(t) > 0$ , the diode is on and  
 $V_o(t) = V_i(t)$



$\therefore$  when  $V_i(t) < 0$ , the diode is off and  $V_o(t) = 0$ .

$$V_o(t) = 0.$$

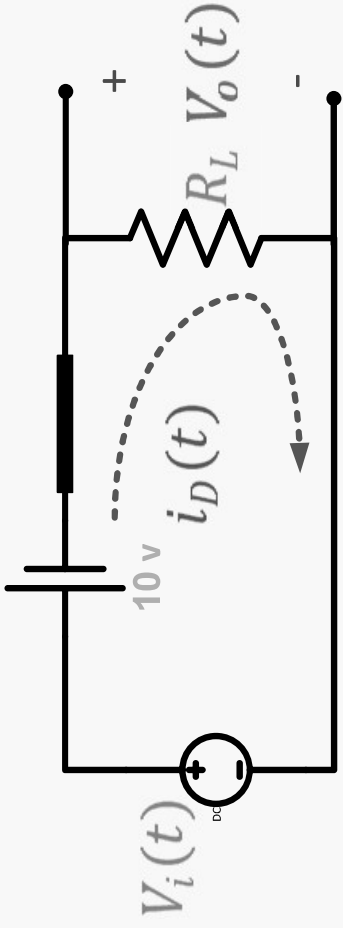
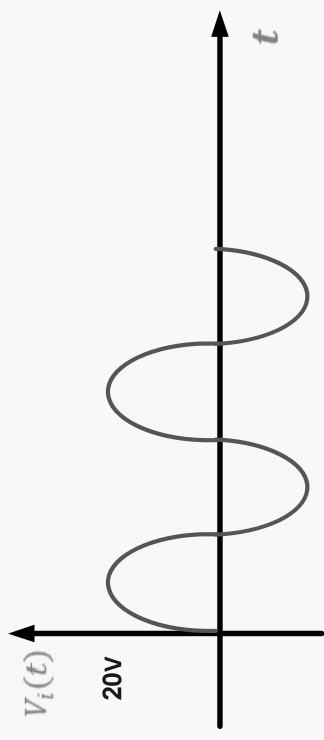
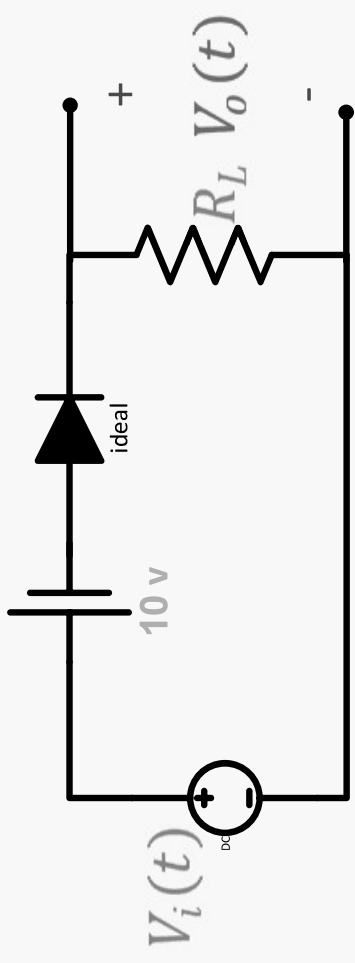


$\therefore$  the clipper circuit used to eliminate portion of the input signal .



# Example

- a) assume that the diode is on
- b) replace it with short circuit
- c)  $i_D(t) > 0$



$$i_D(t) = \frac{V_i(t) - 10}{R_L} > 0$$

$$i_D(t) = \frac{V_i(t) - 10}{R_L} > 0$$

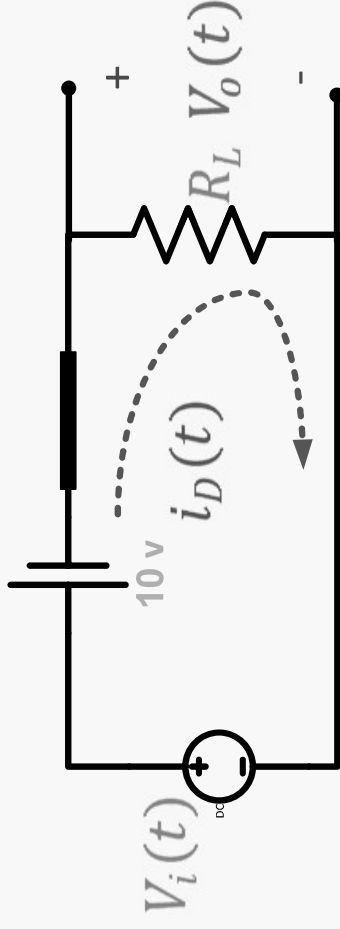
$$\therefore V_i(t) - 10 > 0$$

$$\therefore V_i(t) > 10$$

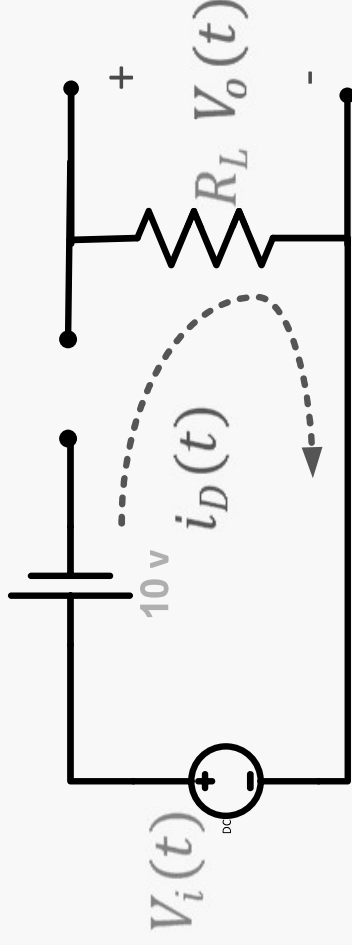
$\therefore$  when  $V_i(t) > 10 \text{ V}$ , the diode is on and

$$V_o(t) = V_i - 10$$

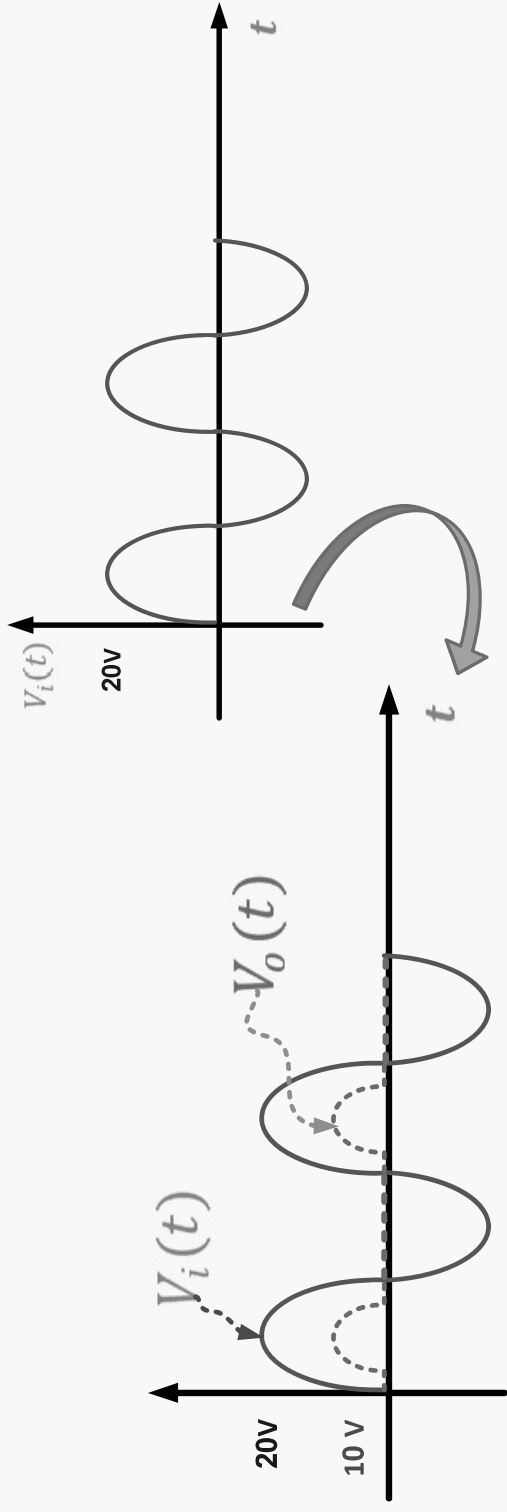
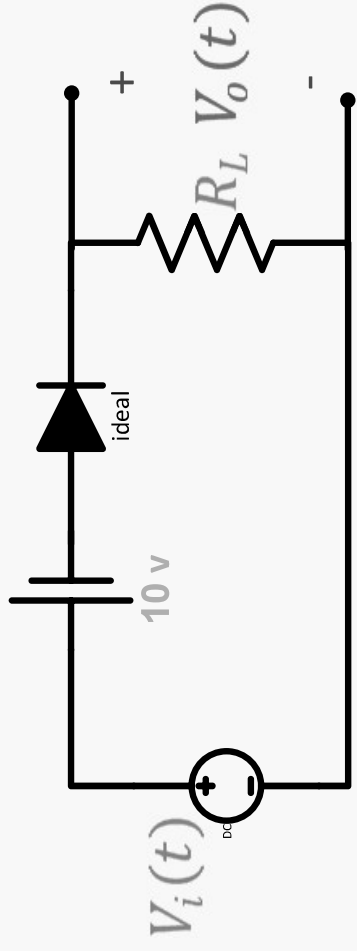
and also we can prove that when  $V_i(t) < 10 \text{ V}$ , the diode is off



$$\therefore V_o(t) = 0$$



# The output



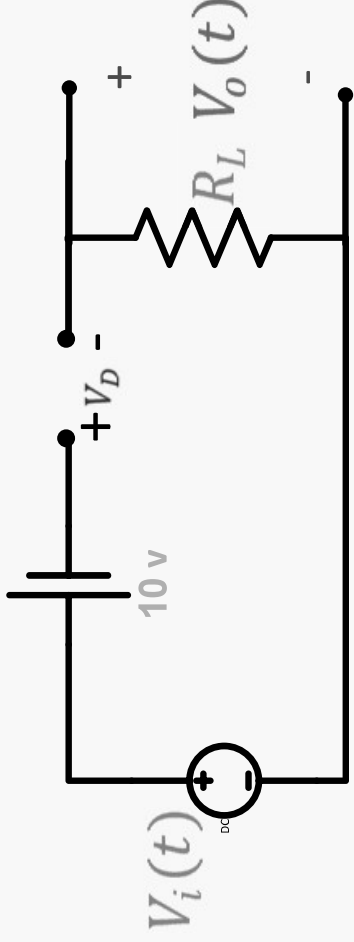
## Second method

a) assume that the diode is off , b) replace it with open circuit , c)  $V_D(t) < 0$  .

$$V_D(t) < 0$$

$$V_D(t) = -10 + V_i$$

$$V_i(t) < 10 \text{ V}$$



$\therefore$  when  $V_i(t) < 10 \text{ V}$  , the diode is off and  $V_o(t) = 0$

# Diode-Large-Signal- Applications Diode

Clipping at two independent levels

Clamping Circuits

Voltage Multipliers

# Clipping at two independent levels

$D_1$ ,  $D_2$  are ideal

1) Assume  $D_1$  on, and  $D_2$  off

$$V_o(t) = 5 \text{ v}$$

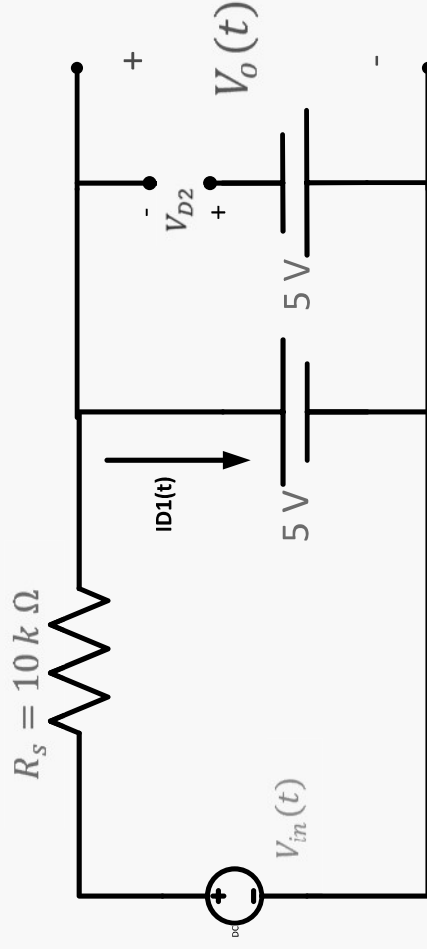
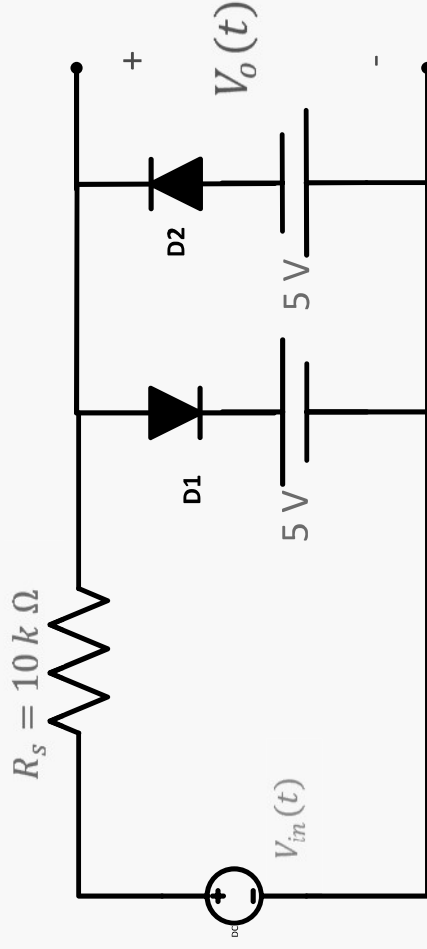
$$i_{D1}(t) = \frac{V_i(t) - 5}{10k} > 0$$

$$\therefore V_i(t) - 5 > 0$$

$$\therefore V_i(t) > 5 \text{ v}$$

$$V_{D2}(t) = -5 - 5 = -10 \text{ v}$$

$\therefore$  When  $V_i(t) > 5 \text{ v}$ ,  $V_o(t) = 5 \text{ v}$



- 2) Assume  $D_2$  on, and  $D_1$  off

$$V_o(t) = -5 \text{ v}$$

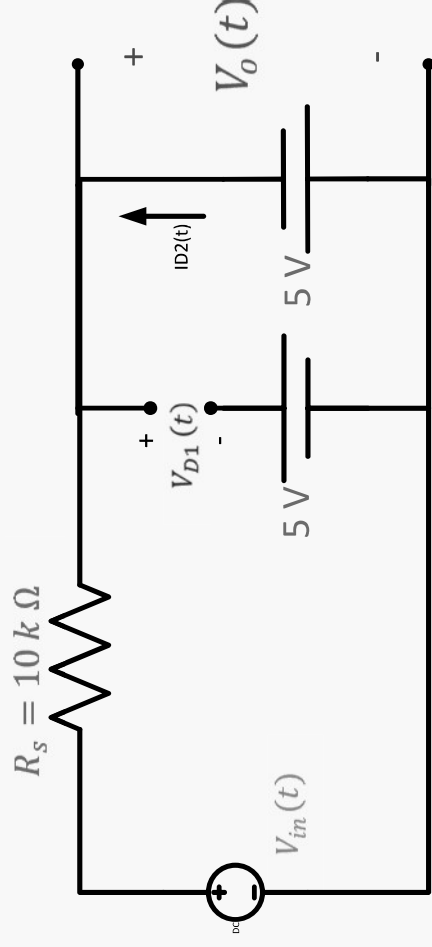
$$i_{D2}(t) = \frac{-V_i(t) - 5}{10k} > 0$$

$$-V_i(t) - 5 > 0$$

$$\therefore V_i(t) < -5 \text{ v}$$

$$V_{D1}(t) = -5 - 5 = -10 \text{ v}$$

$$\therefore \text{When } V_i < -5 \text{ v}, V_o(t) = -5 \text{ v}$$





- ▶ 3) Assume that  $D_1$  and  $D_2$  are on



$$V_o = -5 \text{ v}$$

$$\text{also } V_o = +5 \text{ ??}$$

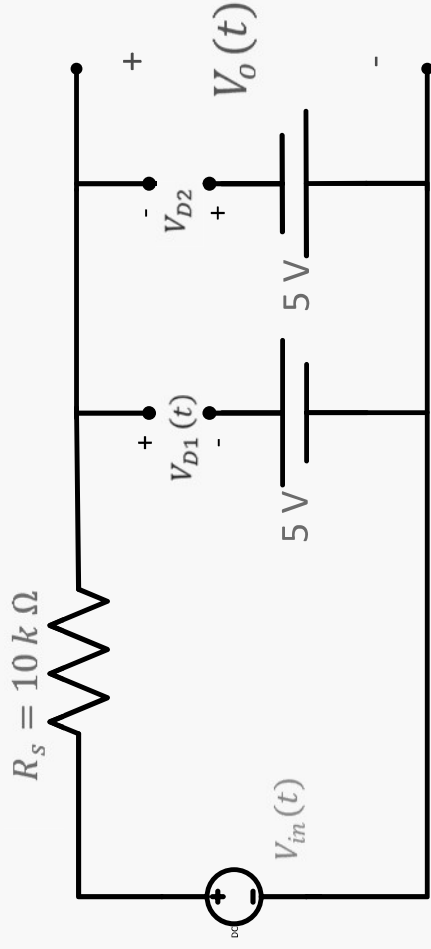
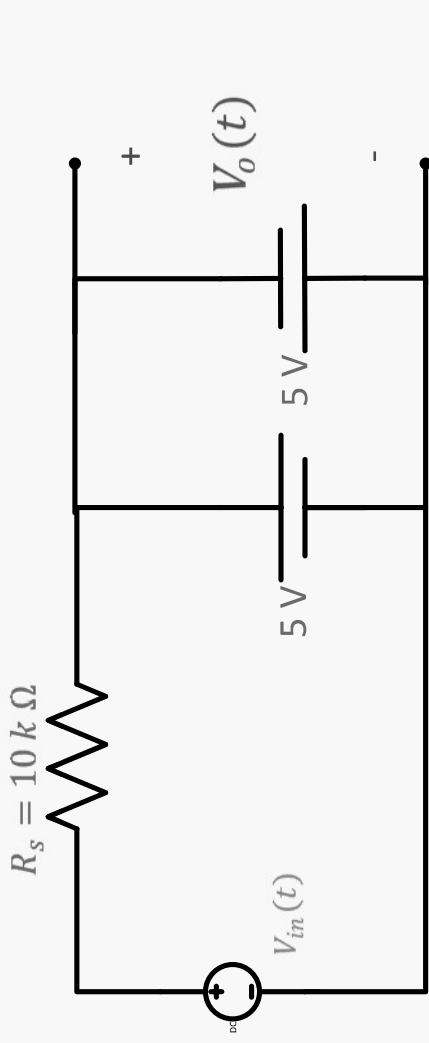
This case is not valid

Impossible

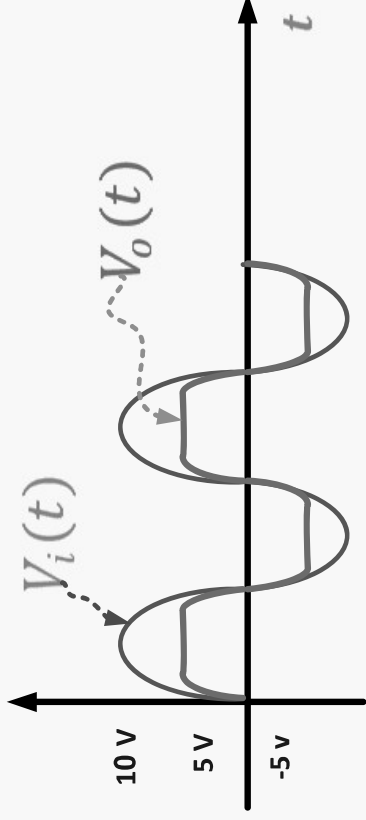
- ▶ 4) Assume that  $D_1$ , and  $D_2$  are off

- ▶ When  $+5 > V_i(t) > -5$

$$V_o(t) = V_i(t)$$

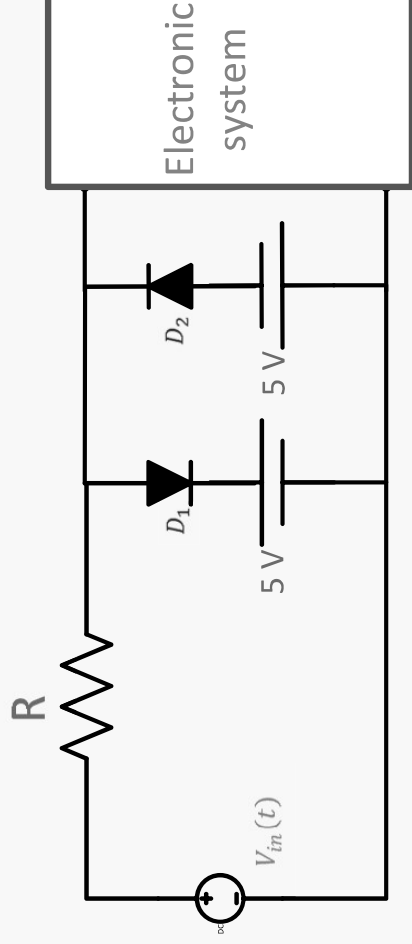


# Clipping at two independent levels

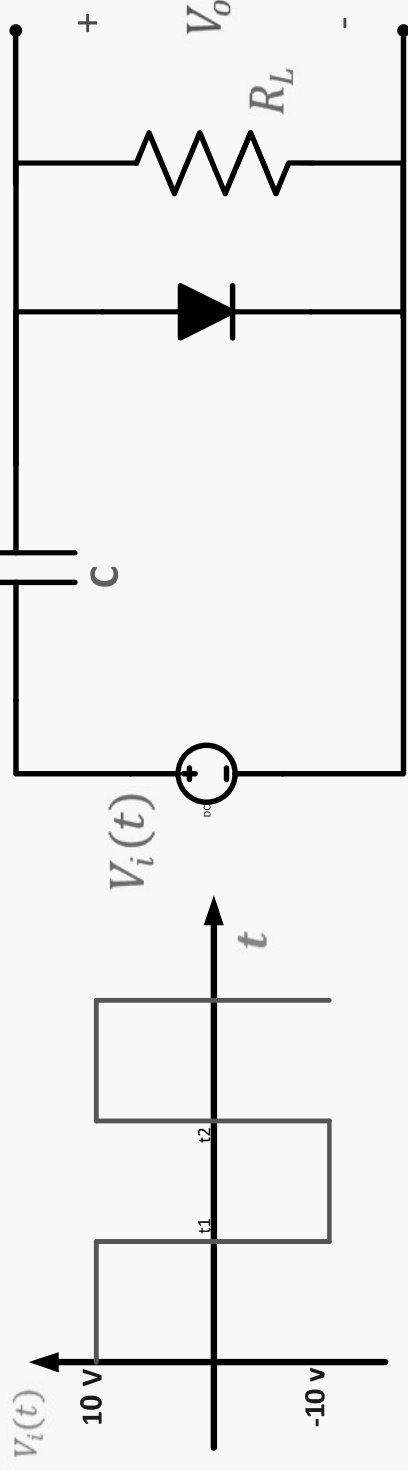


Limiter

For protection



## 2) Clamping circuit



- ▶ Diode is ideal ,  $V_c(0^-) = 0$
- ▶ 1) at  $t = 0^+$

$$V_i(0^+) = 10\text{ v} ; V_c(0^+) = V_c(0^-) = 0$$

$\therefore V_D(0^+) = 10\text{ v}$  ,  $\therefore$  Diode is on and then replaced with short circuit

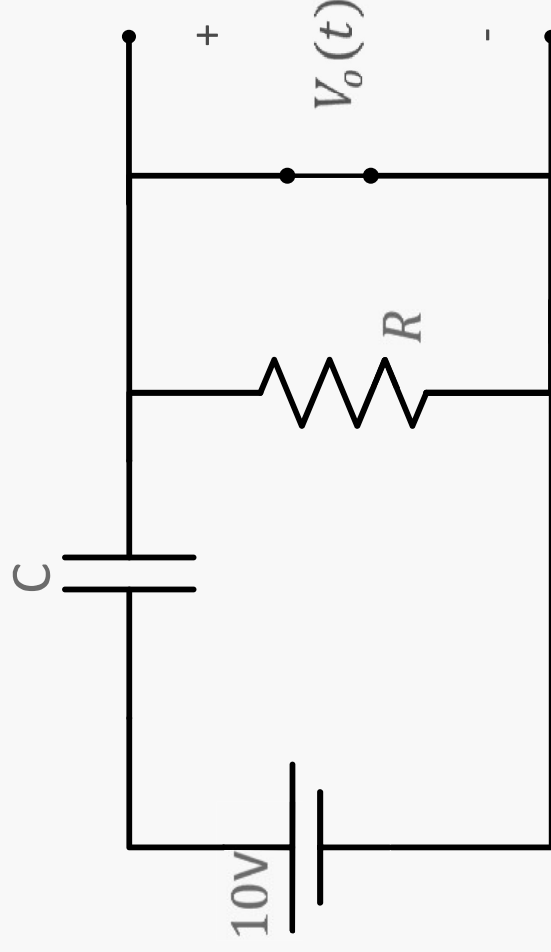
In the interval  $t_1 > t > 0^+$

►  $V_i = 10$  , Diode is on (short)

$$V_o(t) = 0$$

and the capacitor charges toward

$$+10v \text{ in } 5\tau = 5R_{eq}C = 0$$



In the interval  $t_2 > t > t_1$

The diode is off and replaced  
with open circuit

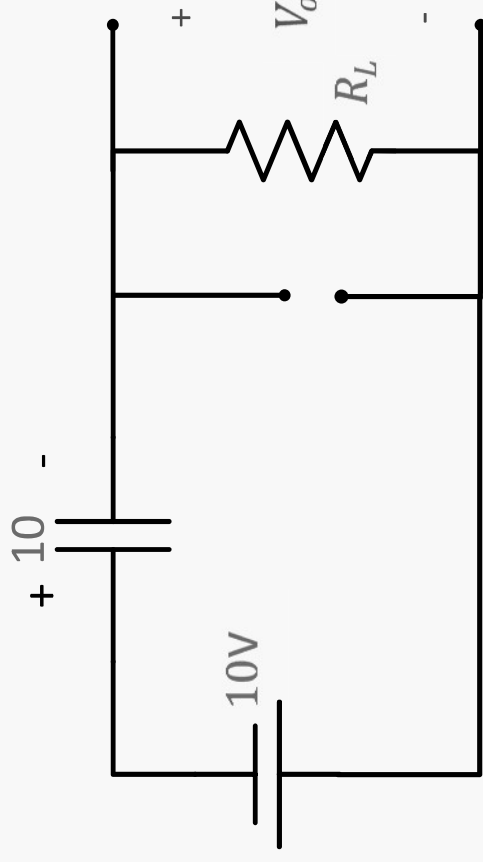
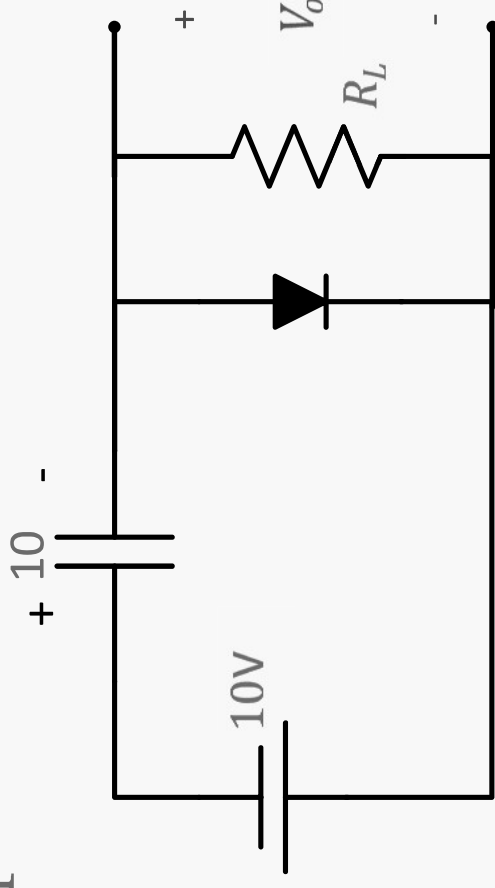
►  $\therefore V_o(t) = -V_c(t) - 10$

►  $V_o(t) = -10 - 10$

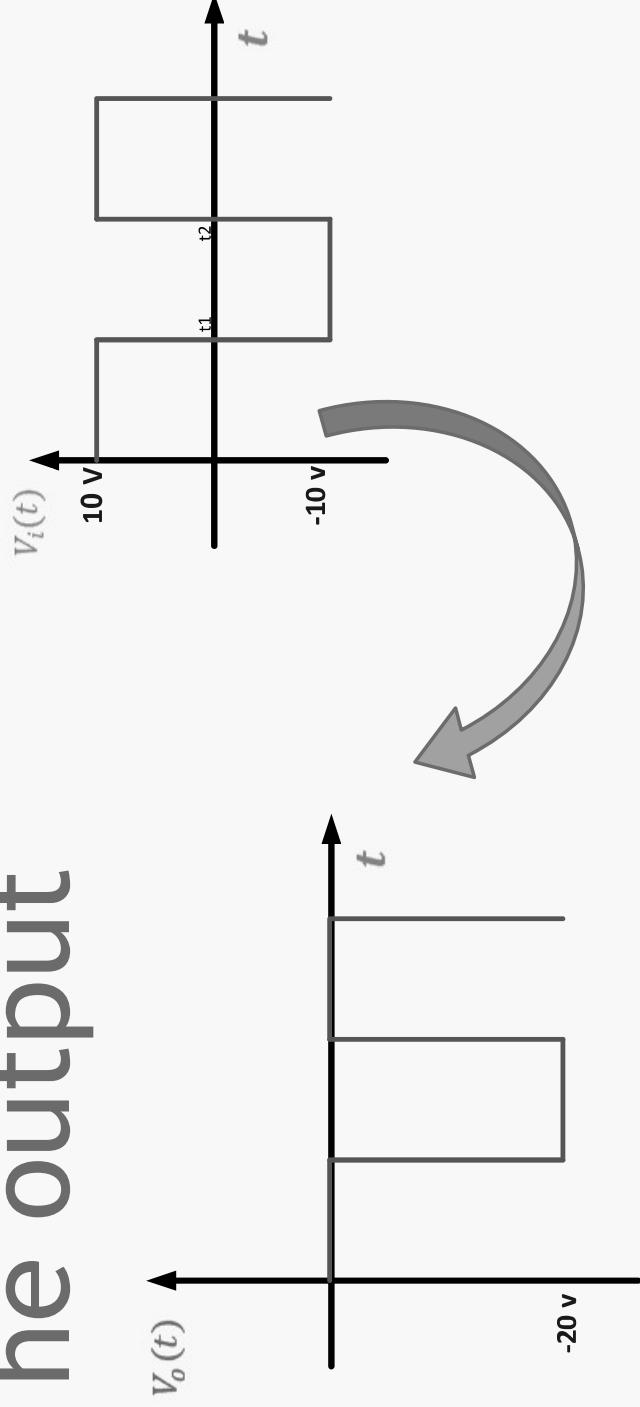
$V_o(t) = -20 \text{ v}$

We must choose  $RC \gg (t_2 - t_1)$

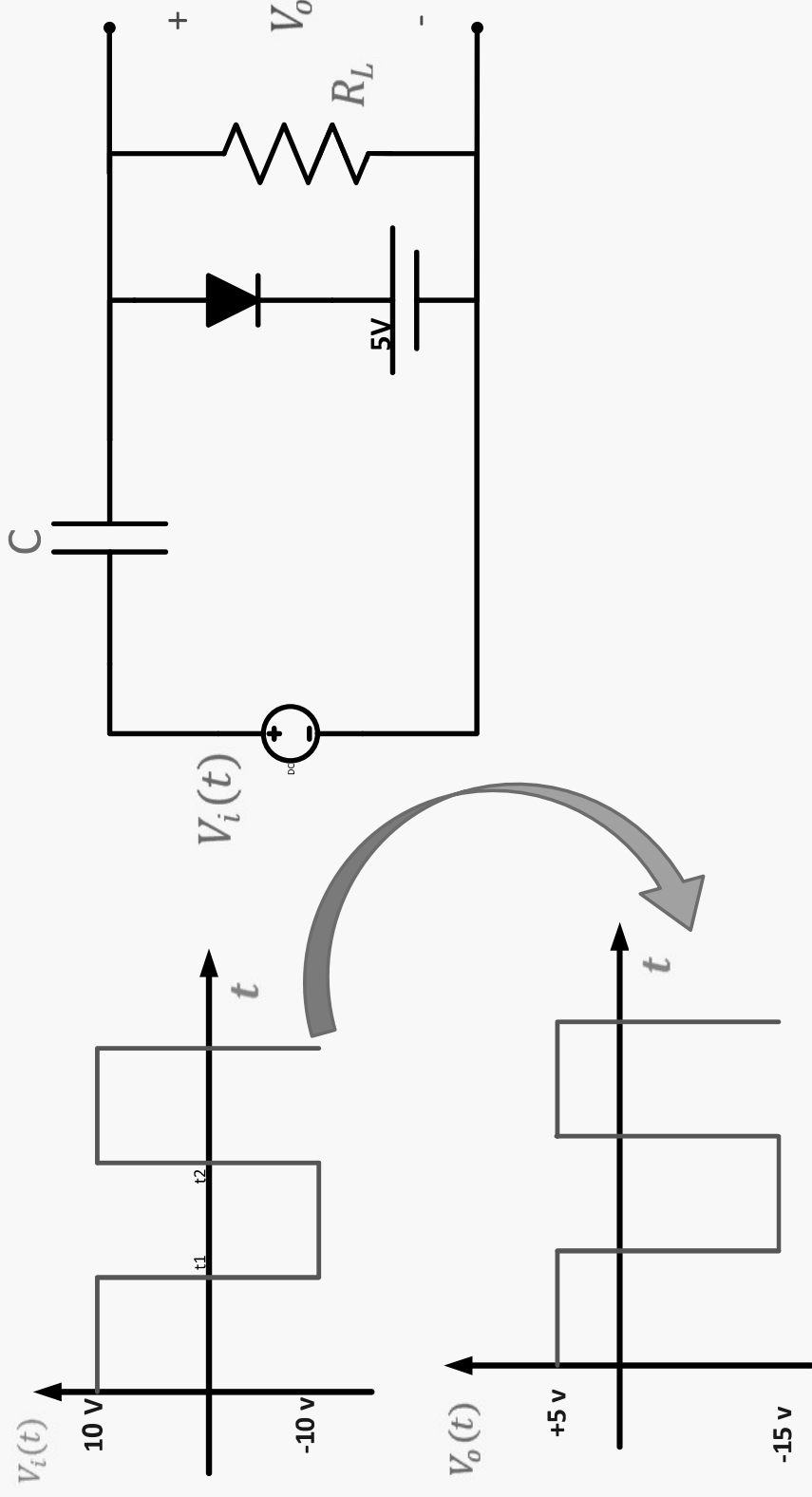
so that  $V_c(t) \equiv 10 \text{ v}$  in this interval



# The output



# Biased clamping circuit



### 3) Voltage Multiplier

$D_1$ , and  $D_2$  are ideal

$$V_{C1}(0^-) = V_{C2}(0^-) = 0$$

► A) at  $t=0^+$

$V_i(0^+) = \text{positive}$

$$V_{C1}(0^+) = V_{C2}(0^+) = 0$$

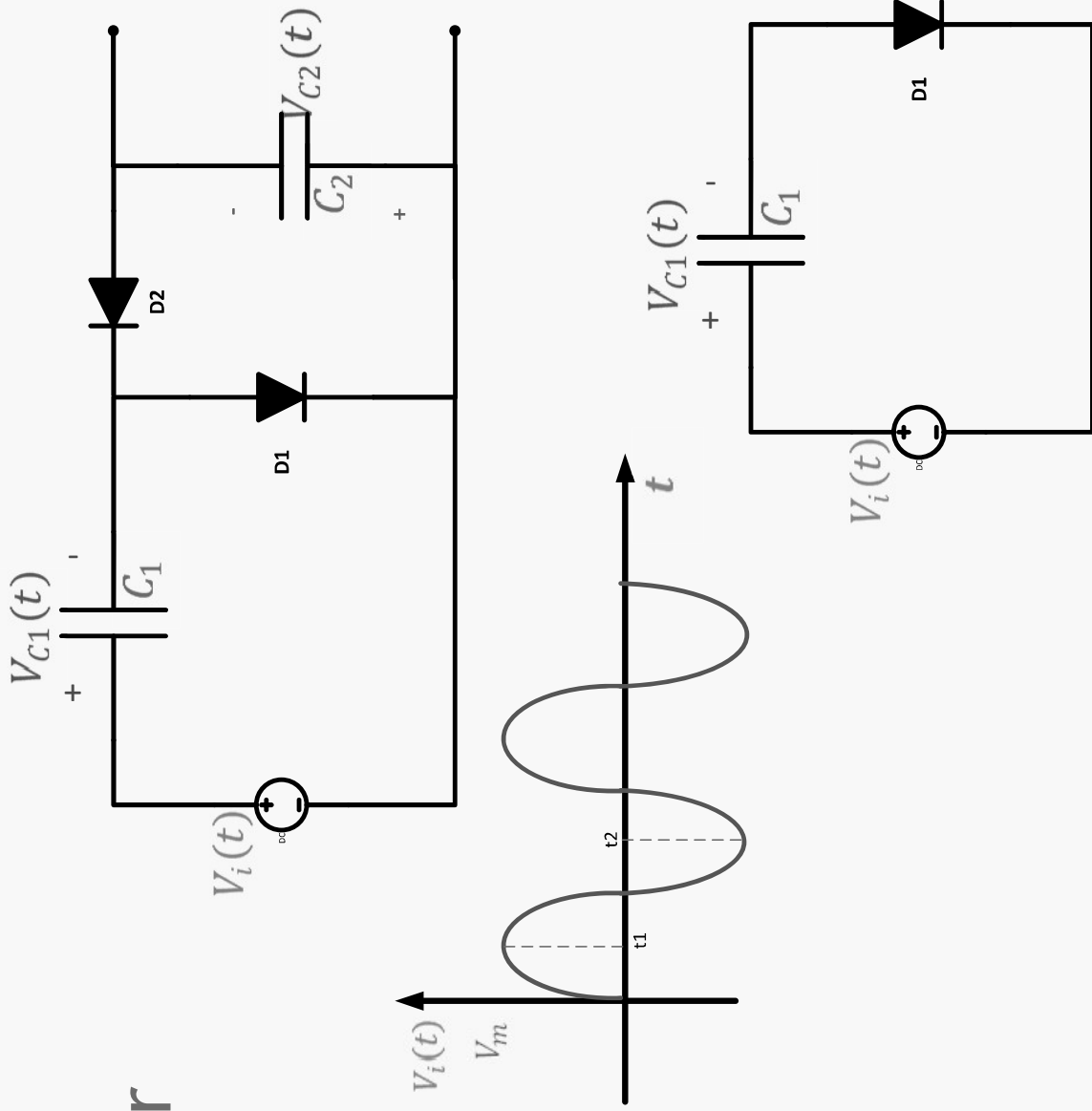
$\therefore D_1$  on, and  $D_2$  off

► B) in the interval  $t_1 > t > 0$

► The capacitor

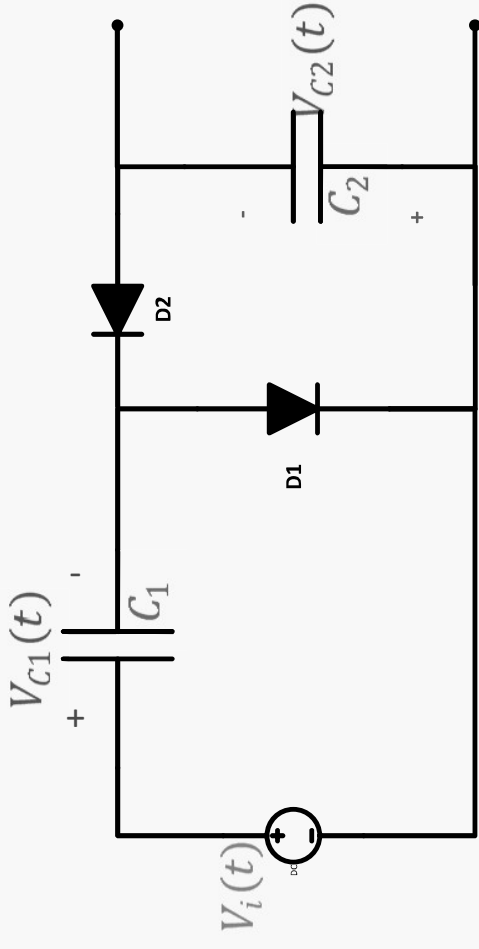
charges towards  $V_m$

at  $t_1$ ;  $V_C(t_1) = V_m$





- ▶ C) at  $t = t_1^+$   
 $V_{C1}(t_1^+) = V_m$   
 $V_i(t_1^+) < V_m \therefore D_1$  is off, and  $D_2$  is on

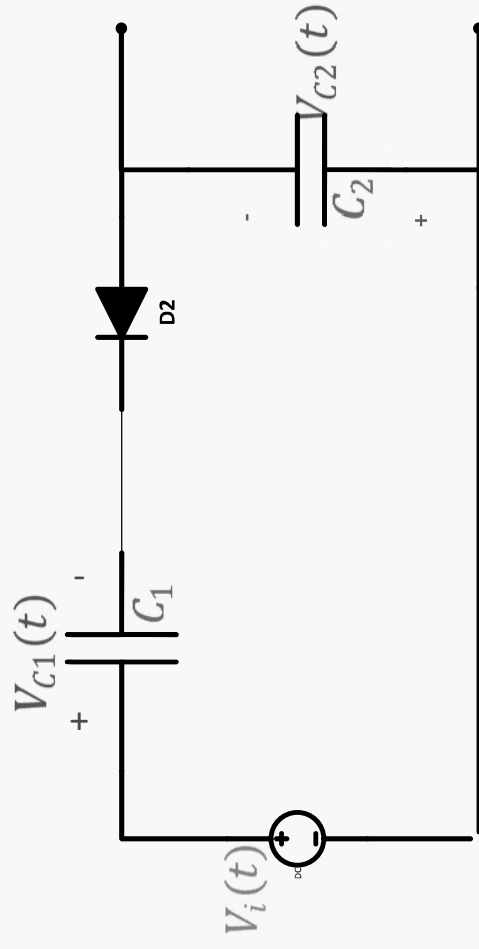


- ▶ D) in the interval  $t_2 > t > t_1$   
 $C_2$  charges toward  $V_m$   
at  $t = t_2$

$$V_{C2}(t_2) = 2V_m$$

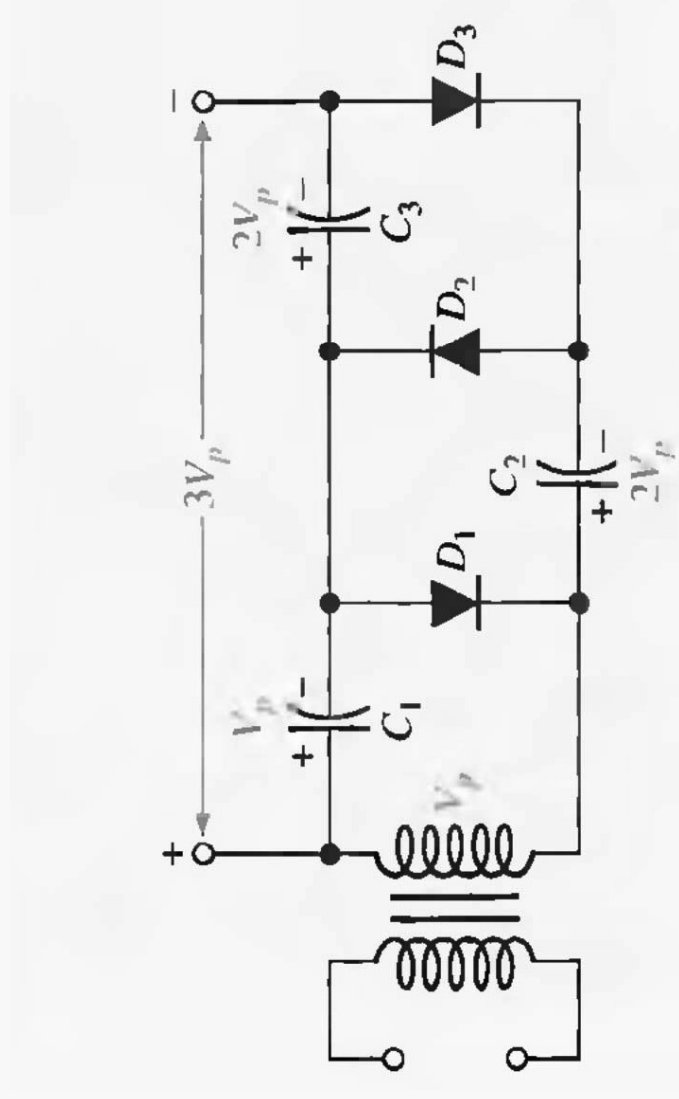
$$V_{C2}(t_2) = -V_i(t_2) + V_m$$

$$V_{C2}(t_2) = V_m + V_m = 2V_m$$

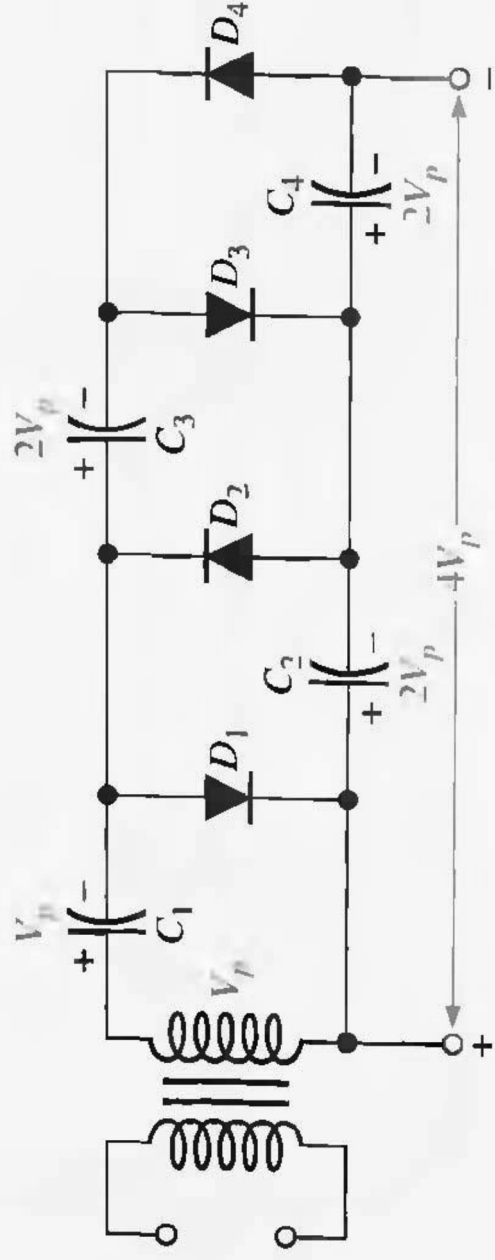


- ▶ E) at  $t = t_2^+$   
 $D_2$  is off,  $D_1$  is on  
 $V_{C1}(t_2^+) = V_m$   
 $V_{C2}(t_2^+) = 2V_m$
- 
- A graph showing the input voltage  $V_i(t)$  as a function of time  $t$ . The voltage is a sinusoidal wave with a peak value  $V_m$ . Two time points,  $t_1$  and  $t_2$ , are marked on the horizontal axis.  $t_1$  is at the first positive peak, and  $t_2$  is at the first negative peak.

# Voltage Tripler



# Voltage Quadrupler




# Dc Power Supply

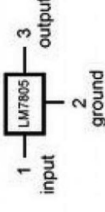
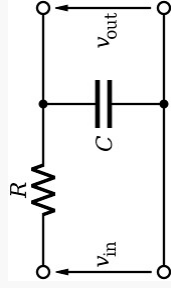
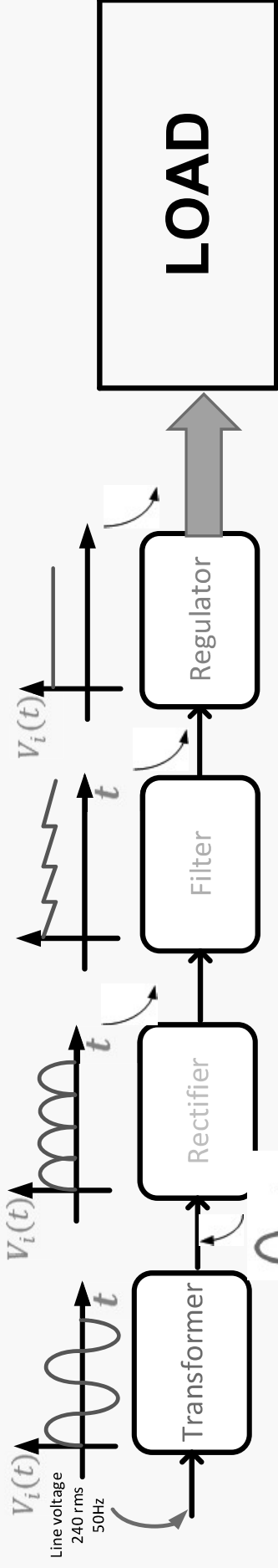
half wave rectifier

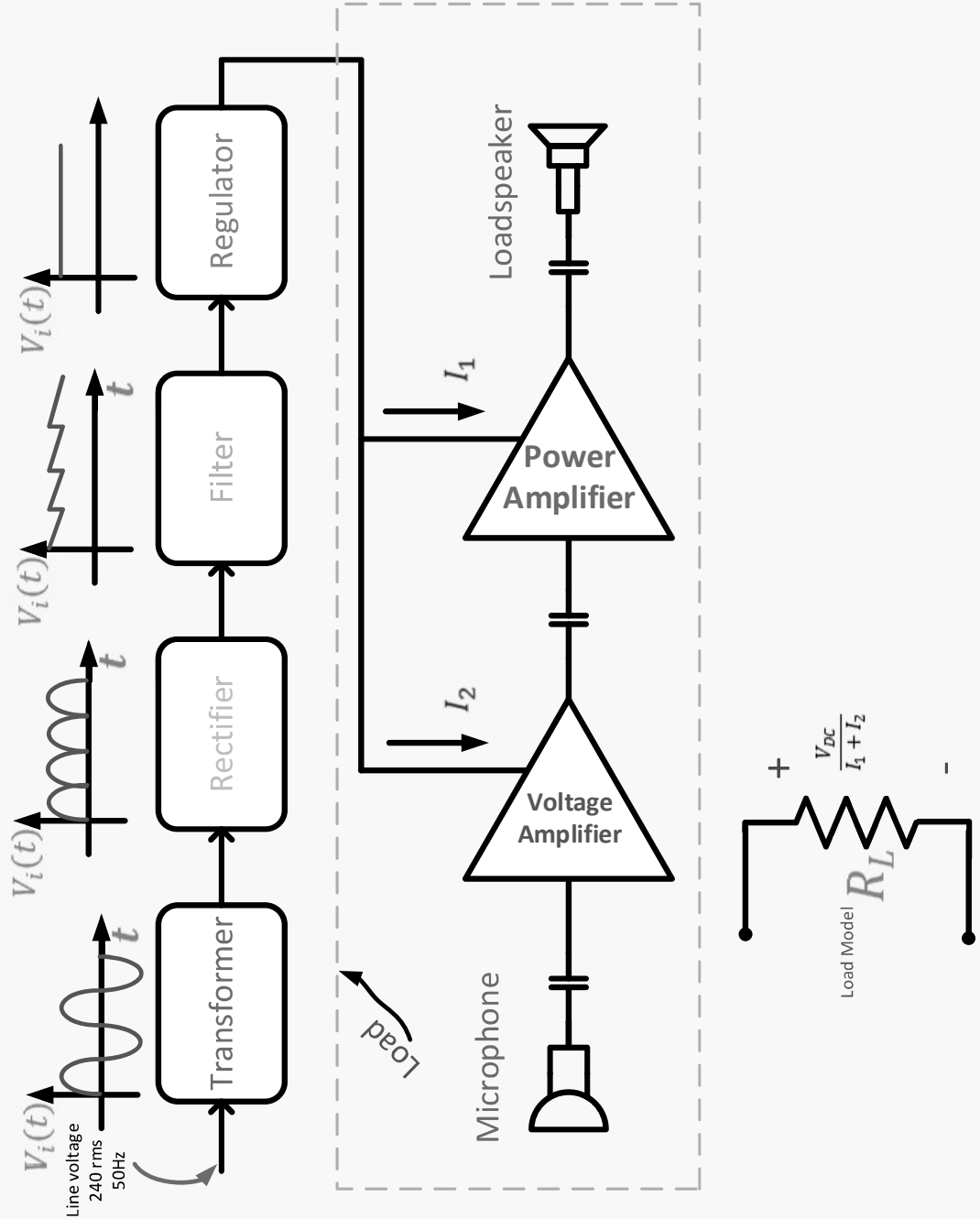
center tapped transformer

# Dc Power Supply




- ▶ All electronic circuits and systems require a stable source of dc voltage and current ( or dc power) to operate correctly.





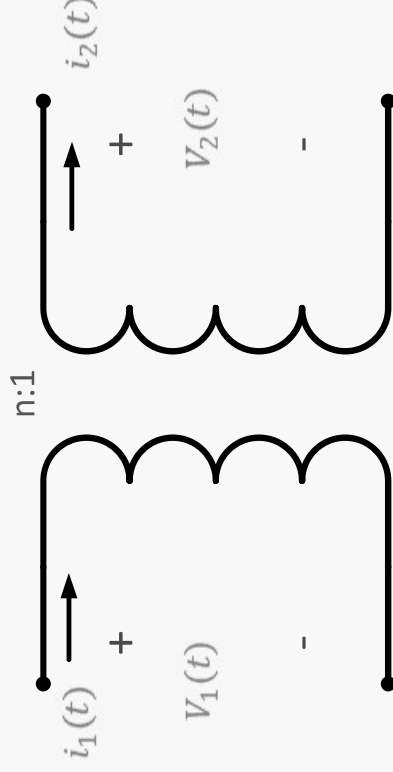
# Dc Power Supply



- ▶ The basic power supply consists of a transformer, rectifier, filter, and a regulator.
- ▶ Transformer: Used to increase or decrease the amplitude of the line voltage

$$\blacktriangleright V_2(t) = \frac{1}{n} V_1$$

$$i_2(t) = n i_1(t)$$



# Dc Power Supply

- ▶ Rectifier: used to convert the ac voltage (zero- average value) into either positive and negative pulsating dc.

## ▶ 1) Half- Wave Rectifier

$$\mathbf{V_i(t) = \frac{V_s(t)}{n}}$$

- ▶ **A)** when  $V_i(t) > 0$ , Diode is on (short circuit)

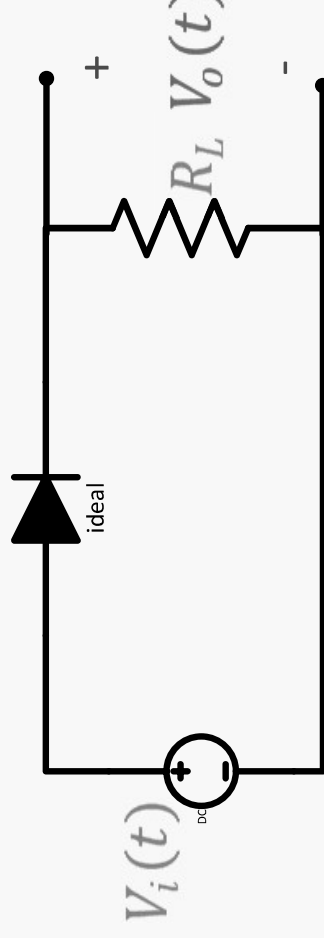
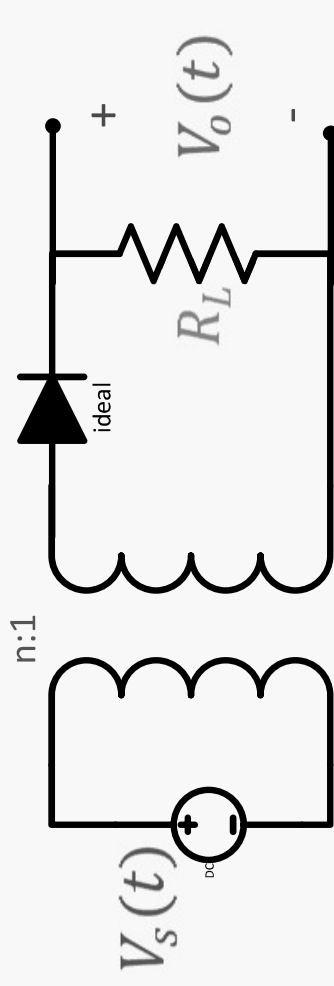
$$\therefore V_o(t) = V_i(t)$$

$$\therefore V_D(t) = \mathbf{0}$$

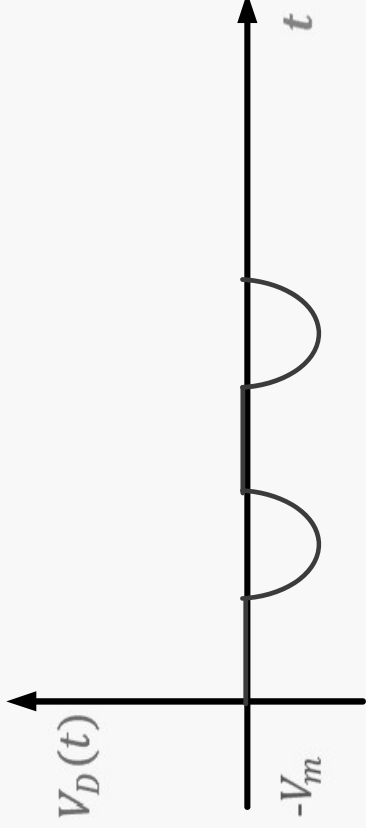
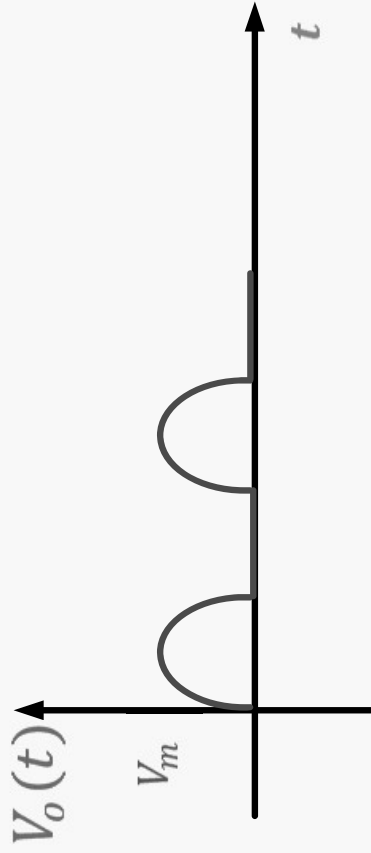
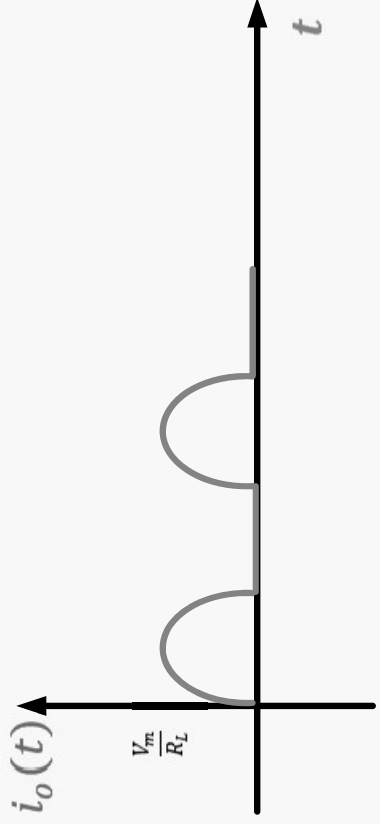
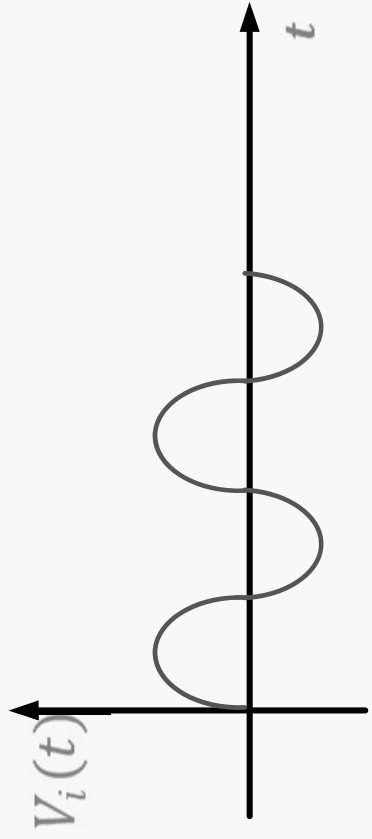
- ▶ **B)** when  $V_i(t) < 0$ , Diode is off (open circuit)

$$\therefore V_o(t) = \mathbf{0}$$

$$\therefore V_D(t) = V_i(t)$$







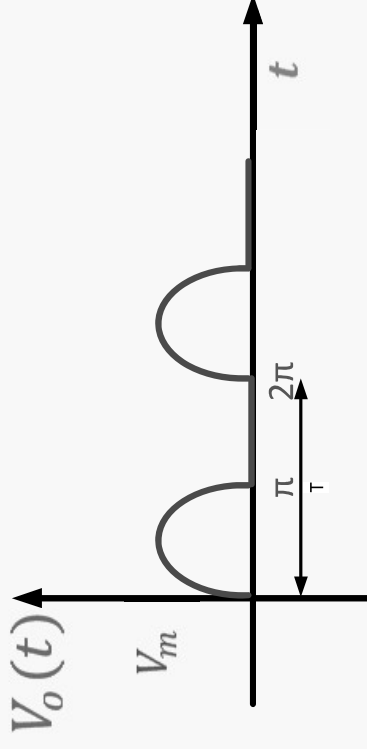
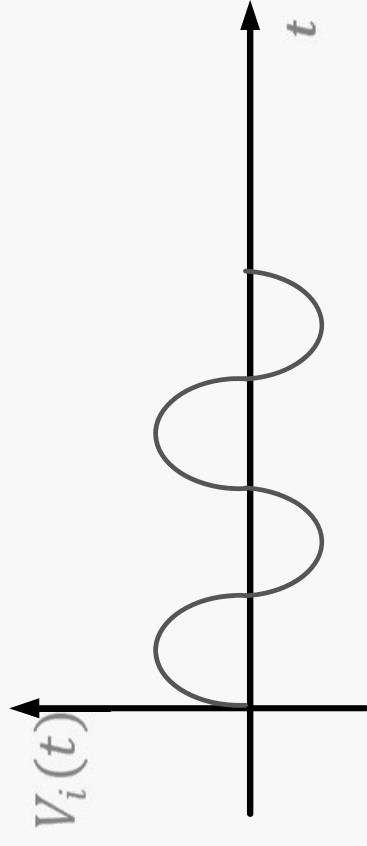
$$\begin{aligned} \blacktriangleright V_{o,av} &= \frac{1}{T} \int_0^T V_o(t) dt \\ &= \frac{1}{2\pi} \int_0^\pi \sin \theta d\theta \end{aligned}$$

$$\blacktriangleright V_{o,av} = \frac{V_m}{\pi}$$

$$\blacktriangleright T = T_o$$

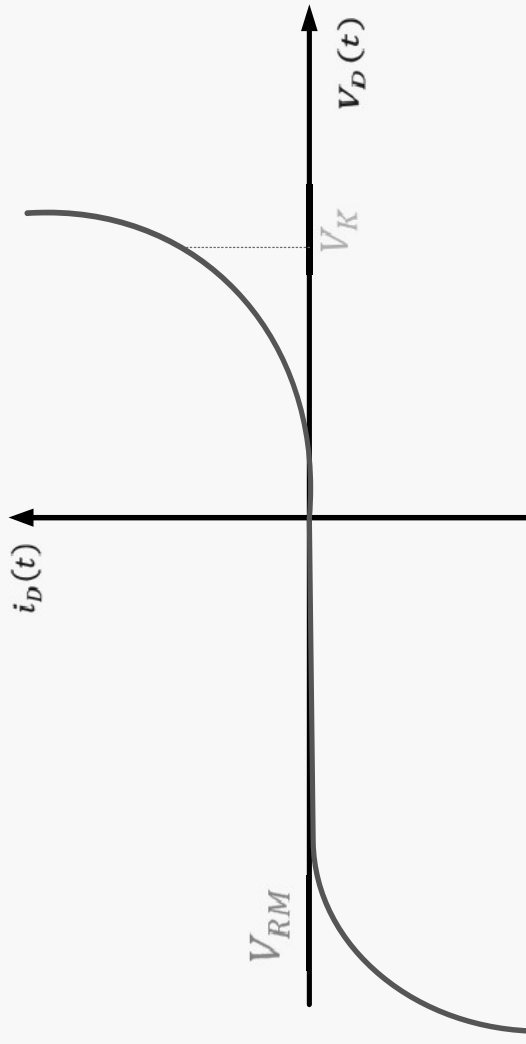
$$\blacktriangleright f = f_o$$

$$\blacktriangleright i_{D(t),av} = \frac{V_m}{\pi R_L}$$



# Important Electrical Ratings

- ▶  $I_{FM}$  = maximum forward current
- ▶  $I_{FM}$  = maximum average current that can safely be sustained by the diode when it is forward biased
- ▶  $V_{RM}$  = maximum reverse voltage
- ▶  $V_{RM}$  = maximum voltage that can be applied to the diode in the reverse bias polarity before voltage break down occur
- ▶ PIV  $\equiv$  Peak Inverse Voltage
- ▶ PIV =  $V_{RM}$



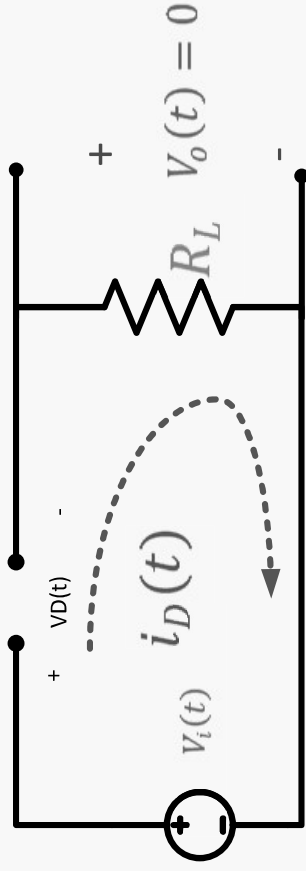
- ∴ For the half-wave rectifier

$$V_{o,av} = \frac{V_m}{\pi}$$

$$I_{FM} = \frac{V_m}{\pi R_L}$$

$$\text{PIV} = -V_m$$

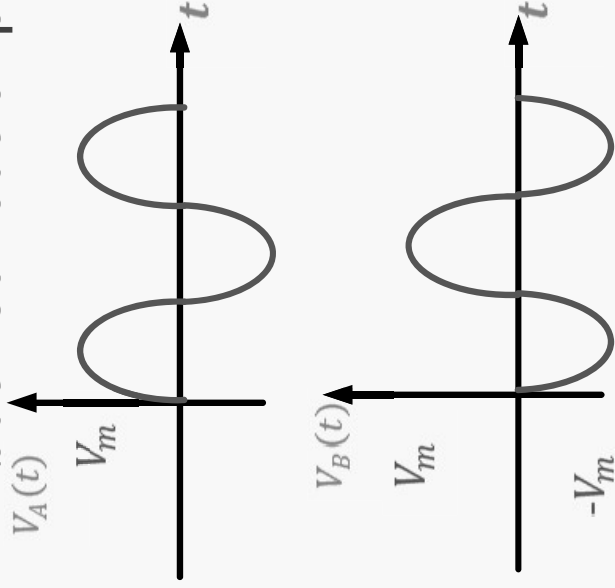
- When  $V_i(t) < 0$ , Diode is off



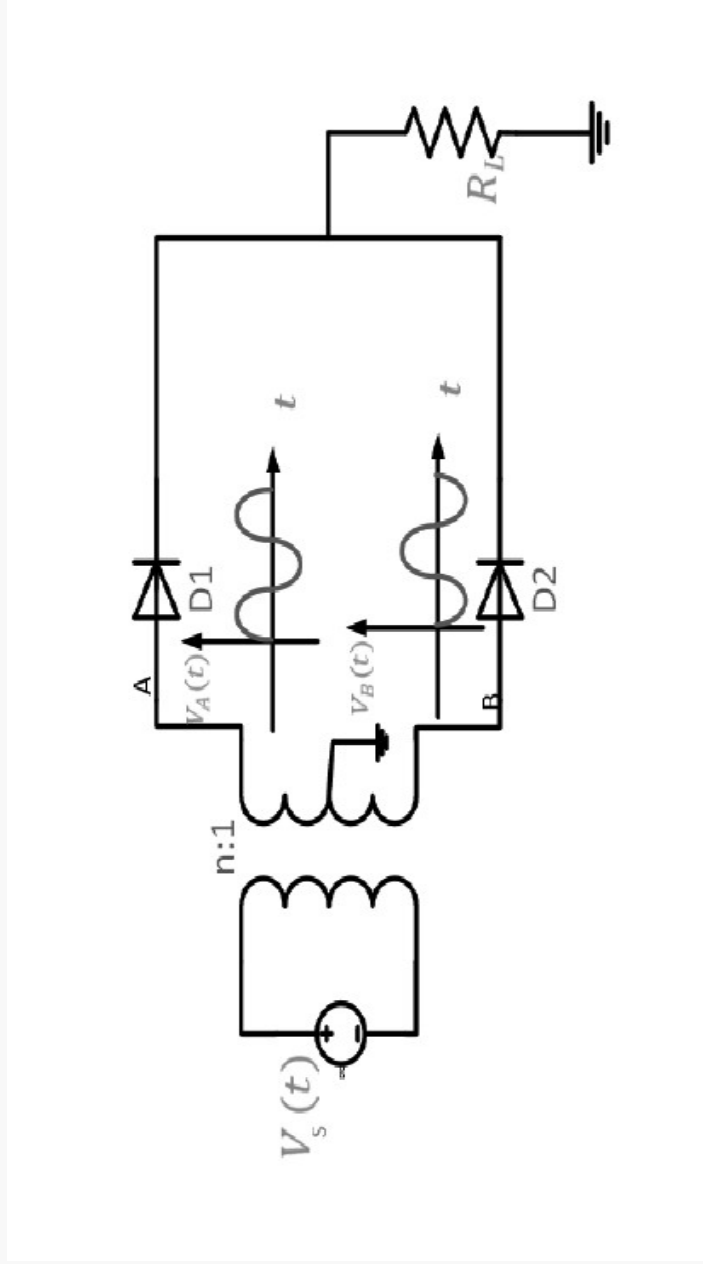
- $V_D(t) = V_i(t) < 0$
- $V_{D(t),max} = -V_m$

# Full-Wave Rectifier

- ▶ A) Center-tapped transformer full-wave Rectifier
- ▶  $V_A$ ,  $V_B$  have the same amplitude but  $180^\circ$  out of phase



$$V_A(t) = -V_B(t)$$
$$V_A(t) = \frac{1}{n} V_s(t)$$
$$V_B(t) = -\frac{1}{n} V_s(t)$$

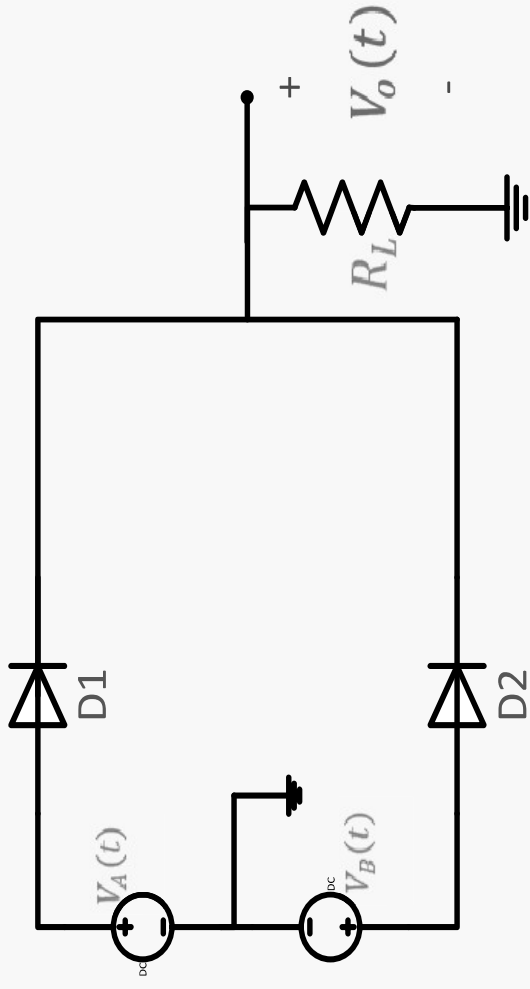


## Simplified Circuit

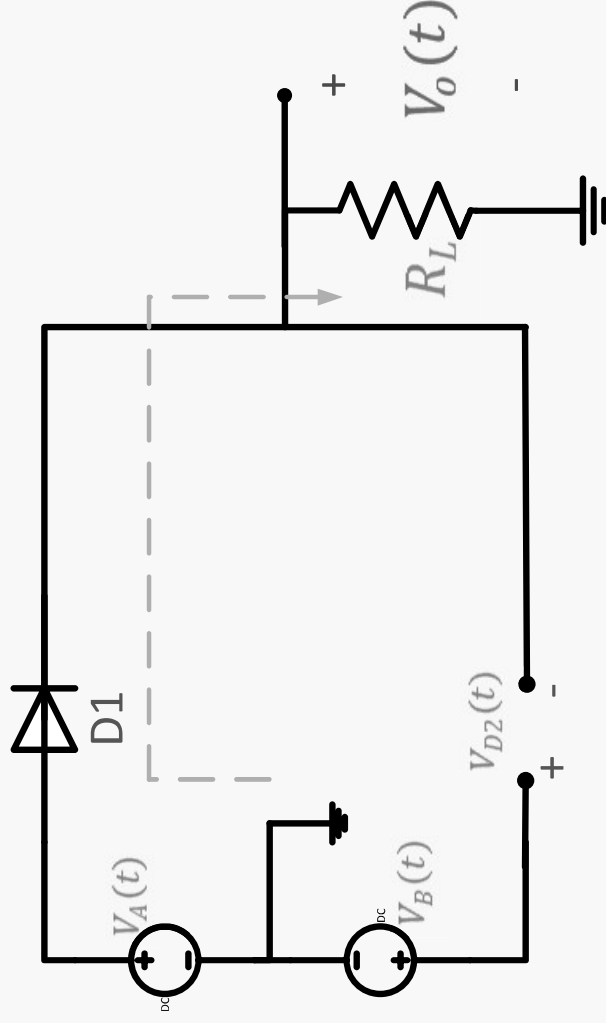
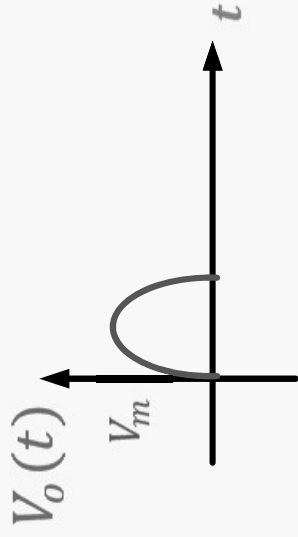
► 1) when  $V_s(t) > 0$

$V_A(t) > 0$ ,  $D_1$  is on

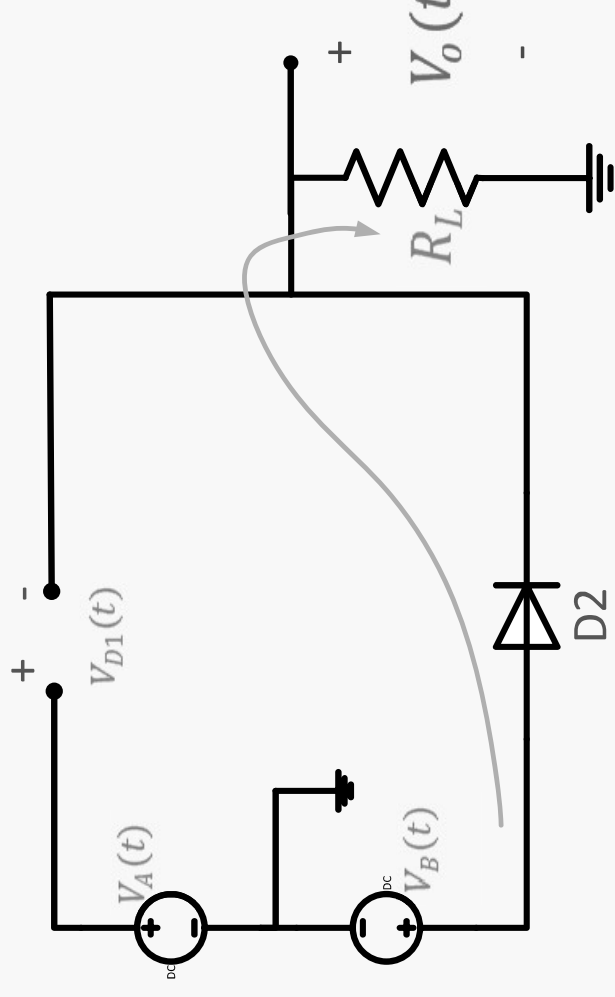
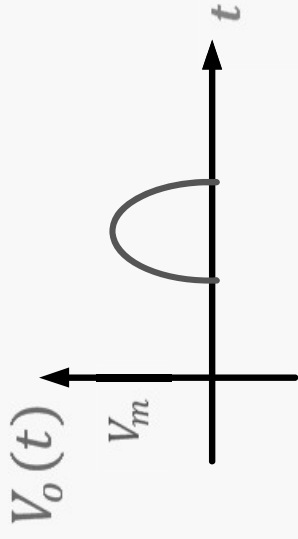
$V_B(t) < 0$ ,  $D_2$  is off



►  $V_o(t) = V_A(t)$



- ▶  $V_{D2}(t) = V_B(t) - V_A(t)$
- $V_{D2}(t)_{,max} = -V_m - V_m$
- $V_{D2}(t)_{,max} = -2V_m$
- ∴ PIV =  $-2V_m$
- ▶ 2) when  $V_s(t) < 0$ 
  - $V_A < 0$  ;  $D_1$  is off
  - $V_B > 0$  ;  $D_2$  is on
- ▶ ∴  $V_o(t) = V_B(t) > 0$



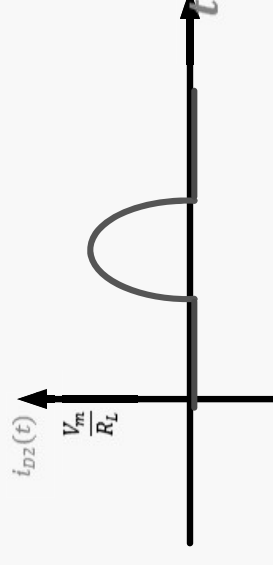
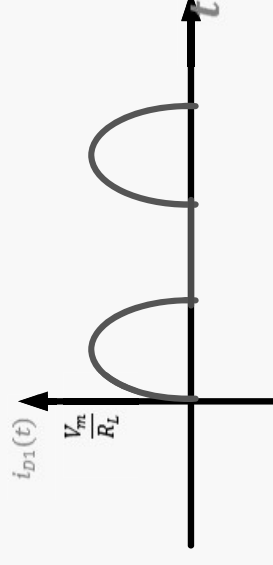
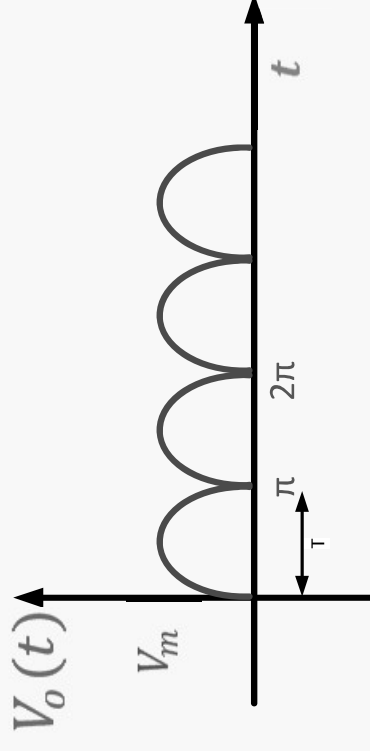
► For a complete cycle of  $V_s(t)$

►  $V_{o,av} = \frac{2V_m}{\pi}$

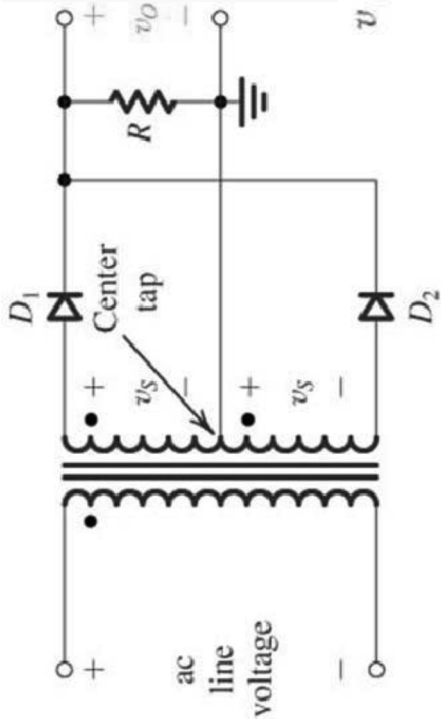
►  $PIV = -2V_m$

►  $T = \frac{1}{2}T_o$

►  $f = 2f_o$

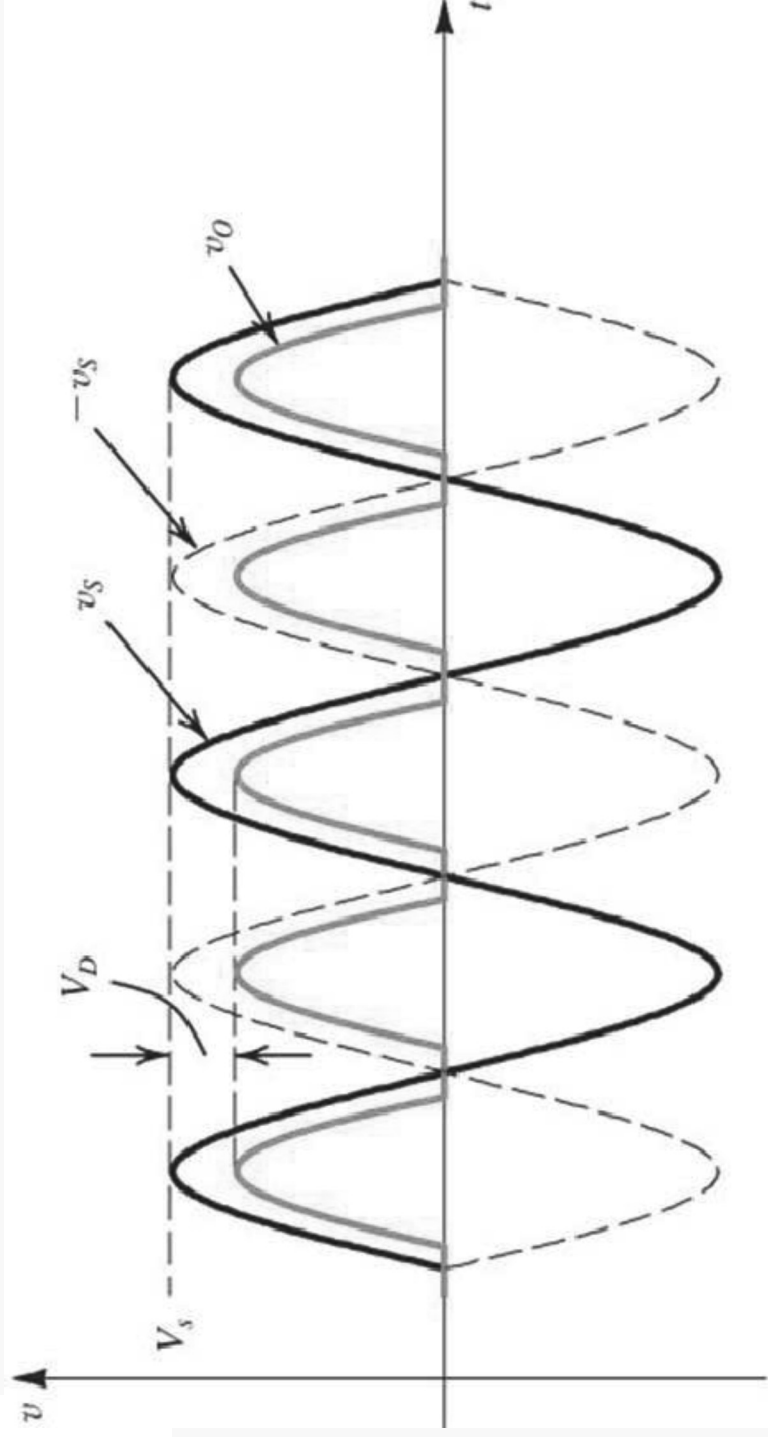






(a)

**If the diodes have  $V_k$**



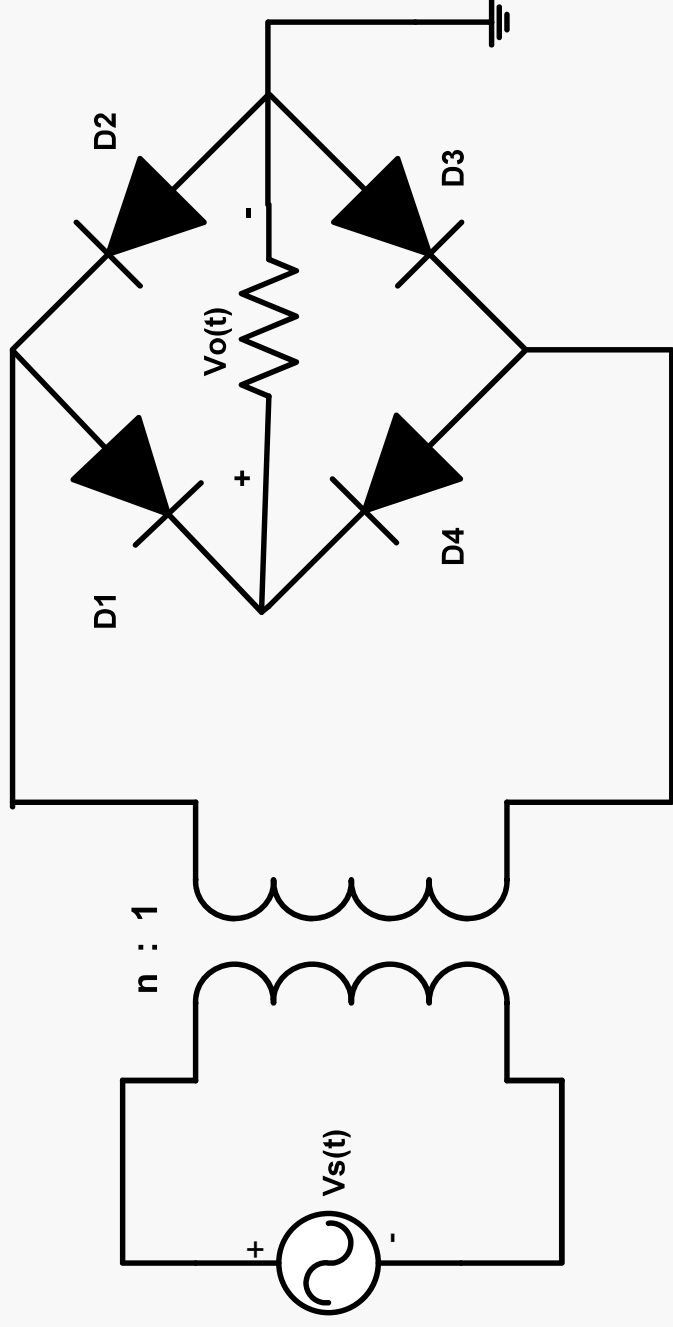
(c)

# Dc Power Supply

Bridge Full Wave Rectifier

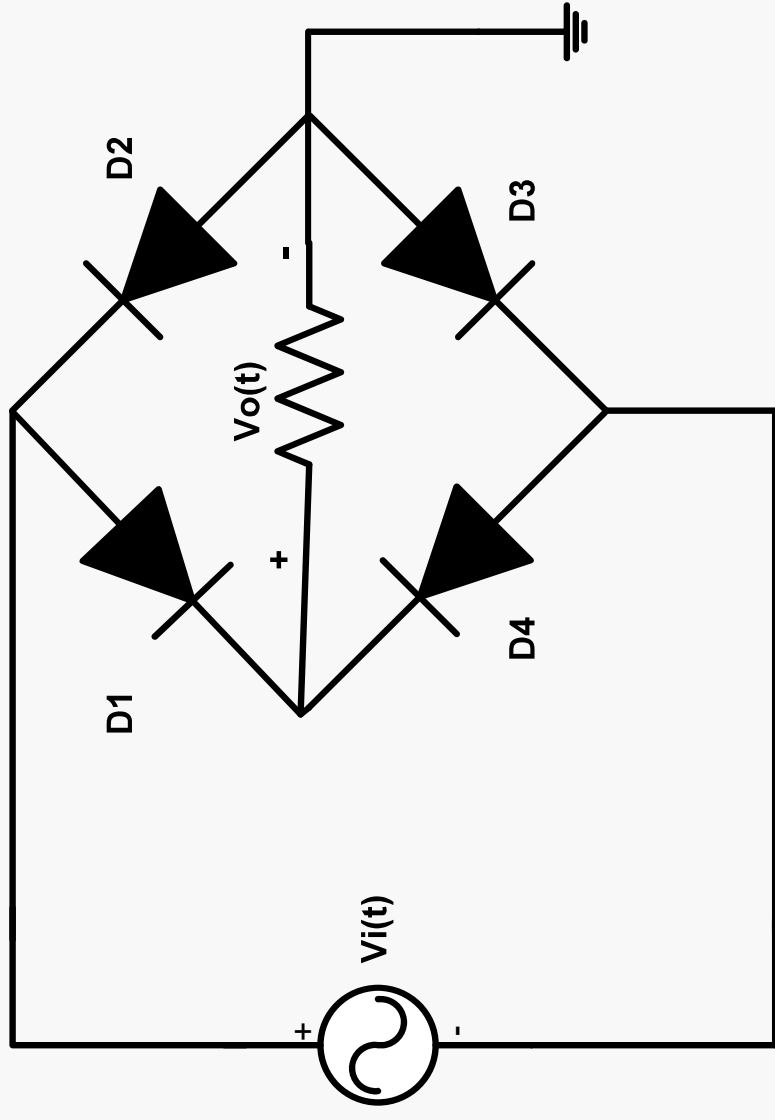
Filter

## b) Bridge full-wave rectifier



## b) Bridge full-wave rectifier

- ▶ Simplified circuit



## b) Bridge full-wave rectifier

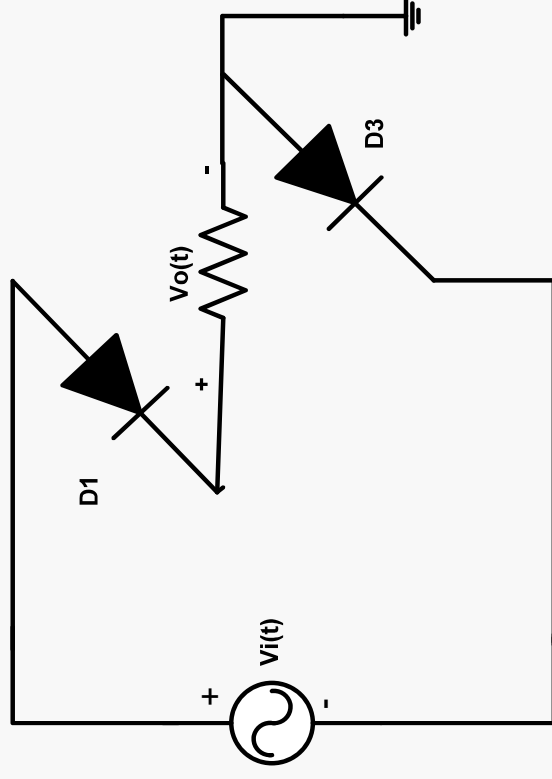
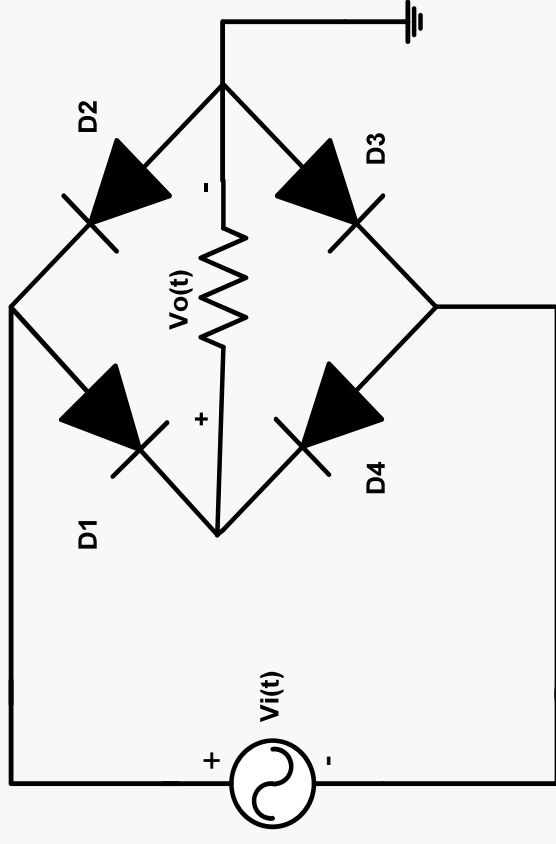
► 1) when  $V_s(t) > 0$

∴  $V_i(t) > 0$

∴  $D_1$  and  $D_3$  are on

∴  $D_2$  and  $D_4$  are off

►  $V_o(t) = V_i(t)$



► 2) when  $V_s(t) < 0$

$$\therefore V_i(t) < 0$$

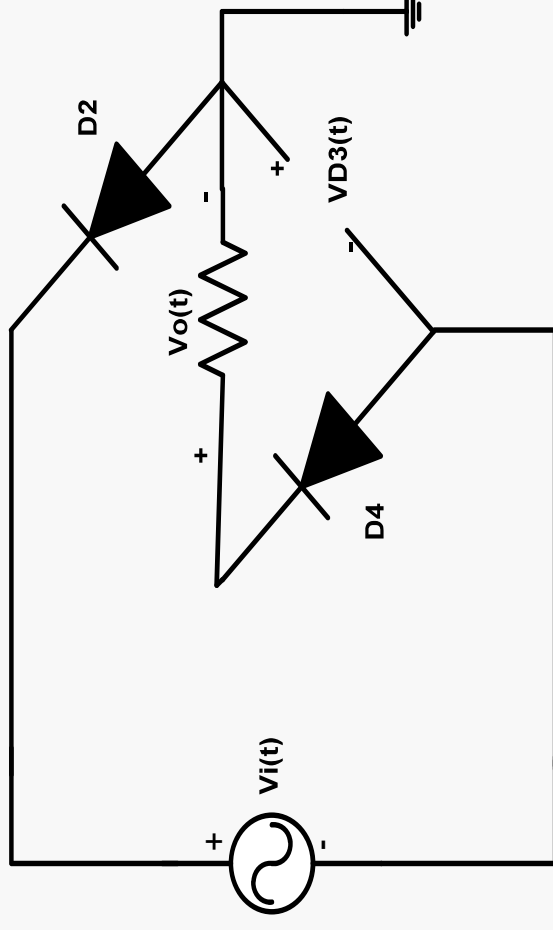
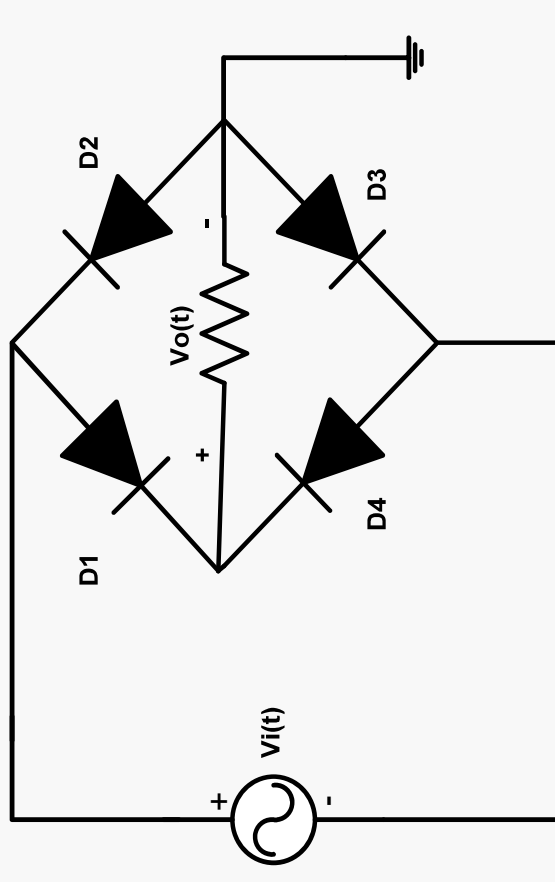
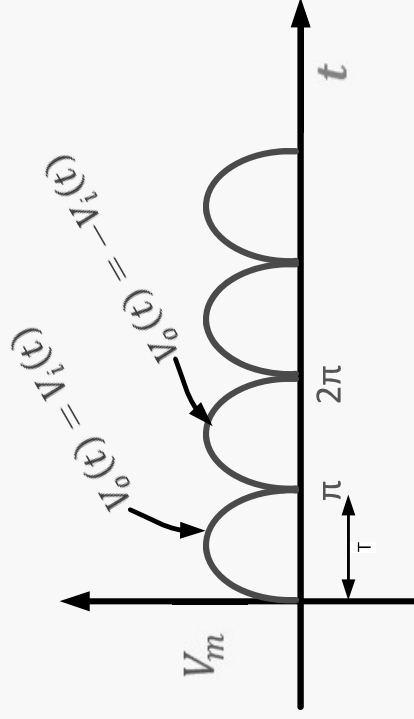
$\therefore D_1$  and  $D_3$  are off

$\therefore D_2$  and  $D_4$  are on

$$\therefore V_o(t) = -V_i(t)$$

$$\therefore V_{D3}(t) = V_i(t) < 0$$

$\therefore$  For the complete cycle of  $V_i(t)$



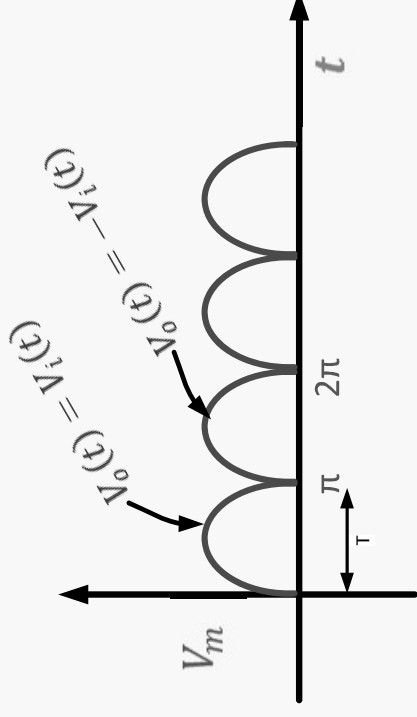
► ∴ For Bridge full-wave rectifier

$$► V_{o,av} = \frac{1}{T} \int_0^T V_o(t) dt$$

$$V_{o,av} = \frac{2V_m}{\pi}$$

$$► T = \frac{1}{2} T_o$$

$$► f = 2f_o$$

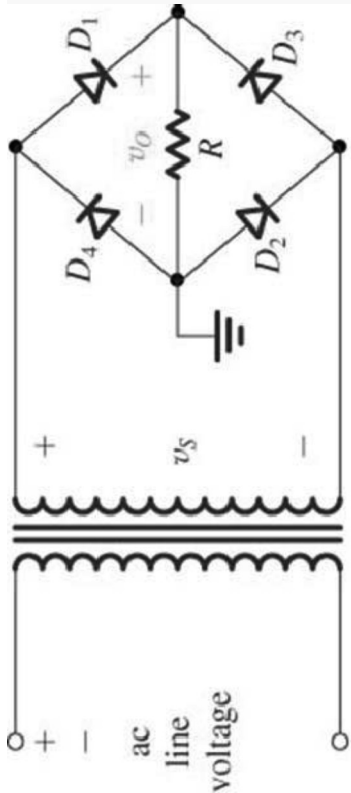


► To calculate the PIV When  $V_i(t) < 0$

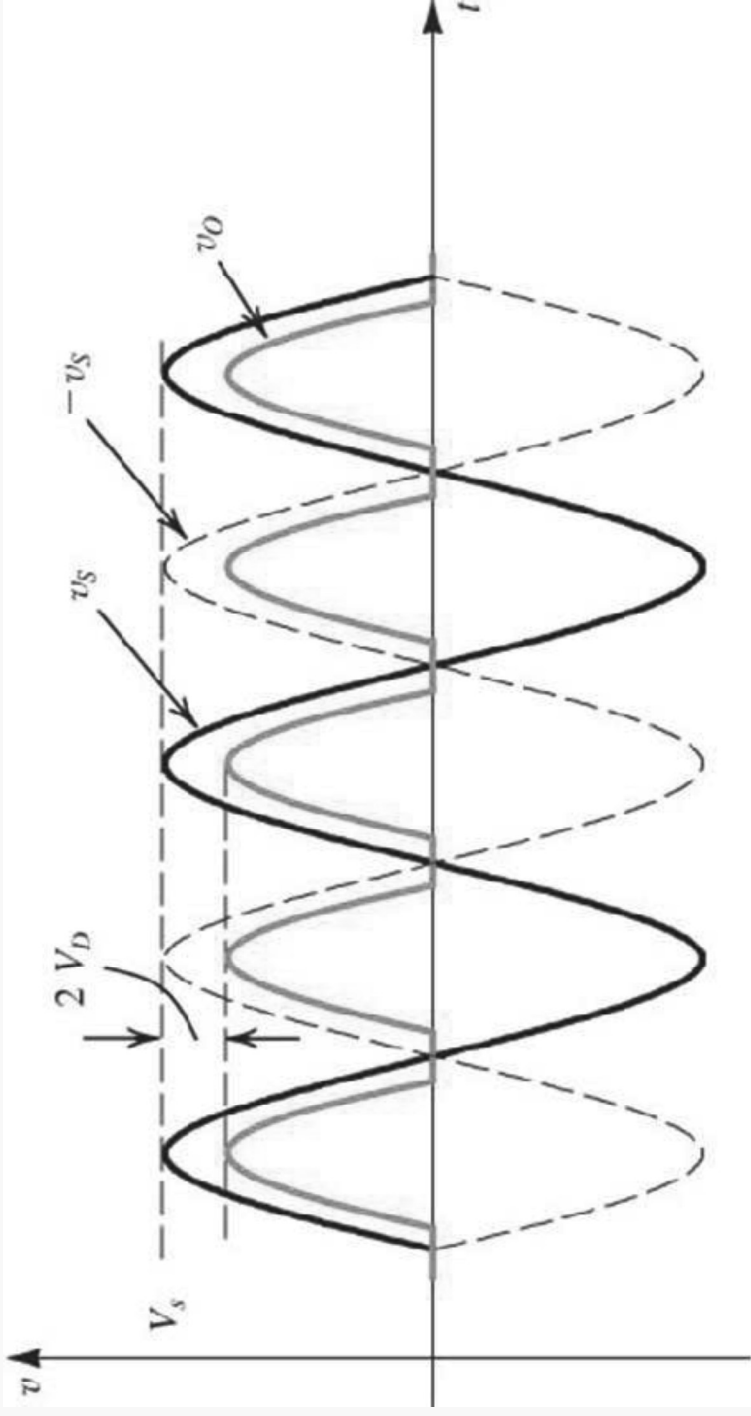
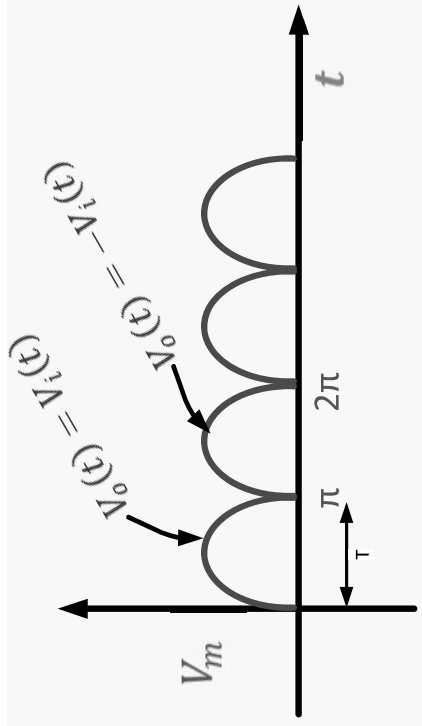
$$V_{D3}(t) = V_i(t)$$

$$\therefore V_{D3}(t)_{max} = -V_m$$

$$\therefore \text{PIV} = -V_m$$



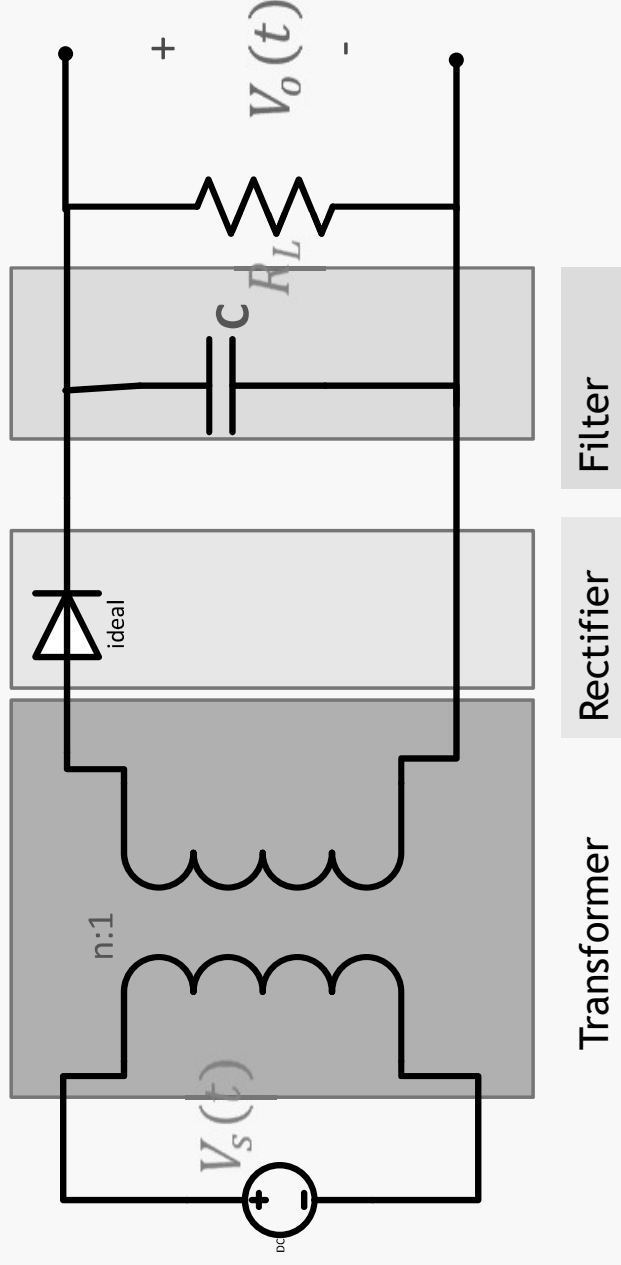
(a)



If the diodes have  $V_k$

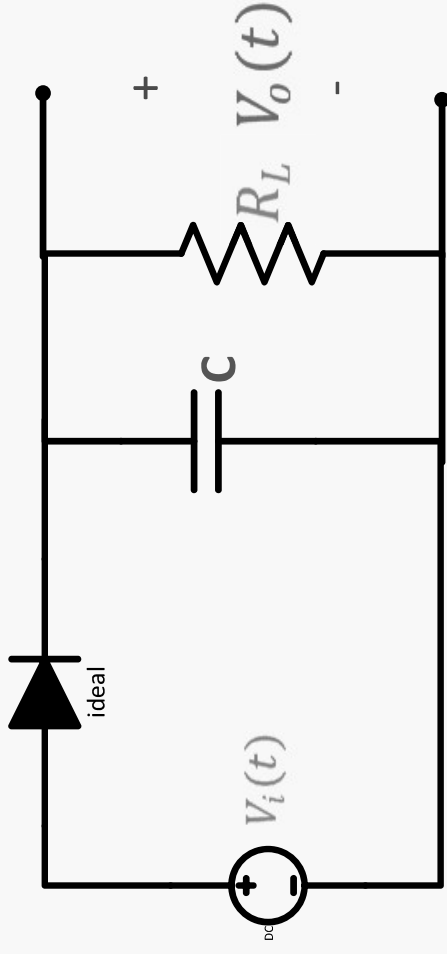


- Filter: used to smooth out the pulsating dc produced by the rectifier by removing its ac ripple contents and passing its dc component ( average value)

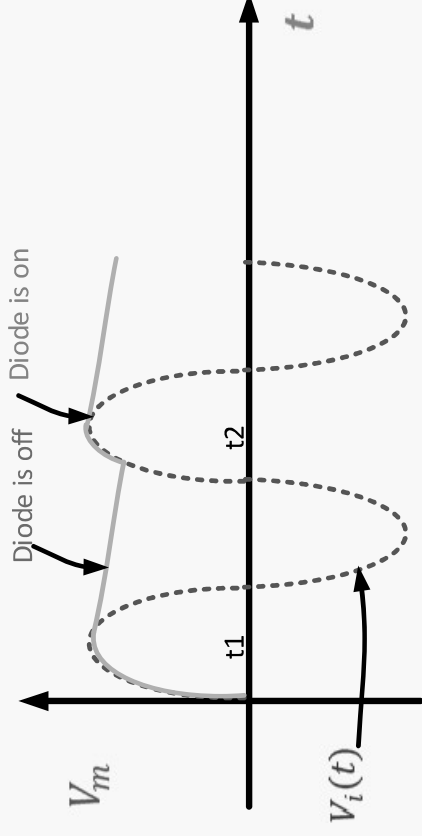


## Simplified Circuit

► A) when  $V_i(t) > V_c(t)$  ;  
Diode is on and  
 $V_o(t) = V_c(t) = V_i(t)$



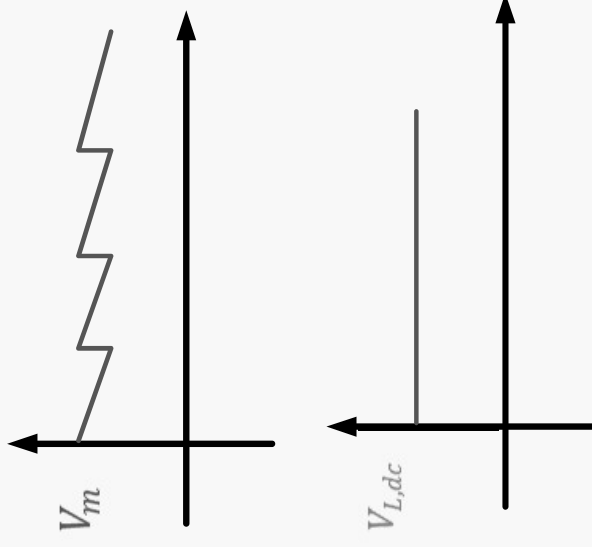
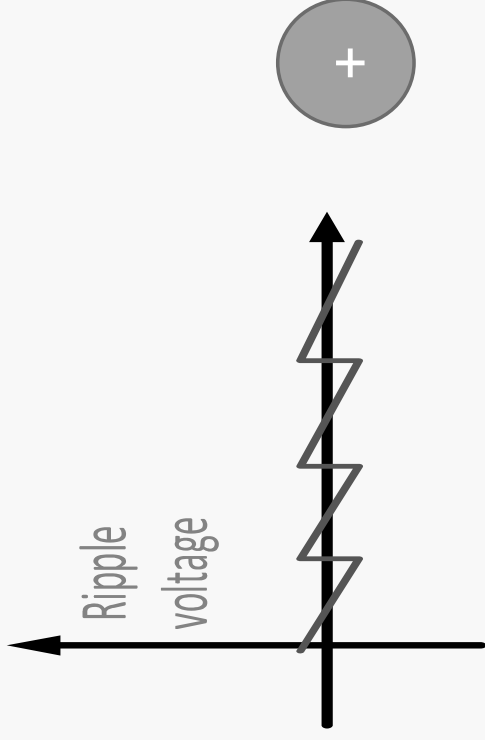
► B) when  $V_i(t) < V_c(t)$  ;  
Diode is off and the  
capacitor starts  
discharging



- ▶ **Ripple factor is an indicator for the effectiveness of the filter**

$$r = \frac{\text{RMS(ripple voltage)}}{\text{Average value of the output signal}} \times 100\%$$

- ▶ **The output signal can be approximated as shown**



## Example

$$\blacktriangleright V_{L,dc} = V_{L,av} = \frac{1}{T} \int_0^T V_L(t) dt$$

$$V_{L,dc} = \frac{1}{T} \cdot \text{area}$$

$$= \frac{1}{T} \left( 8T + \frac{2 \cdot T}{2} \right)$$

$$V_{L,dc} = 9V$$

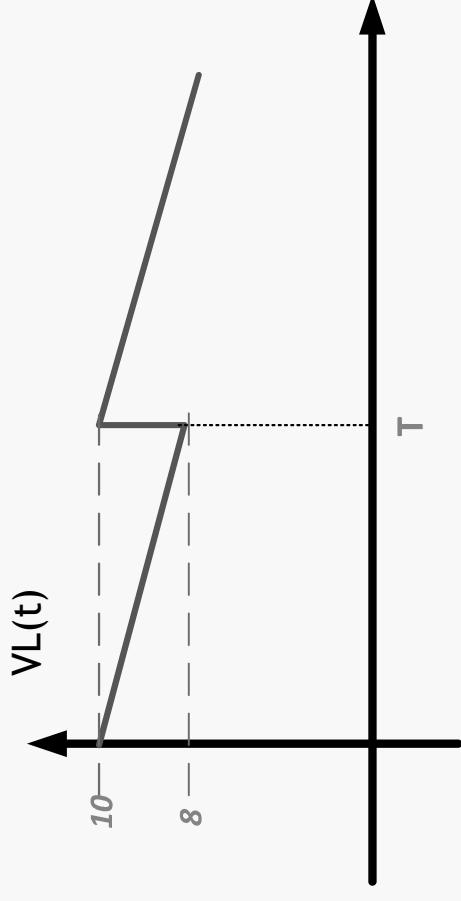
OR

$$\blacktriangleright V_{L,dc} = V_m - \frac{1}{2} V_{Lr,p-p}$$

$$\text{where } V_m = 10V$$

$$V_{Lr,p-p} = 2V_{p-p}$$

$$\therefore V_{L,dc} = 10 - \frac{1}{2}(2) = 9V$$



► Also for a triangle signal, the *RMS value* =  $\frac{\text{Peak Value}}{\sqrt{3}}$

or *RMS value* =  $\frac{\text{Peak-to-peak Value}}{2\sqrt{3}}$

$$= \frac{V_{Lr,p-p}}{2\sqrt{3}}$$

$$\therefore r = \frac{\frac{V_{Lr,p-p}}{2\sqrt{3}}}{\frac{1}{2}V_{Lr,p-p}} \times 100\%$$

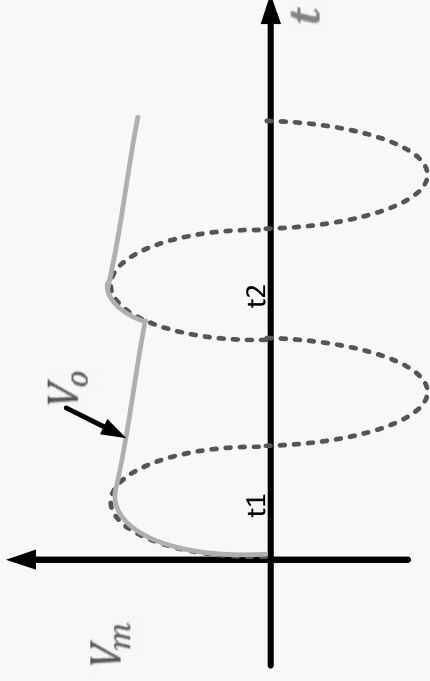
∴ To determine the ripple factor we need to find  $V_{Lr,p-p}$

## Ripple Factor

- ▶ For  $t_2 > t > t_1$
- ▶  $V_L(t) = V_m e^{-(t-t_1)/RC}$
- ▶  $V_{Lr,p-p} = V_L(t_1) - V_L(t_2)$
- ▶  $V_{Lr,p-p} = V_m - V_m e^{-(t_2-t_1)/RC}$
- ▶  $V_{Lr,p-p} = V_m \left(1 - e^{-\frac{(t_2-t_1)}{RC}}\right)$

Using  $e^{-x} \cong 1 - x$

- ▶  $V_{Lr,p-p} = \frac{V_m(t_2-t_1)}{RC}$
- ▶  $V_{L,dc} = V_m - \frac{1}{2} V_{Lr,p-p}$



► For half-wave rectifier

►  $t_2 - t_1 = T_o = \frac{1}{f_o}$

$\therefore V_{Lr,p-p} = V_m \frac{1}{f_o R C}$

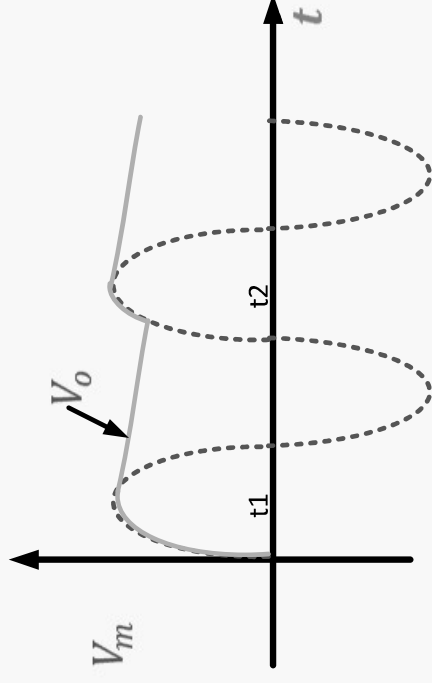
►  $V_{L,dc} = V_m \left(1 - \frac{1}{2f_o R C}\right)$

►  $(V_{L,r})_{rms} = \frac{V_{Lr,p-p}}{2\sqrt{3}}$

$(V_{L,r})_{rms} = \frac{V_m}{2\sqrt{3}f_o R C}$

►  $r = \frac{(V_{L,r})_{rms}}{V_{L,dc}} \times 100\%$

$r = \frac{1}{\sqrt{3}(2f_o R C - 1)} \times 100\%$



► For full-wave rectifier

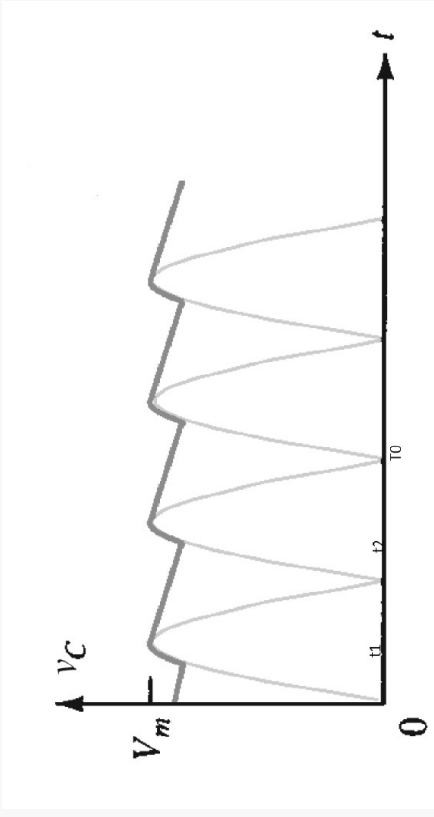
$$\text{► } t_2 - t_1 \approx \frac{1}{2} T_o = \frac{1}{2f_o}$$

$$\therefore V_{Lr,p-p} = V_m \frac{1}{2f_o RC}$$

$$\text{► } V_{L,dc} = V_m \left( 1 - \frac{1}{4f_o RC} \right)$$

$$(V_{L,r})_{rms} = \frac{V_m}{4\sqrt{3}f_o RC}$$

$$r = \frac{1}{\sqrt{3}(4f_o RC - 1)} \times 100\%$$





## Example

- ▶ Find the ripple factor  $r$

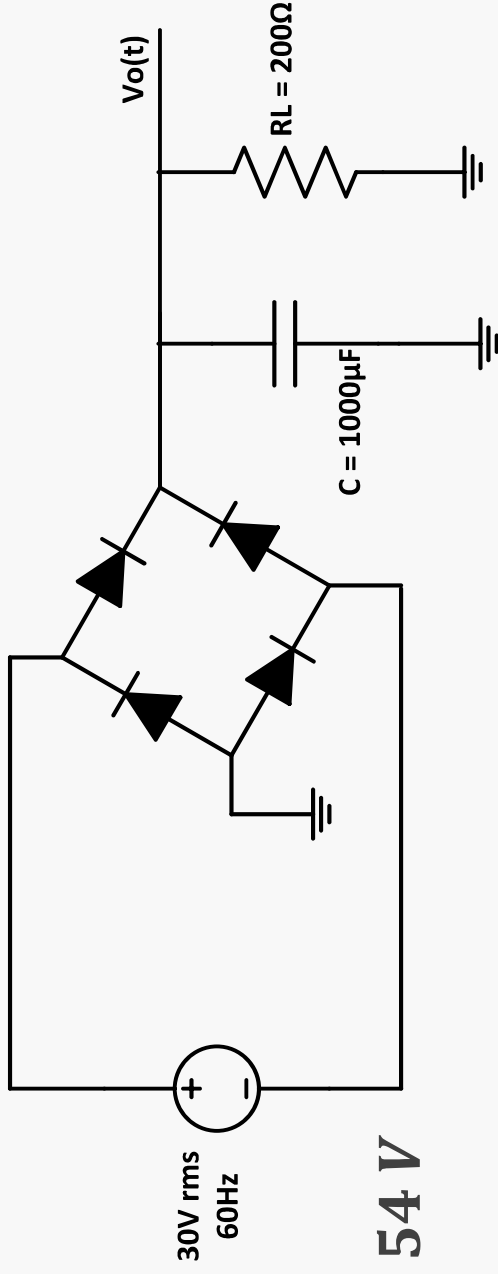
$$\blacktriangleright V_{L,dc} = V_m - \frac{1}{2} \frac{V_m}{2f_o R_L C} = 41.54 \text{ V}$$

$$\blacktriangleright V_{Lr,p-p} = \frac{V_m}{2f_o R_L C} = 1.7677 \text{ V}$$

$$\blacktriangleright \text{RMS (ripple voltage)} = \frac{V_{Lr,p-p}}{2\sqrt{3}} = 0.51 \text{ V rms}$$

$$\therefore r = \frac{0.51}{41.54} \times 100\%$$

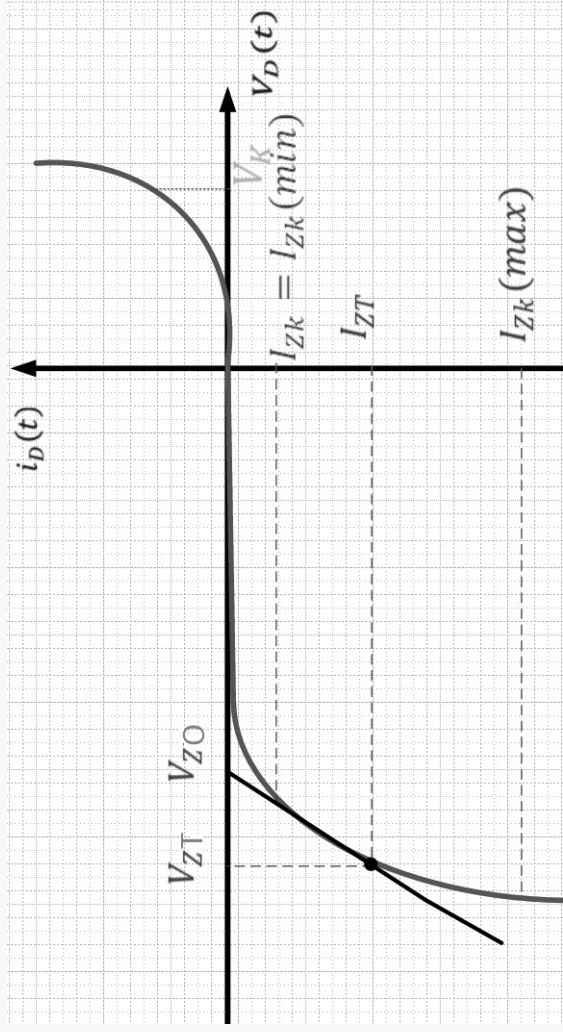
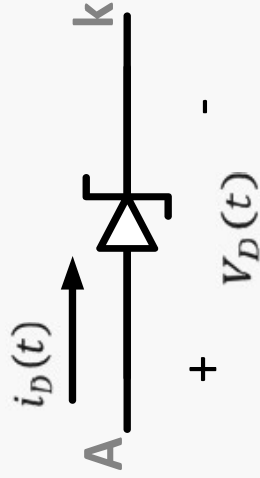
$$r = 1.2277 \%$$



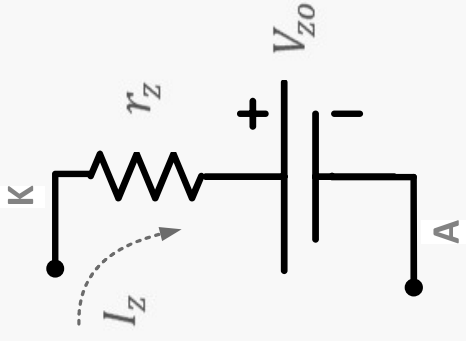
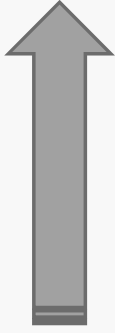
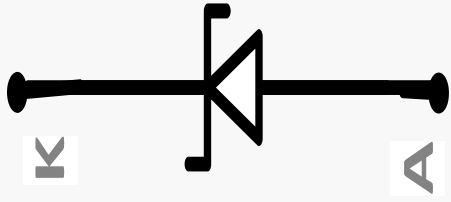
# Zener Diode

**Simple voltage regulator**

# Zener Diode



The model of the Zener Diode in the breakdown



$$\blacktriangleright r_z = \frac{\Delta V_z}{\Delta I_z}$$

Example

A 1N4736 zener diode has  $r_z = 3.5 \Omega$ , the data sheet given

$$V_{ZT} = 6.8\text{v} @ I_{ZT} = \mathbf{37\text{mA}}$$

and  $I_{ZK} = 1\text{mA}$ .

a) Find  $V_Z$  when  $I_Z = 50\text{mA}$

b) Find  $V_Z$  when  $I_Z = 25\text{mA}$

► solution

$$V_Z = r_z I_Z + V_{Z0}$$

$$V_{ZT} = r_z I_{ZT} + V_{Z0}$$

$$6.8\text{v} = (3.5)(37\text{mA}) + V_{Z0}$$

$$V_{Z0} = \mathbf{6.6705\text{v}}$$

a) when  $I_Z = 50\text{mA}$

$$V_Z = (3.5)(50\text{mA}) + 6.6705$$

$$V_Z = \mathbf{6.8455\text{v}}$$

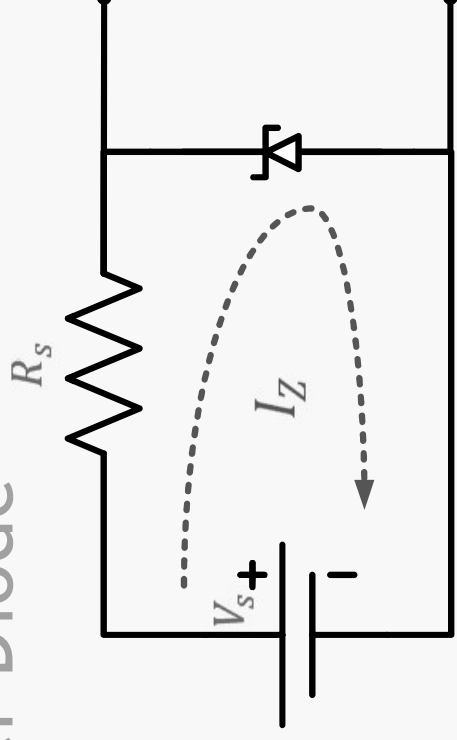
b) when  $I_Z = 25\text{mA}$

$$V_Z = (3.5)(25\text{mA}) + 6.6705$$

$$V_Z = \mathbf{6.756\text{v}}$$

## Circuits Containing Zener Diode

\* Zener diode is reversed bias



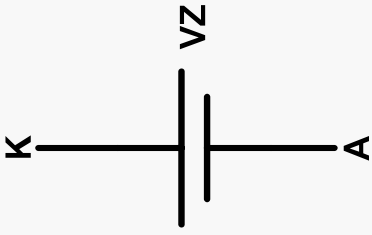
- ▶ If  $V_S > V_{Z0}$ , the zener diode is in the breakdown region .
- ▶ If  $V_S < V_{Z0}$ , the zener diode is open circuit.

Also we must make sure that

- ▶  $I_Z(\text{max}) > I_Z > I_Z(\text{min})$

For the zener diode to operate safely in the breakdown region .

Ideal model of Zener in the breakdown region .

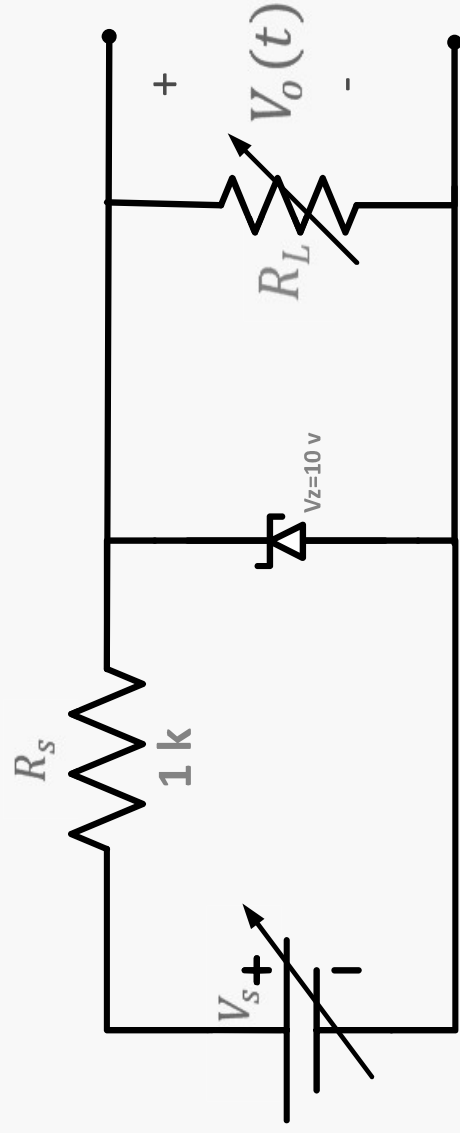


**Regulator :**

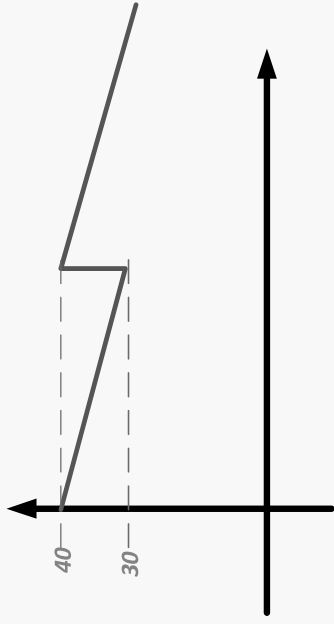
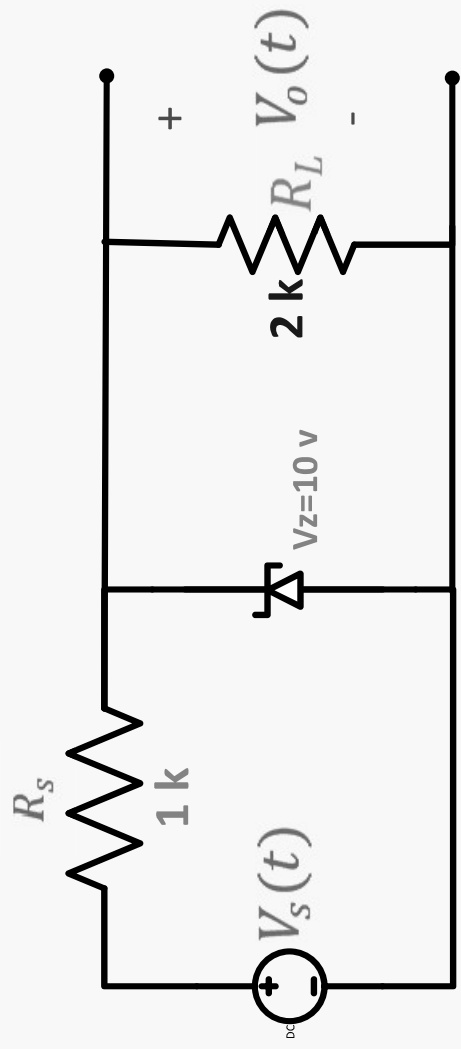
**Used to maintain a constant dc output voltage under variation in the load current from the dc power supply and under variation in the ac line voltage**



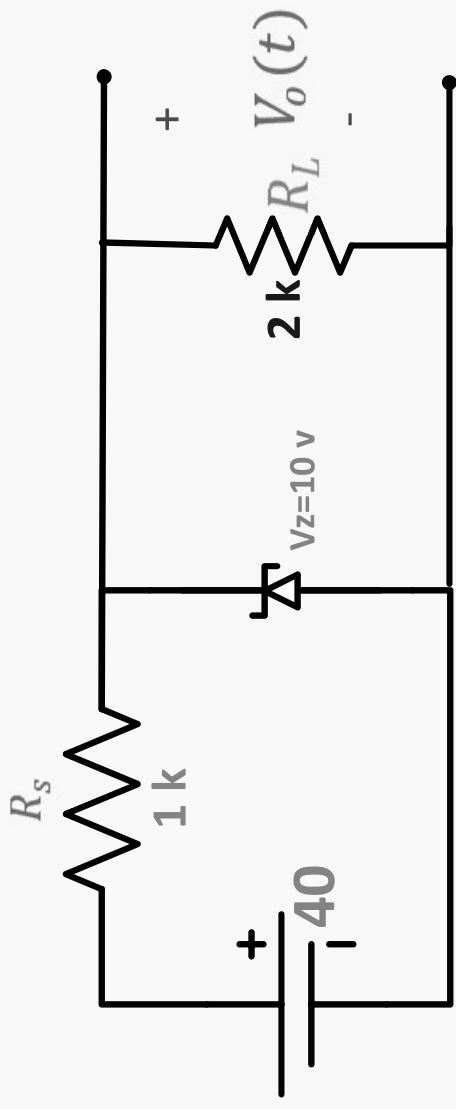
# Simple voltage regulator



# Voltage regulation with input variation

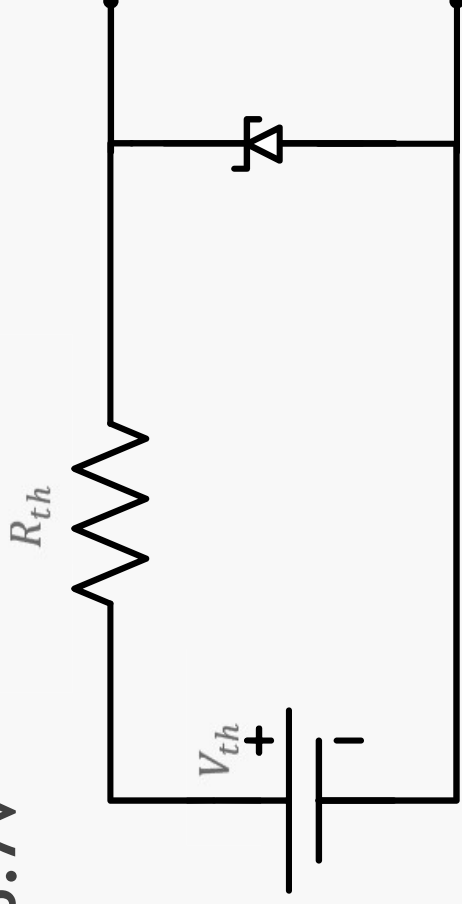


a) Let  $V_S(t) = 40\text{V}$

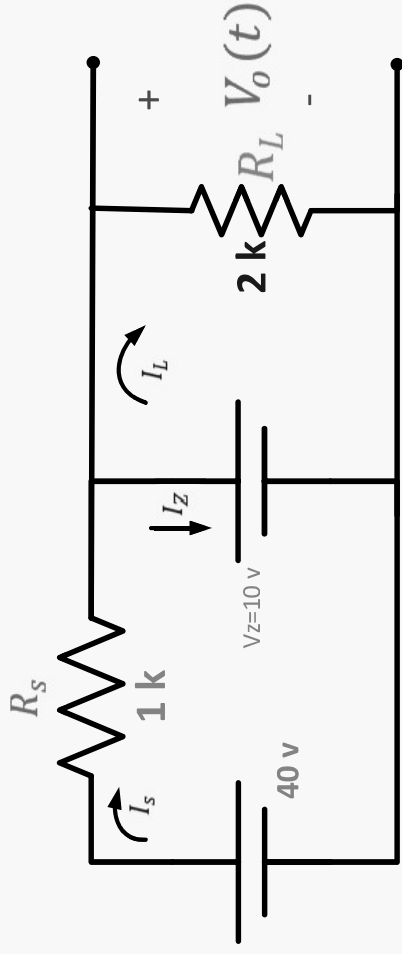


$$R_{TH} = 1\text{K} \parallel 2\text{K} = 0.67\text{ k}$$

$$V_{TH} = \frac{2\text{K}}{2\text{K} + 1\text{K}} \cdot 40 = 26.7\text{V}$$



► Since  $V_{TH} > V_Z$ ; the Zener diode is in the breakdown region .



$$\therefore V_O = V_Z = 10\text{V}$$

$$I_S = \frac{40 - 10}{1\text{K}} = 30\text{ mA}$$

$$I_L = \frac{V_O}{R_L} = 5\text{mA}$$

$$I_Z = I_S - I_L = 25\text{mA}$$

**b) Let  $V_S(t) = 30\text{v}$**

**► Following the same steps as before**

$$R_{TH} = 0.67\text{K}$$

$$V_{TH} = 20\text{v}$$

**► Since  $V_{TH} > V_Z$  ; the zener in the breakdown**

$$\therefore V_O = V_Z = 10\text{v}$$

$$I_S = 20 \text{ mA}$$

$$I_L = 5\text{mA}$$

$$I_Z = 15\text{mA}$$

## 2) Voltage regulation with load variation

a) Let  $R_L = 0.5K$

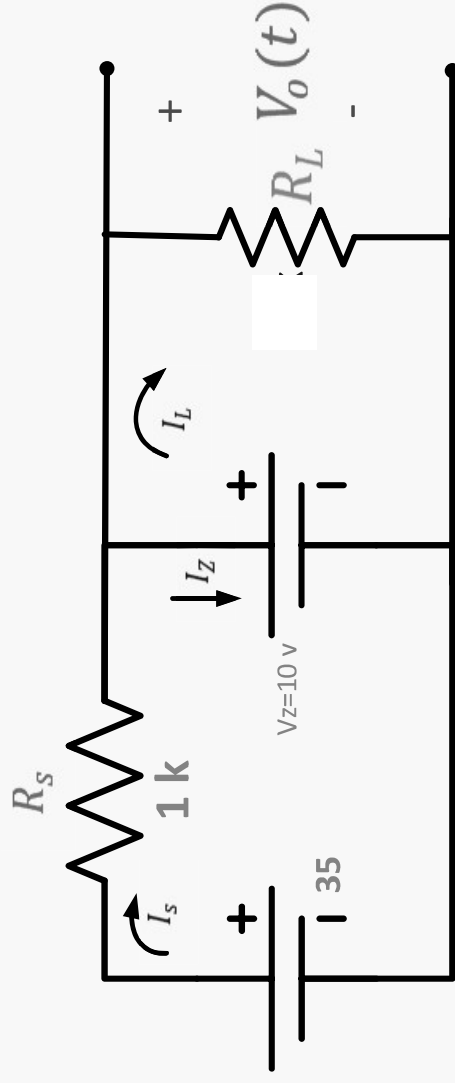
the zener diode is in the breakdown region . Prove !!

$$V_O = V_Z = 10v$$

$$I_S = \frac{35-10}{1K} = 25 \text{ mA}$$

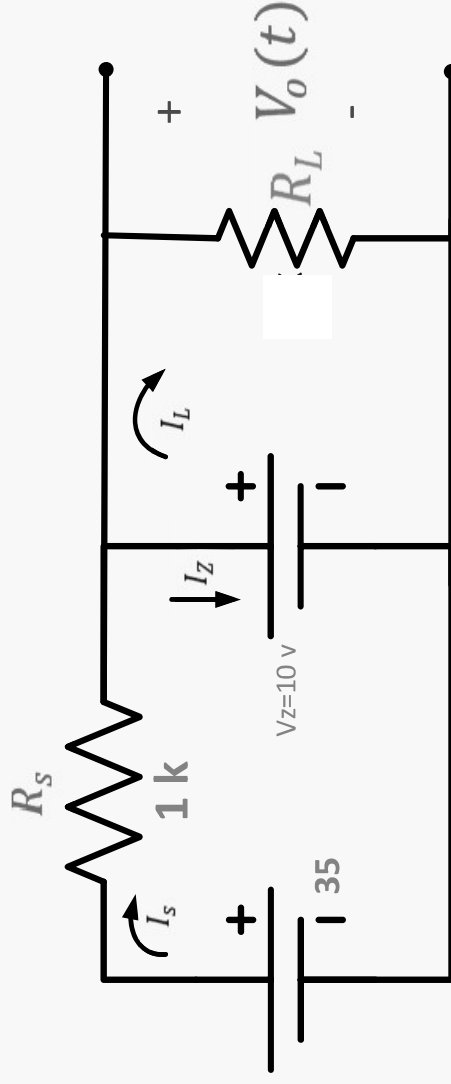
$$I_L = \frac{V_O}{R_L} = 20\text{mA}$$

$$I_Z = I_S - I_L = 5\text{mA}$$



b) Let  $R_L = 5K$

▶ the Zener diode is in the breakdown region . Prove !!



$$V_O = V_Z = 10V$$

$$I_S = \frac{35-10}{1K} = 25 \text{ mA}$$

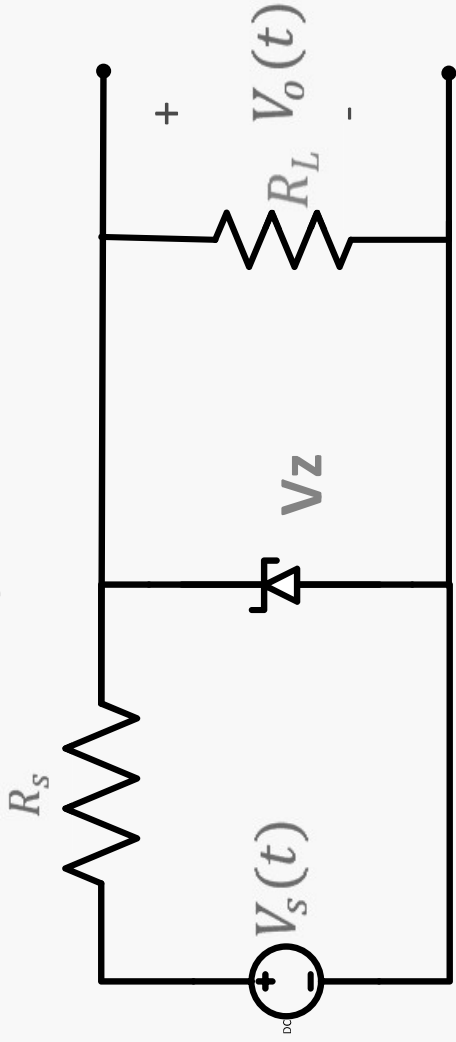
$$I_L = \frac{V_O}{R_L} = 2\text{mA}$$

$$I_Z = I_S - I_L = 23\text{mA}$$

▶ In the four cases we must verify

▶  $I_Z(\text{max}) > I_Z > I_Z(\text{min})$

## Design of $R_S$



► Given :  $V_S(\text{min})$  and  $V_S(\text{max})$   
 $R_L(\text{min})$  and  $R_L(\text{max})$

and  $(V_Z, I_Z(\text{min}), I_Z(\text{max}))$



►  $I_Z = I_S - I_L$

$I_Z = \frac{V_S(t) - V_Z}{R_S} - I_L > I_Z(\min)$

► the worst condition

$\frac{V_S(\min) - V_Z}{R_S} - I_L(\max) > I_Z(\min)$

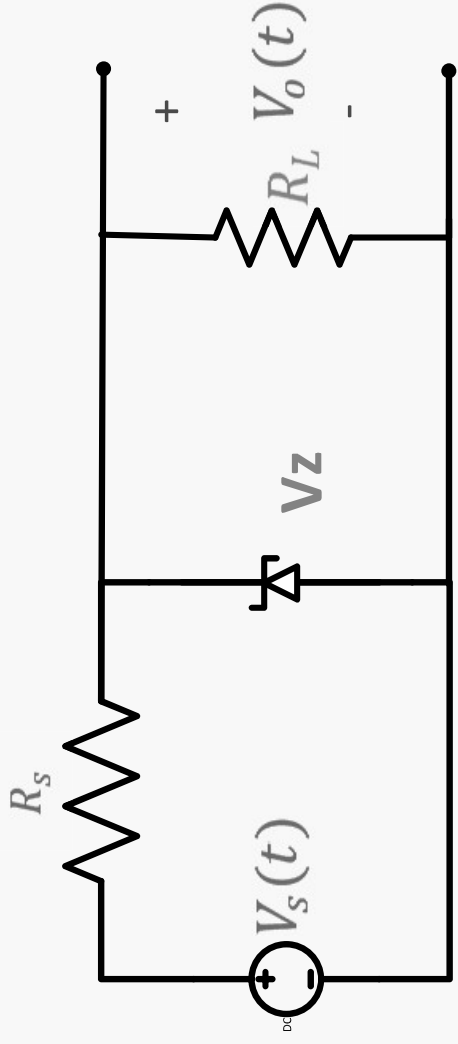
$\therefore R_S < \frac{V_S(\min) - V_Z}{I_L(\max) + I_Z(\min)}$

now

$I_Z = \frac{V_S(t) - V_Z}{R_S} - I_L < I_Z(\max)$

► the worst condition

$\frac{V_S(\max) - V_Z}{R_S} - I_L(\min) < I_Z(\max) \quad \therefore R_S > \frac{V_S(\max) - V_Z}{I_L(\min) + I_Z(\max)}$



Combining the two results

$$\frac{V_S(\min) - V_Z}{I_L(\max) + I_Z(\min)} > R_S > \frac{V_S(\max) - V_Z}{I_L(\min) + I_Z(\max)}$$

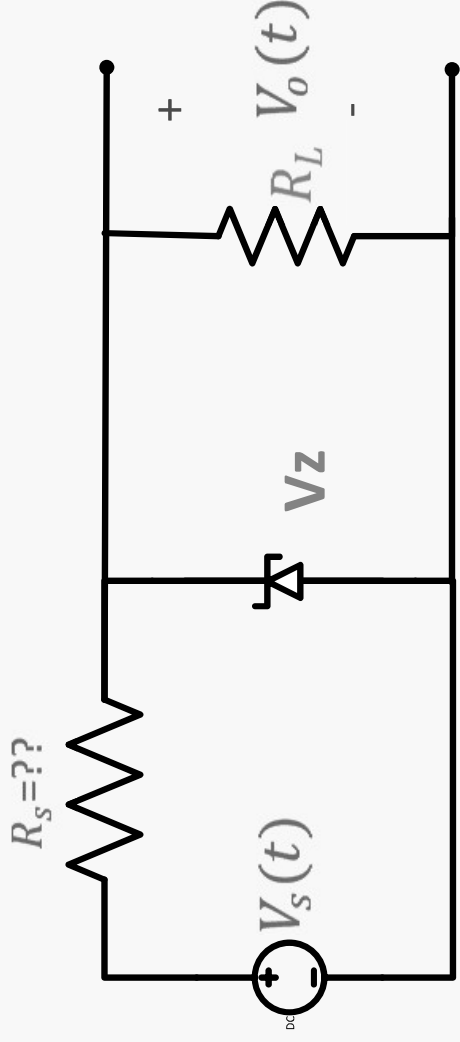
note that

$$I_L(\max) = \frac{V_Z}{R_L(\min)}$$

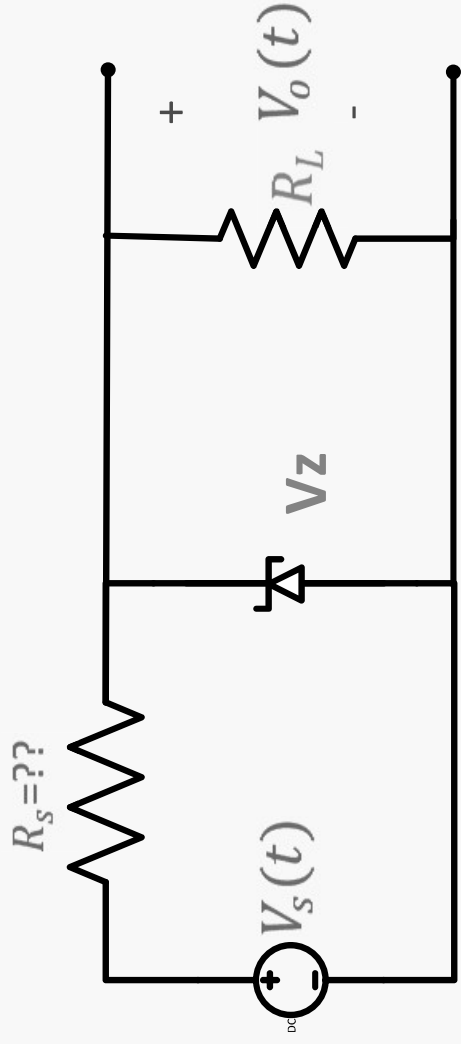
and

$$I_L(\min) = \frac{V_Z}{R_L(\max)}$$

## Example



- ▶ Given :
- ▶ Zener diode :  $I_Z(\text{min})=5\text{mA}$   
 $I_Z(\text{max})=200\text{mA}$   
 $V_Z = 10\text{V}$
- ▶ load:  $R_L(\text{min})=500\ \Omega$  ;  $\therefore I_L(\text{max})= 20\ \text{mA}$   
 $R_L(\text{max})= \infty\ \Omega$  ;  $\therefore I_L(\text{min})= 0\ \text{mA}$
- ▶ Input signal :  $V_S(\text{min})=15\ \text{v}$   
 $V_S(\text{max})=20\ \text{v}$



$$\frac{V_S(\text{min}) - V_Z}{I_L(\text{max}) + I_Z(\text{min})} > R_S > \frac{V_S(\text{max}) - V_Z}{I_L(\text{min}) + I_Z(\text{max})}$$

$$200 > R_S > 50 \Omega$$

$\therefore$  Let  $R_S = 100 \Omega$

To determine the effectiveness of the voltage regulator, we define two indicators

a) Load regulation =  $\frac{\Delta V_o}{\Delta I_L}$

assuming  $V_S$  constant

b) Line regulation =  $\frac{\Delta V_o}{\Delta V_S}$

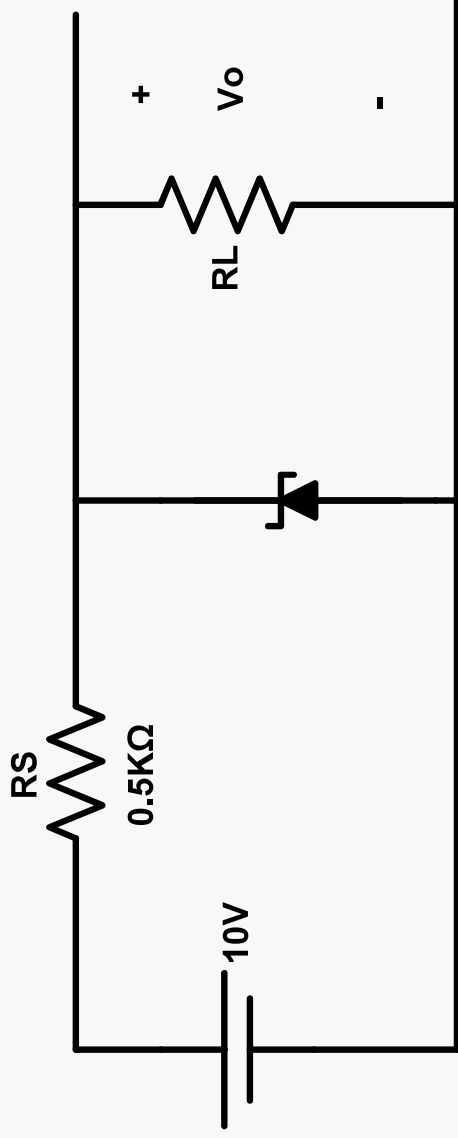
assuming  $R_L$  fixed

- For the simple voltage regulator, and using ideal model for the zener diode

$$\frac{\Delta V_o}{\Delta I_L} = 0 \quad \text{and} \quad \frac{\Delta V_o}{\Delta V_S} = 0$$

a) Load regulation =  $\frac{\Delta V_o}{\Delta I_L}$

$\infty \geq R_L \geq 2K$



The zener diode

$V_{ZT} = 6.8\text{ v @ } I_{ZT} = 5\text{mA and } r_z = 20\Omega$

$V_Z = r_z I_Z + V_{Z0}$

$V_{Z0} = 6.7\text{V}$

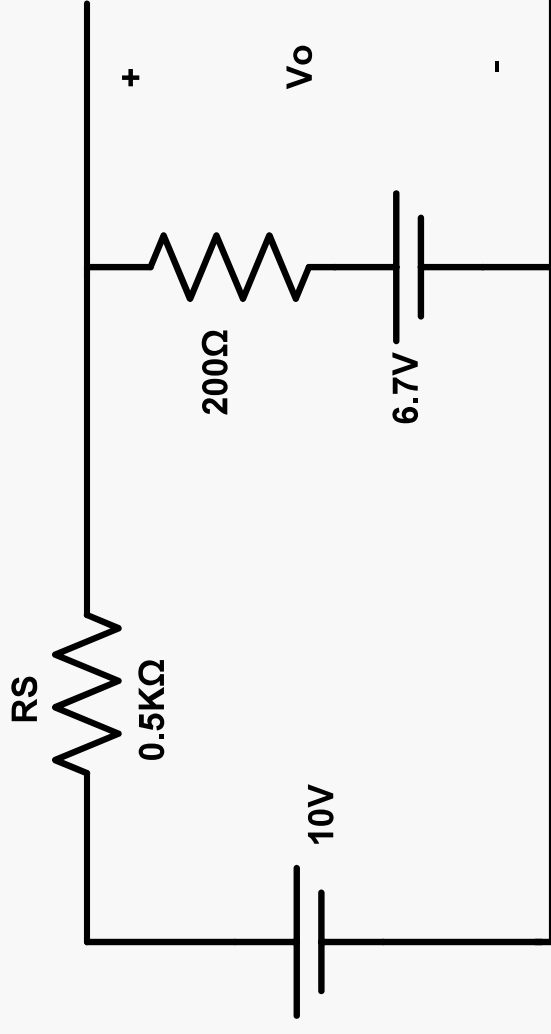
1) Let  $R_L = \infty$

► Since  $V_S > V_{Z0}$  ∴ the zener is in breakdown

$$V_O = 20 I_Z + 6.7$$

$$I_Z = \frac{10 - 6.7}{520} = 6.35 \text{ mA}$$

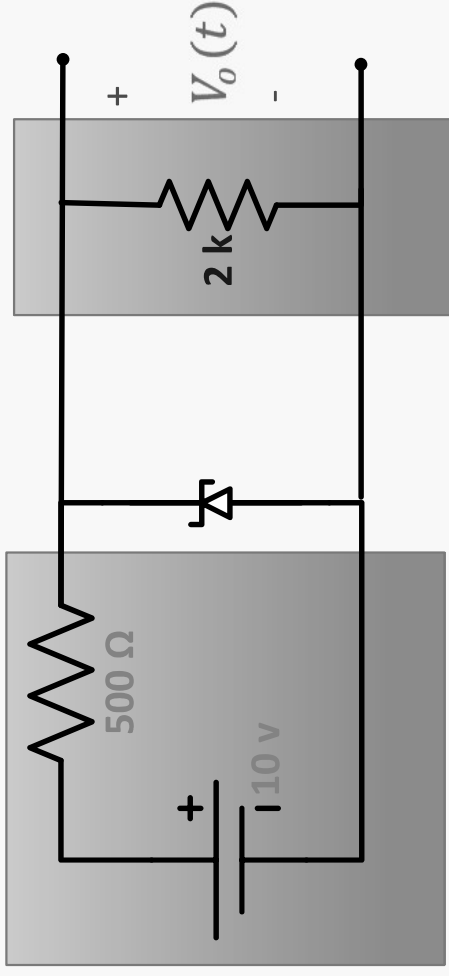
$$\therefore V_O = 6.83 \text{ V}$$



$$2) \text{ Let } R_L = 2K\Omega$$

$$V_{TH} = \frac{2000}{2000+500} \cdot 10 = 8\text{V}$$

$$R_{TH} = 500 \parallel 2000 = 400 \Omega$$



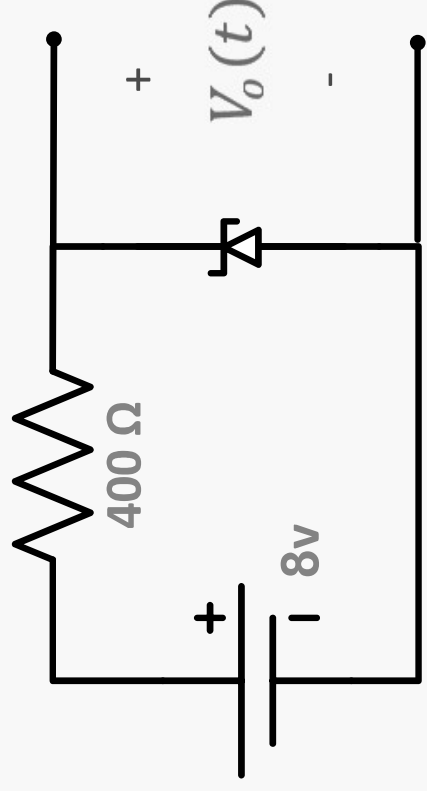
since  $V_{TH} > V_{ZO}$  ; zener in breakdown

$$V_O = r_z I_Z + V_{ZO}$$

$$V_O = 6.7 + 20 \left( \frac{8-6.7}{420} \right) = 6.76\text{V}$$

$$I_L = \frac{V_O}{R_L} = I_Z = \frac{6.76}{2K} = 3.38 \text{ mA}$$

$$\therefore \frac{\Delta V_O}{\Delta I_L} = \frac{6.76-6.83}{3.38-0} = -20.7 \text{ mV/mA}$$





b) Line regulation =  $\frac{\Delta V_O}{\Delta V_S}$

► When  $V_S = 10 \text{ v}$   
 $V_O = 6.76 \text{ v}$

►  $11 \text{ v} \geq V_S \geq 10 \text{ v}$

► when  $V_S = 11 \text{ v}$

$$V_{TH} = 8.8 \text{ v}$$

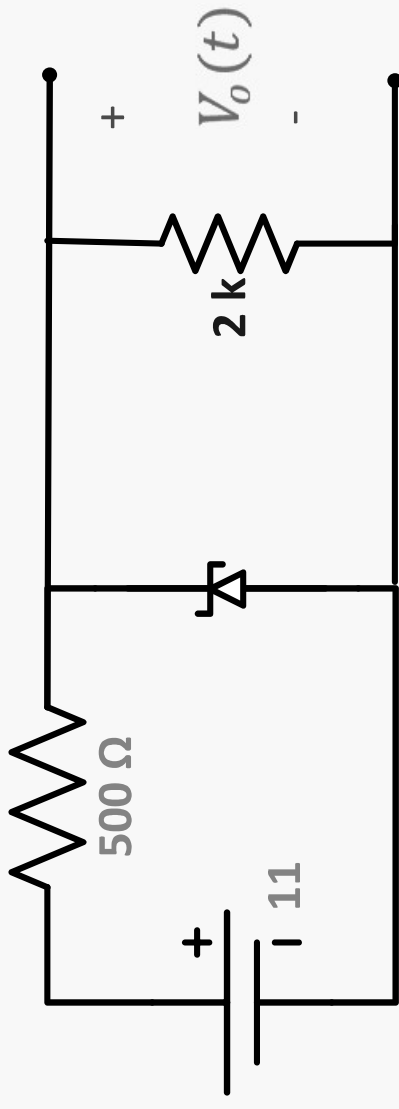
$$R_{TH} = 0.4 \text{ k} \Omega$$

$$V_O = r_z I_Z + V_{Z0}$$

$$V_O = 6.7 + 20 \left( \frac{8.8 - 6.7}{420} \right) = 6.8 \text{ v}$$

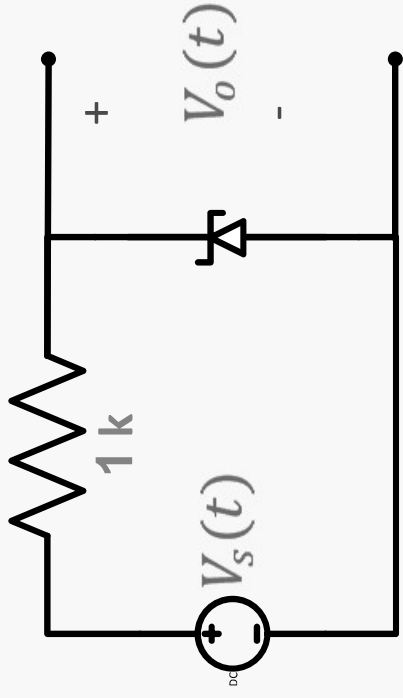
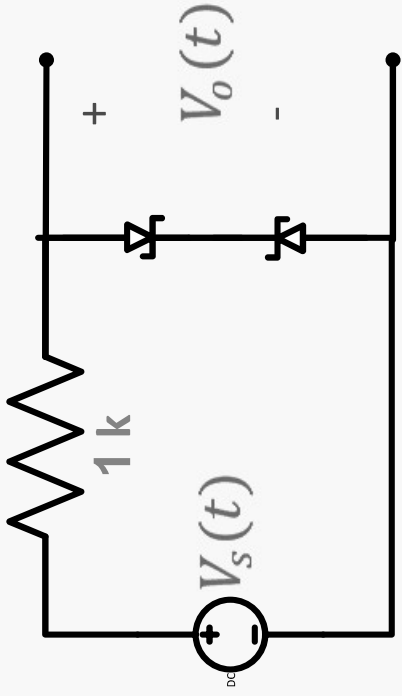
$$I_L = \frac{V_O}{R_L} = \frac{6.76}{2K} = 3.38 \text{ mA}$$

$$\therefore \frac{\Delta V_O}{\Delta V_S} = \frac{6.8 - 6.76}{11 - 10} = + 38 \text{ mV/V}$$



For the following circuit ; calculate and sketch the output voltage for

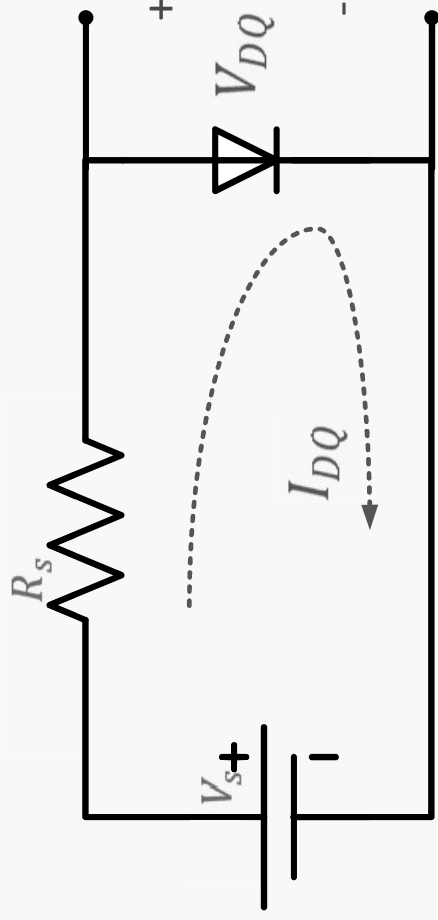
$V_s(t) = 10\sin \omega t$  v  
given  $V_Z = 5$  v



## Ac Small Signal Analysis

$$\blacktriangleright I_{DQ} = I_S \left( e^{\frac{V_{DQ}}{nV_T}} - 1 \right)$$

$$\blacktriangleright I_{DQ} = I_S \left( e^{\frac{V_{DQ}}{nV_T}} \right)$$

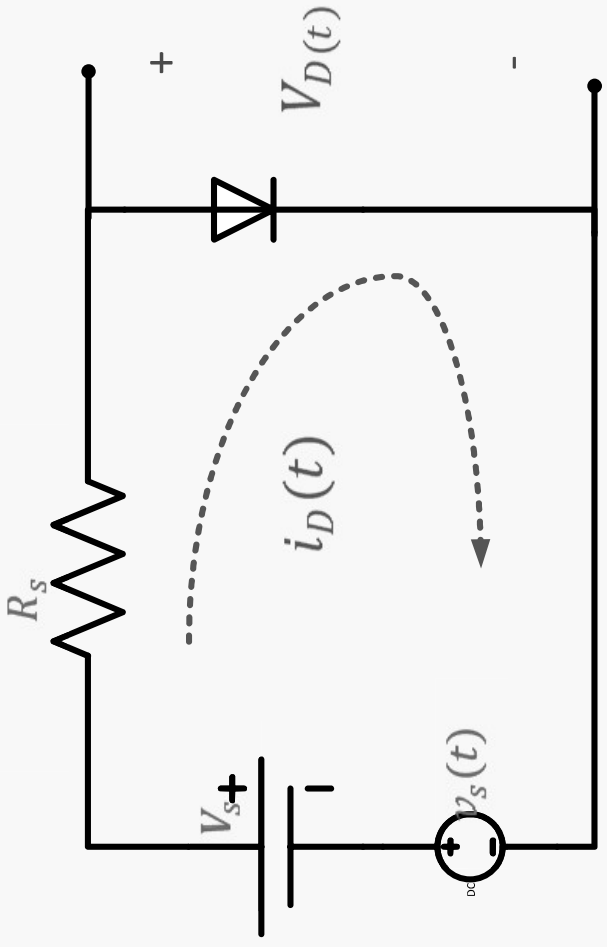


now

►  $i_D(t) = I_{DQ} + i_d(t)$

►  $V_D(t) = V_{DQ} + v_d(t)$

►  $i_D(t) = I_S \left( e^{\frac{V_D(t)}{\eta V_T}} - 1 \right)$



► And since the diode is forward biased

$$\text{► } i_D(t) = I_S(e^{\frac{V_D(t)}{\eta V_T}})$$

$$\text{► } i_D(t) = I_S(e^{\frac{V_{DQ} + v_d}{\eta V_T}})$$

$$\text{► } i_D(t) = I_S e^{\frac{V_{DQ}}{\eta V_T}} \cdot e^{\frac{v_d}{\eta V_T}}$$

$$\text{► } i_D(t) = I_{DQ}(e^{\frac{v_d}{\eta V_T}})$$

► using  $e^x = 1+x$  ;  $x$  is very small

$$i_D(t) = I_{DQ} \left( 1 + \frac{v_d(t)}{\eta V_T} \right) = I_{DQ} + \frac{v_d(t)}{\eta V_T / I_{DQ}}$$

$$\text{but } i_D(t) = I_{DQ} + i_d(t)$$

$$\therefore i_d(t) = \frac{v_d(t)}{\eta V_T / I_{DQ}} = \frac{v_d}{r_d}$$

$$\text{where } r_d = \frac{\eta V_T}{I_{DQ}} = \frac{V_T}{I_{DQ}}$$

**$\therefore$  If  $V_S(t) = V_S + v_S(t)$**

**$V_S =$  Dc component**

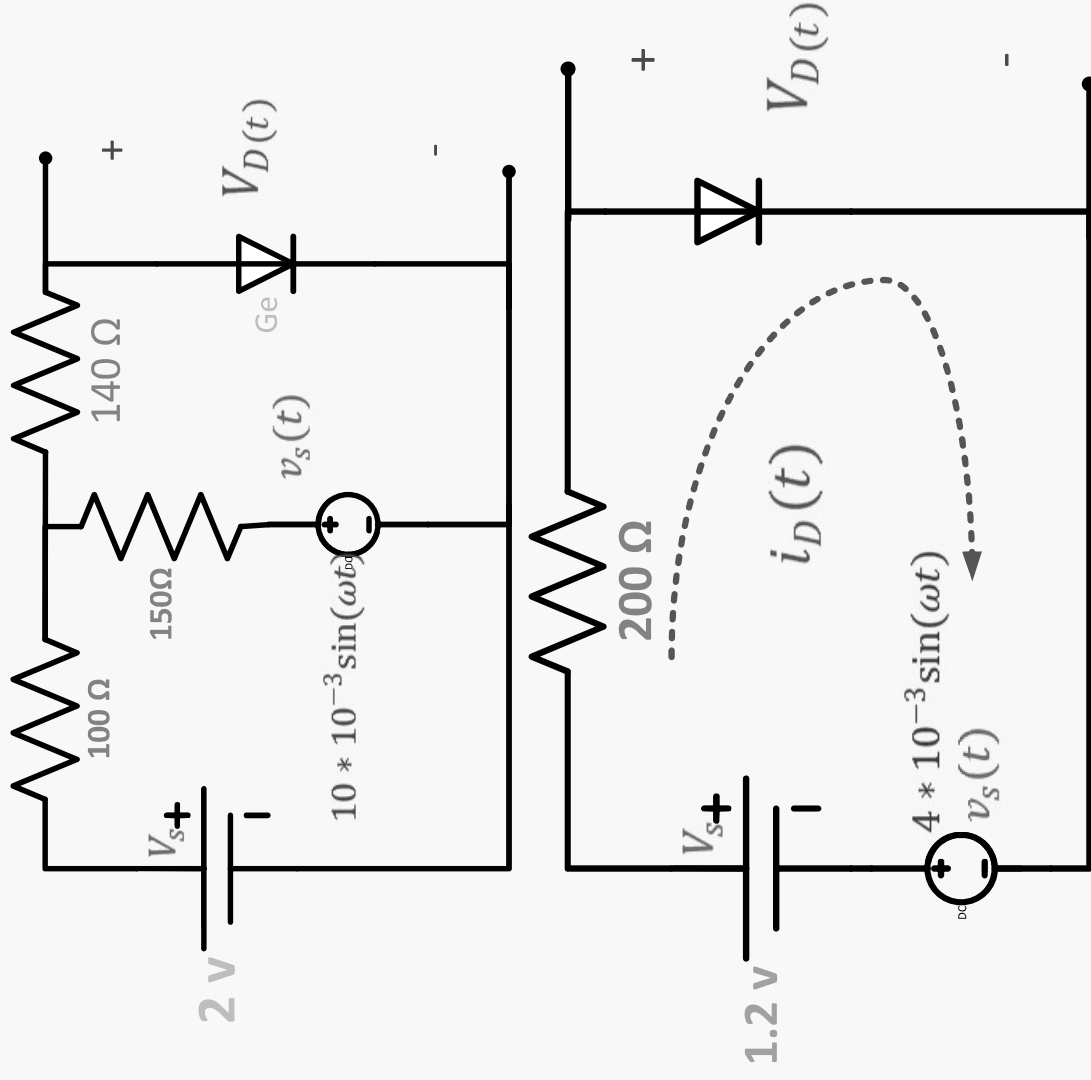
**$v_S(t) =$  ac component**

**and the amplitude of  $v_S(t)$  is small and the diode is always on ; we could use the superposition theorem to find the response (  $V_{D(t)}$  ,  $i_D(t)$  ) .**

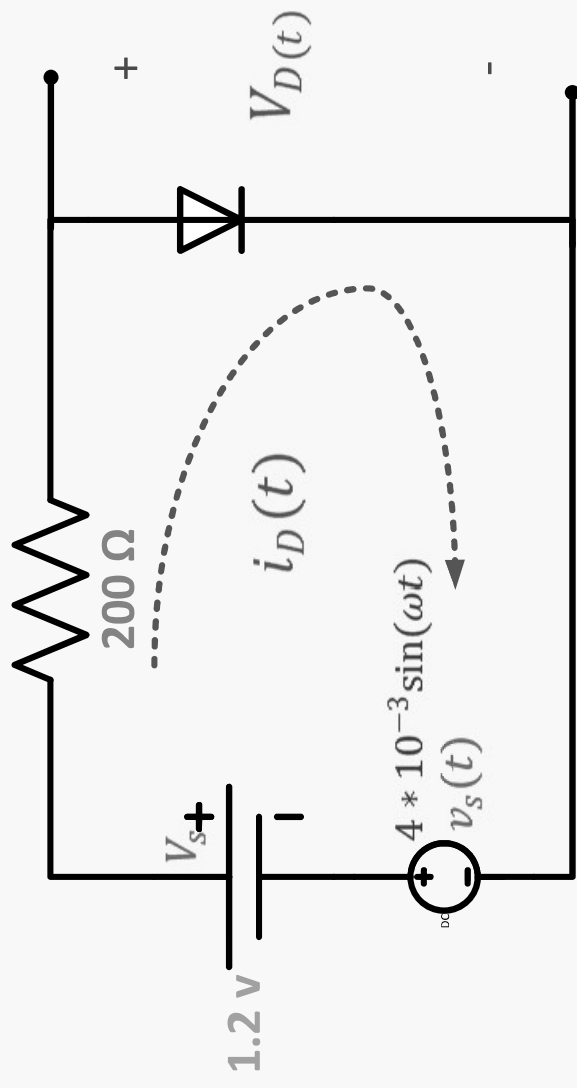
## Example

Find  $V_D(t)$

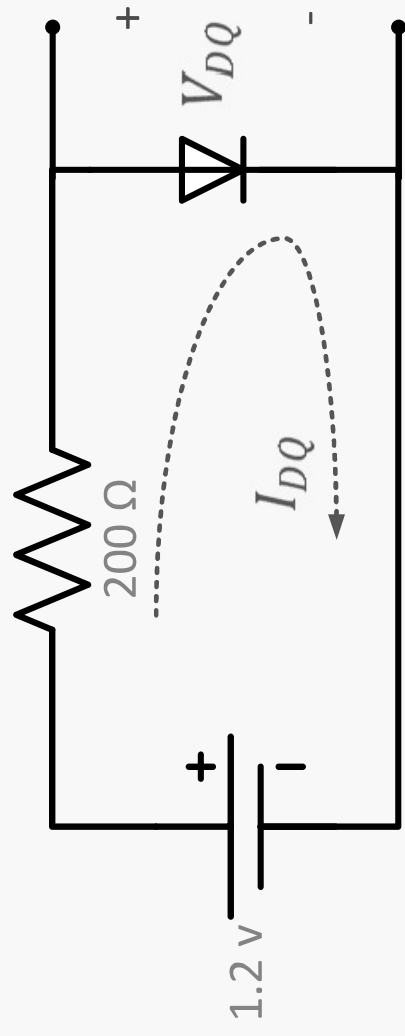
Using Thevenin's  
Theorem



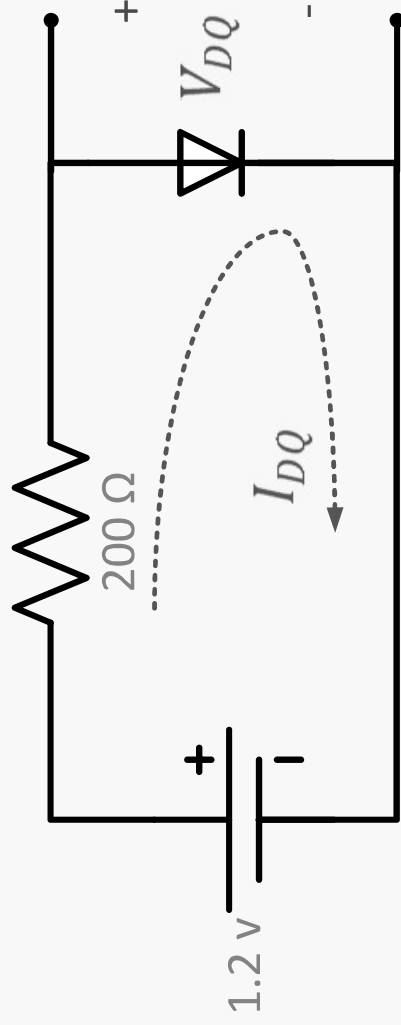
Since we have a dc source (1.2 v) and an ac signal ( $4 \times 10^{-3} \sin \omega t$  v) and the diode is always on ; we use superposition theorem to find  $V_D(t)$



1) to find  $V_{DQ}$  ( DC Analysis)



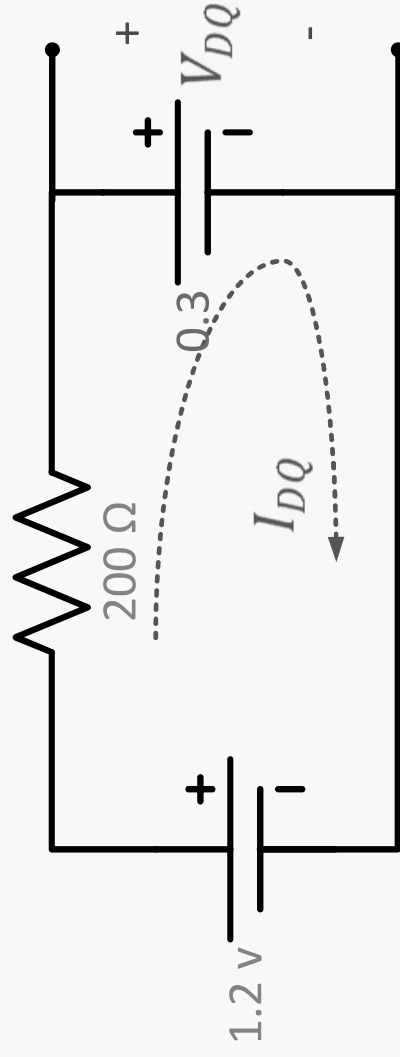




$$\therefore V_{DQ} = 0.3 \text{ V}$$

$$\text{and } I_{DQ} = \frac{1.2\text{v} - 0.3\text{v}}{200} = 4.5 \text{ mA}$$

$$\therefore r_d = \frac{V_T}{I_{DQ}} = \frac{25.69\text{mv}}{4.5\text{mA}} = 5.69 \Omega$$



2) To find  $V_d(t)$  (ac small signal )

$$v_d(t) = \frac{5.69}{200+5.69} \cdot 4 \times 10^{-3} \sin \omega t \text{ v}$$

$$v_d(t) = 0.1165 \times 10^{-3} \sin \omega t \text{ v}$$

$$\therefore V_D(t) = V_{DQ} + v_d(t)$$

$$V_D(t) = (0.3 + 0.1165 \times 10^{-3} \sin \omega t) \text{ v}$$

